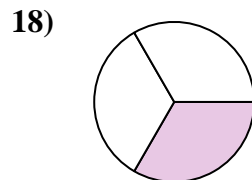
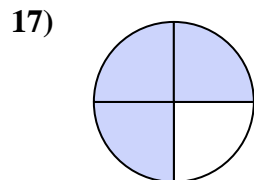
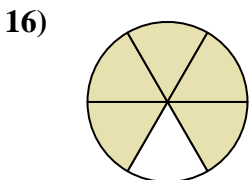
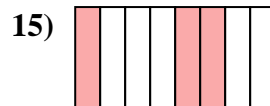
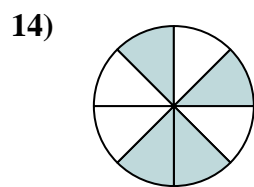
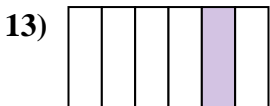

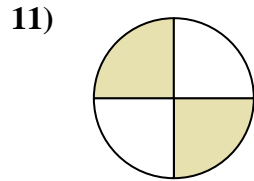
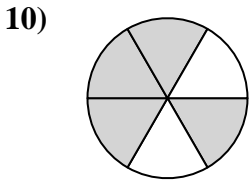
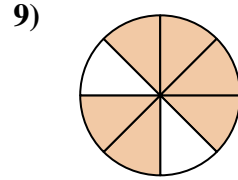
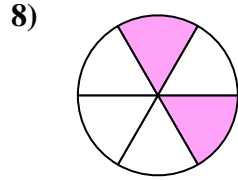
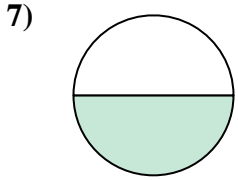
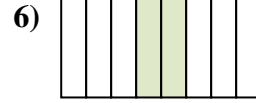
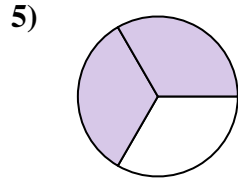
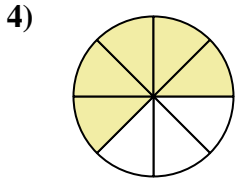
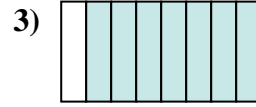
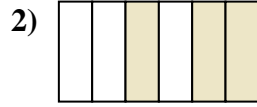
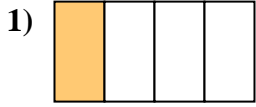




Escribe la cantidad sombreada como una fracción de la cantidad entera.



Respuestas

1. _____

2. _____

3. _____

4. _____

5. _____

6. _____

7. _____

8. _____

9. _____

10. _____

11. _____

12. _____

13. _____

14. _____

15. _____

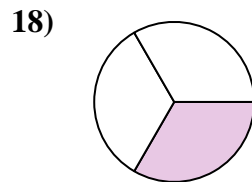
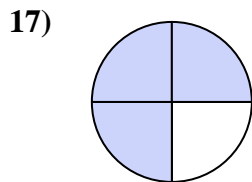
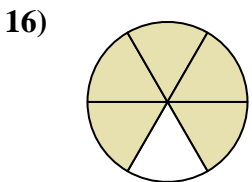
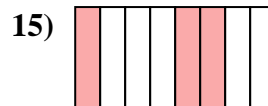
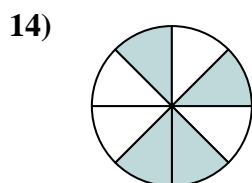
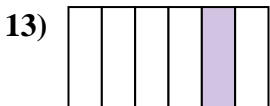
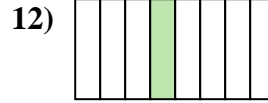
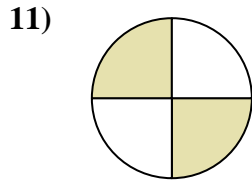
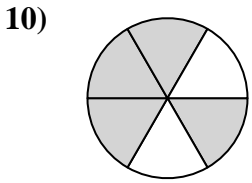
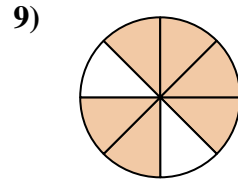
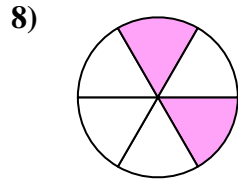
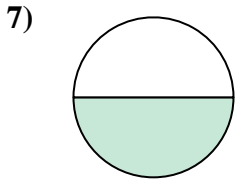
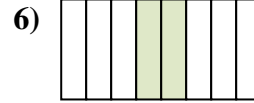
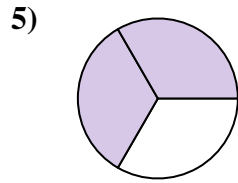
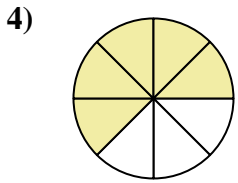
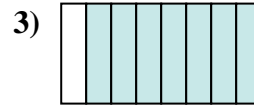
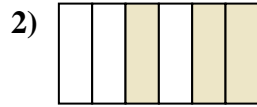
16. _____

17. _____

18. _____



Escribe la cantidad sombreada como una fracción de la cantidad entera.



Respuestas

1. 1/4

2. 3/6

3. 7/8

4. 5/8

5. 2/3

6. 2/8

7. 1/2

8. 2/6

9. 6/8

10. 4/6

11. 2/4

12. 1/8

13. 1/6

14. 4/8

15. 3/8

16. 5/6

17. 3/4

18. 1/3