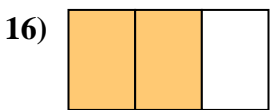
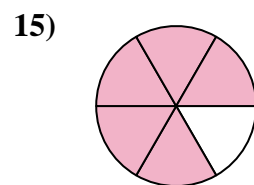
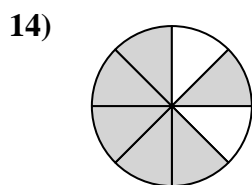
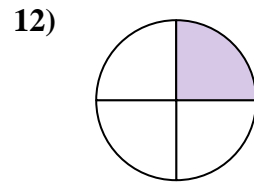
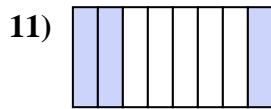
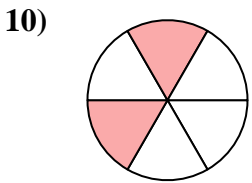
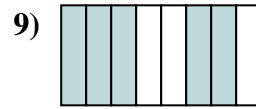
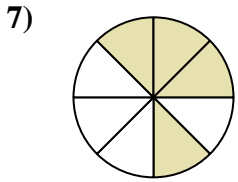
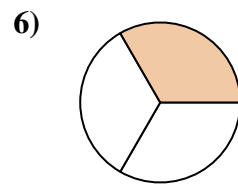
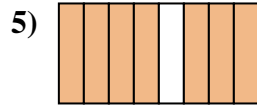
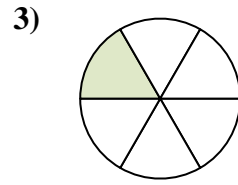
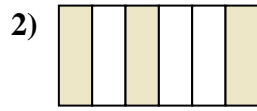
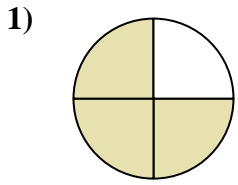




Escribe la cantidad sombreada como una fracción de la cantidad entera.



Respuestas

1. _____

2. _____

3. _____

4. _____

5. _____

6. _____

7. _____

8. _____

9. _____

10. _____

11. _____

12. _____

13. _____

14. _____

15. _____


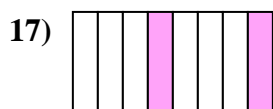

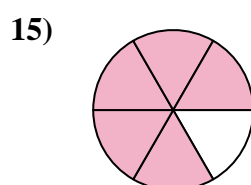
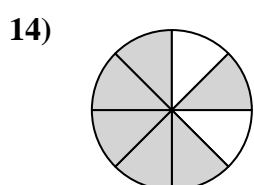
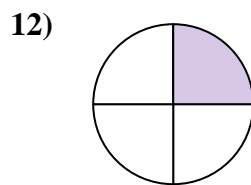
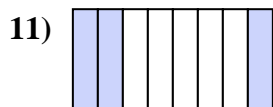
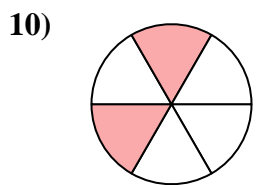
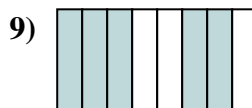
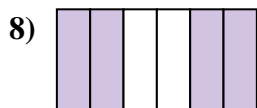
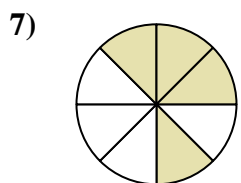
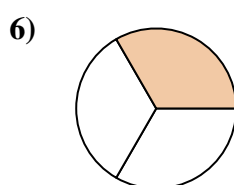
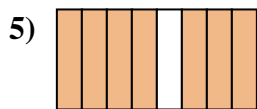
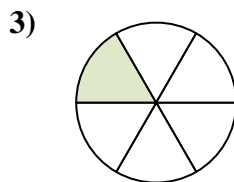
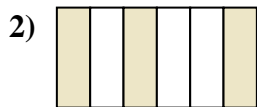
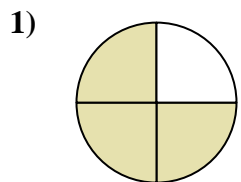
16. _____

17. _____

18. _____



Escribe la cantidad sombreada como una fracción de la cantidad entera.



Respuestas

1. 3/4

2. 3/6

3. 1/6

4. 1/2

5. 7/8

6. 1/3

7. 4/8

8. 4/6

9. 5/8

10. 2/6

11. 3/8

12. 1/4

13. 1/8

14. 6/8

15. 5/6

16. 2/3

17. 2/8

18. 2/4