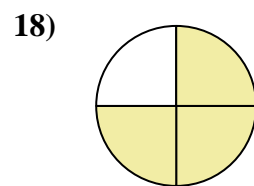
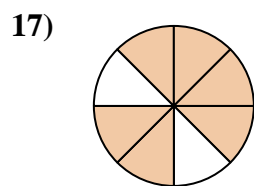
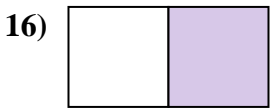
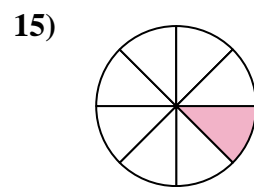
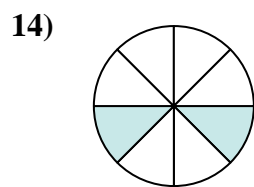
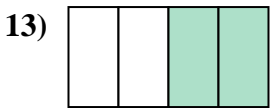
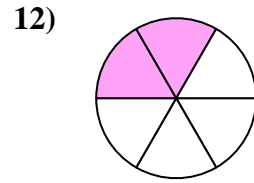
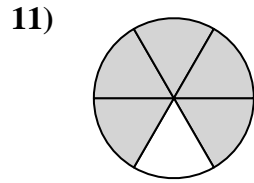
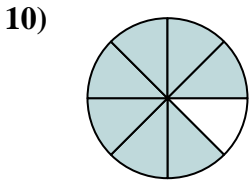
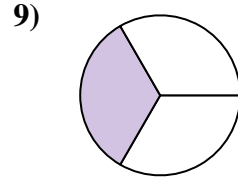
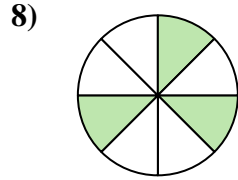
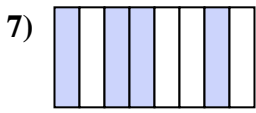
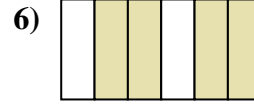
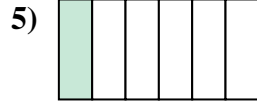
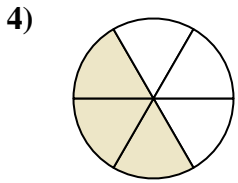
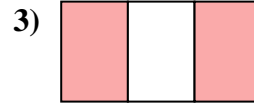
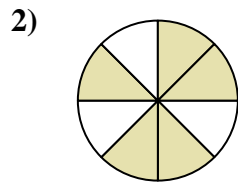
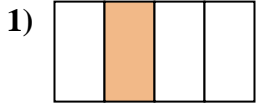




Escribe la cantidad sombreada como una fracción de la cantidad entera.



Respuestas

1. _____

2. _____

3. _____

4. _____

5. _____

6. _____

7. _____

8. _____

9. _____

10. _____

11. _____

12. _____

13. _____

14. _____

15. _____

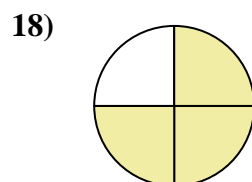
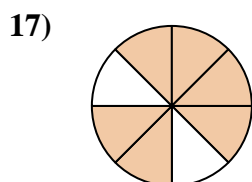

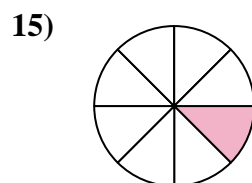
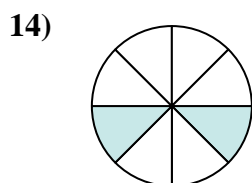

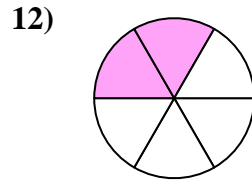
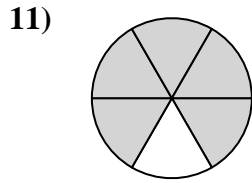
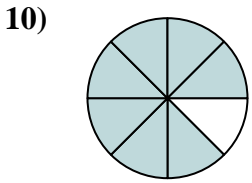
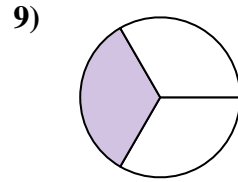
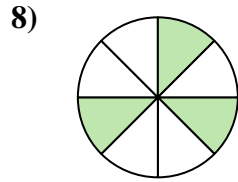
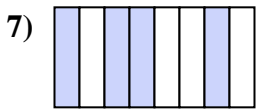
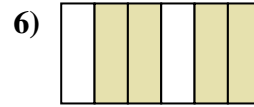
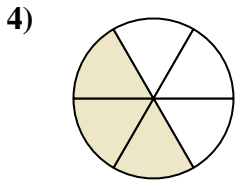
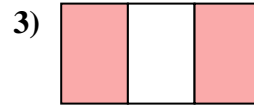
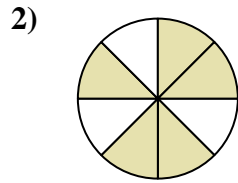
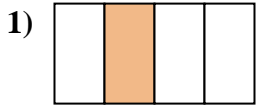
16. _____

17. _____

18. _____



Escribe la cantidad sombreada como una fracción de la cantidad entera.



Respuestas

1. 1/4

2. 5/8

3. 2/3

4. 3/6

5. 1/6

6. 4/6

7. 4/8

8. 3/8

9. 1/3

10. 7/8

11. 5/6

12. 2/6

13. 2/4

14. 2/8

15. 1/8

16. 1/2

17. 6/8

18. 3/4