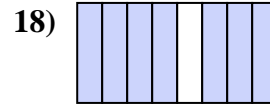
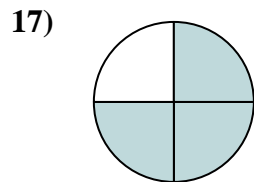
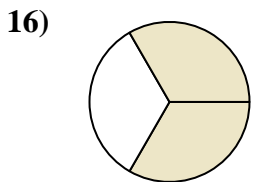
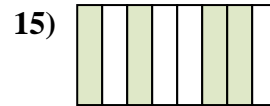
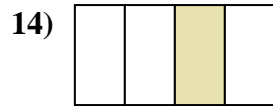
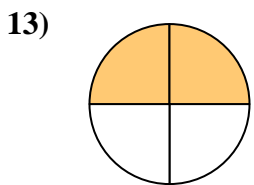
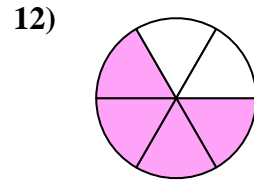
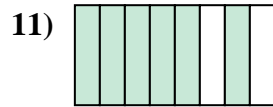
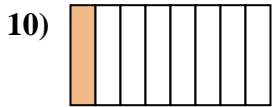
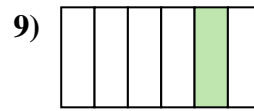
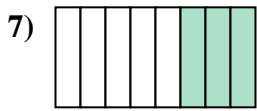
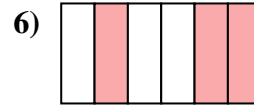
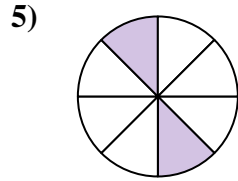
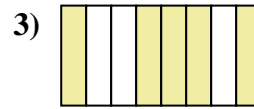
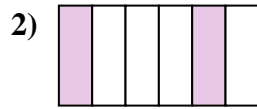
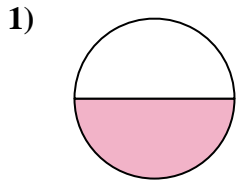




Escribe la cantidad sombreada como una fracción de la cantidad entera.

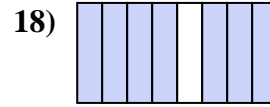
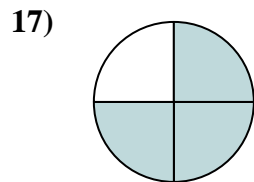
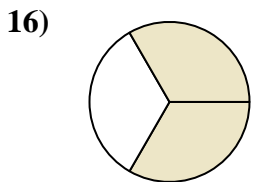
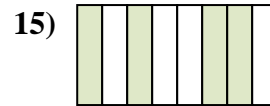
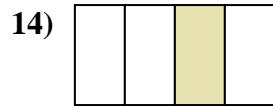
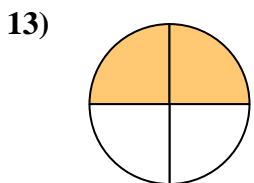
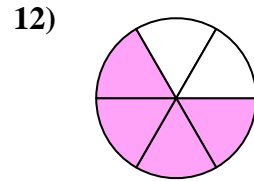
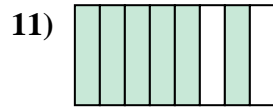
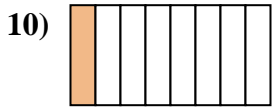
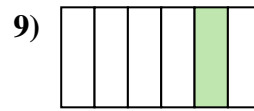
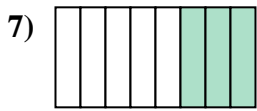
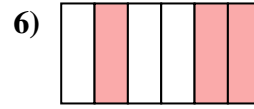
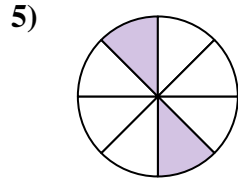
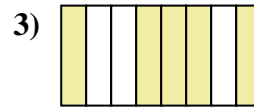
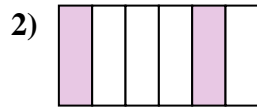
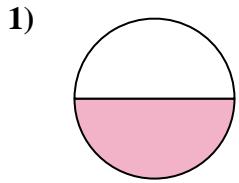


Respuestas

1. _____
2. _____
3. _____
4. _____
5. _____
6. _____
7. _____
8. _____
9. _____
10. _____
11. _____
12. _____
13. _____
14. _____
15. _____
16. _____
17. _____
18. _____



Escribe la cantidad sombreada como una fracción de la cantidad entera.



Respuestas

1. $\frac{1}{2}$

2. $\frac{2}{6}$

3. $\frac{5}{8}$

4. $\frac{5}{6}$

5. $\frac{2}{8}$

6. $\frac{3}{6}$

7. $\frac{3}{8}$

8. $\frac{1}{3}$

9. $\frac{1}{6}$

10. $\frac{1}{8}$

11. $\frac{6}{8}$

12. $\frac{4}{6}$

13. $\frac{2}{4}$

14. $\frac{1}{4}$

15. $\frac{4}{8}$

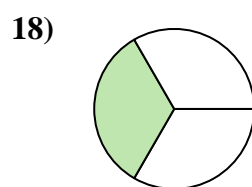
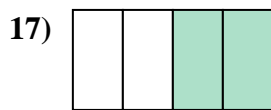
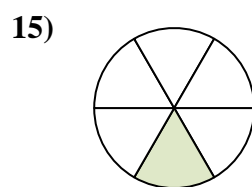
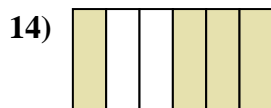

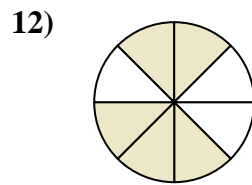
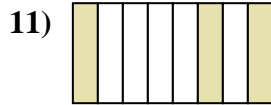
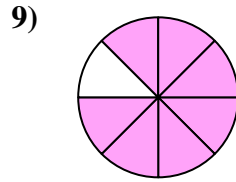
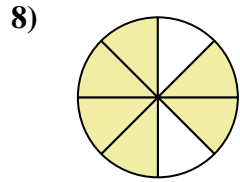
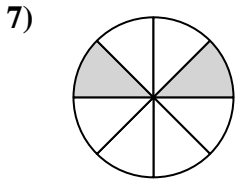

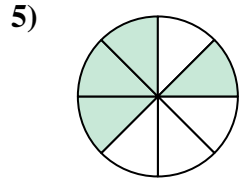
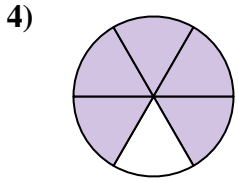
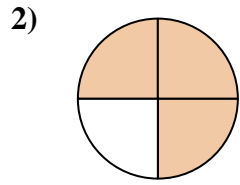
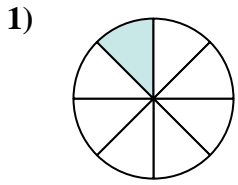
16. $\frac{2}{3}$

17. $\frac{3}{4}$

18. $\frac{7}{8}$



Escribe la cantidad sombreada como una fracción de la cantidad entera.



Respuestas

1. _____

2. _____

3. _____

4. _____

5. _____

6. _____

7. _____

8. _____

9. _____

10. _____

11. _____

12. _____

13. _____

14. _____

15. _____

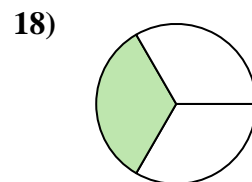

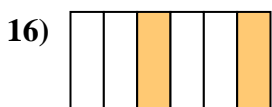
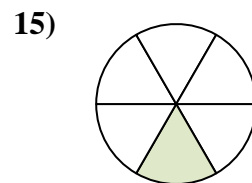
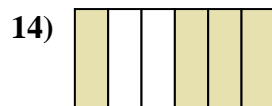

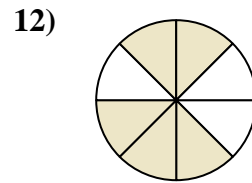
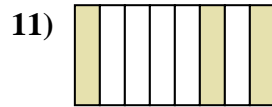

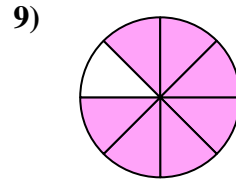
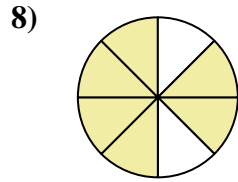
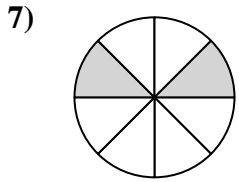
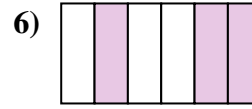
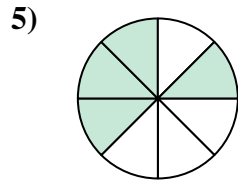
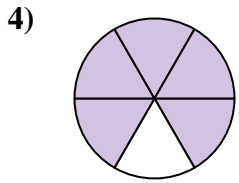
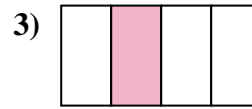
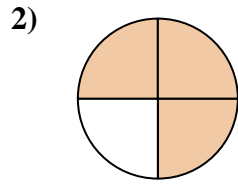
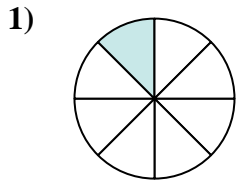
16. _____

17. _____

18. _____



Escribe la cantidad sombreada como una fracción de la cantidad entera.



Respuestas

1. $\frac{1}{8}$

2. $\frac{3}{4}$

3. $\frac{1}{4}$

4. $\frac{5}{6}$

5. $\frac{4}{8}$

6. $\frac{3}{6}$

7. $\frac{2}{8}$

8. $\frac{6}{8}$

9. $\frac{7}{8}$

10. $\frac{1}{2}$

11. $\frac{3}{8}$

12. $\frac{5}{8}$

13. $\frac{2}{3}$

14. $\frac{4}{6}$

15. $\frac{1}{6}$

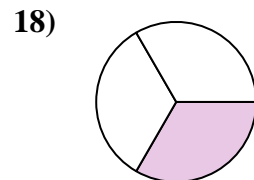
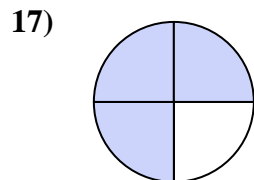
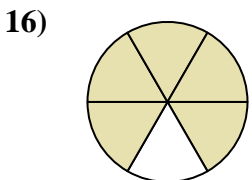
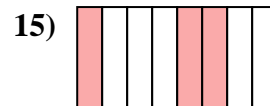
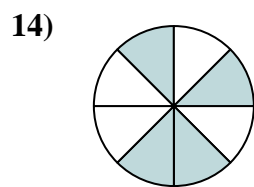
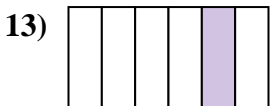
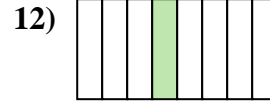
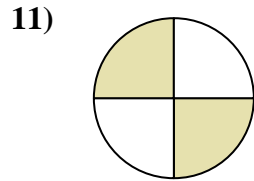
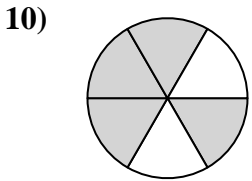
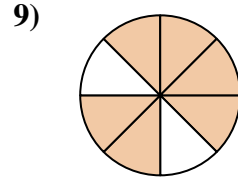
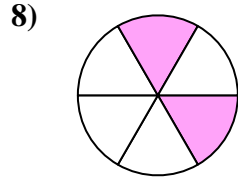
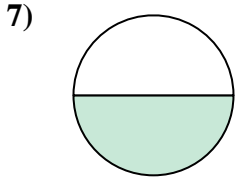
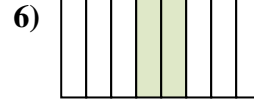
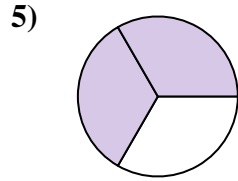
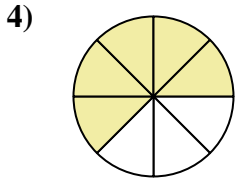
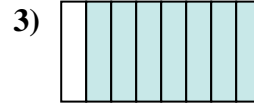
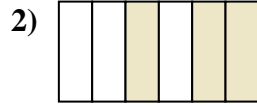
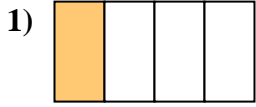
16. $\frac{2}{6}$

17. $\frac{2}{4}$

18. $\frac{1}{3}$



Escribe la cantidad sombreada como una fracción de la cantidad entera.

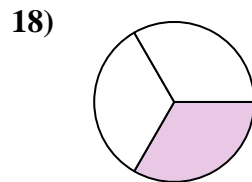
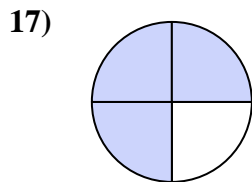
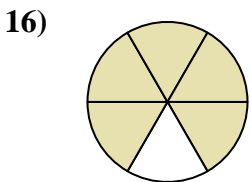
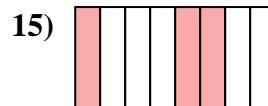
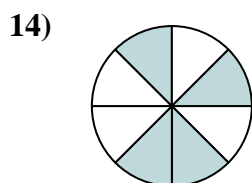
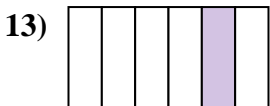
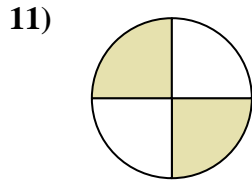
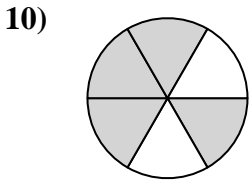
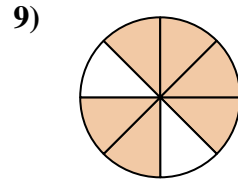
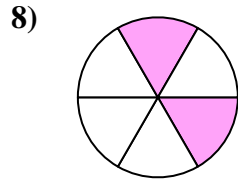
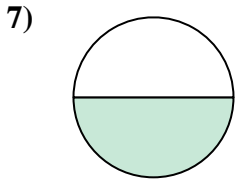
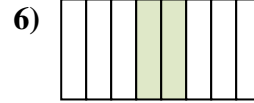
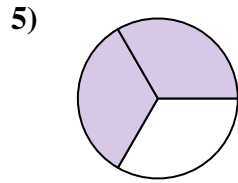
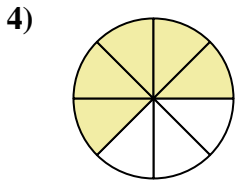
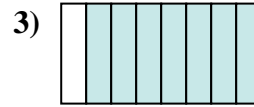
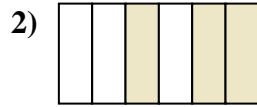


Respuestas

1. _____
2. _____
3. _____
4. _____
5. _____
6. _____
7. _____
8. _____
9. _____
10. _____
11. _____
12. _____
13. _____
14. _____
15. _____
16. _____
17. _____
18. _____



Escribe la cantidad sombreada como una fracción de la cantidad entera.



Respuestas

1. 1/4

2. 3/6

3. 7/8

4. 5/8

5. 2/3

6. 2/8

7. 1/2

8. 2/6

9. 6/8

10. 4/6

11. 2/4

12. 1/8

13. 1/6

14. 4/8

15. 3/8

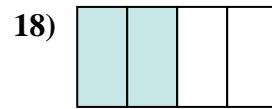
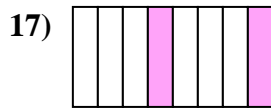
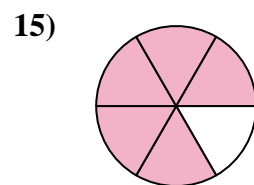
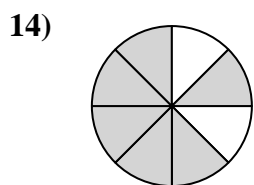
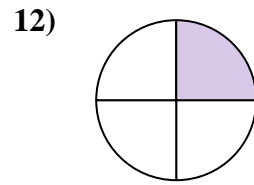
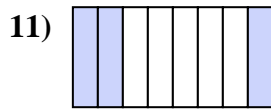
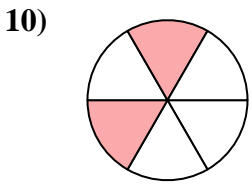
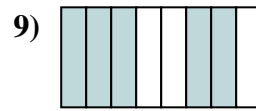
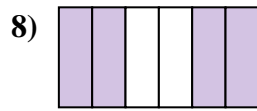
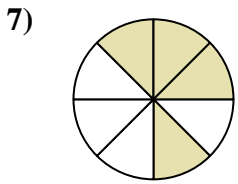
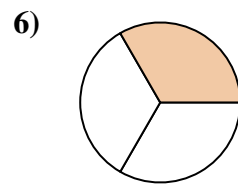
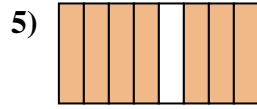
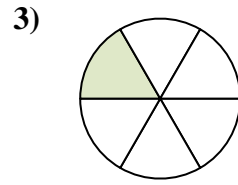
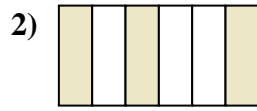
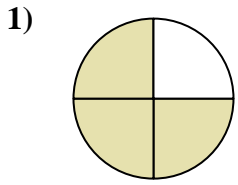
16. 5/6

17. 3/4

18. 1/3



Escribe la cantidad sombreada como una fracción de la cantidad entera.



Respuestas

1. _____

2. _____

3. _____

4. _____

5. _____

6. _____

7. _____

8. _____

9. _____

10. _____

11. _____

12. _____

13. _____

14. _____

15. _____

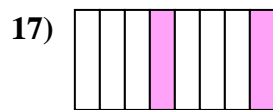
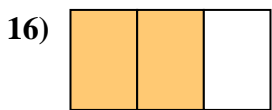
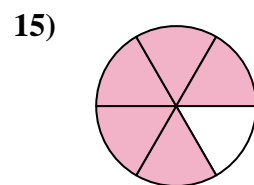
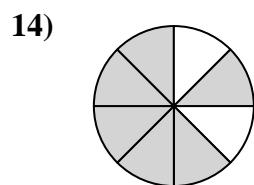
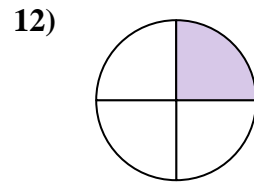
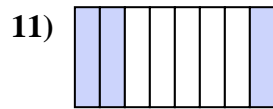
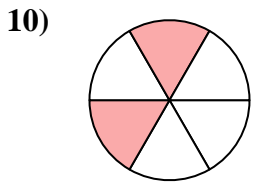
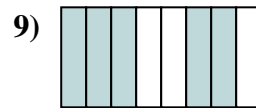
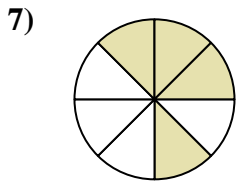
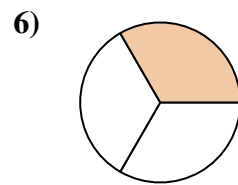
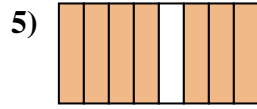
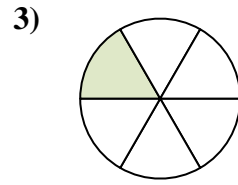
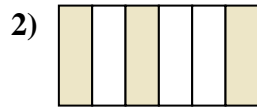
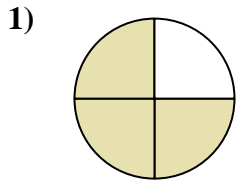
16. _____

17. _____

18. _____



Escribe la cantidad sombreada como una fracción de la cantidad entera.



Respuestas

1. 3/4

2. 3/6

3. 1/6

4. 1/2

5. 7/8

6. 1/3

7. 4/8

8. 4/6

9. 5/8

10. 2/6

11. 3/8

12. 1/4

13. 1/8

14. 6/8

15. 5/6

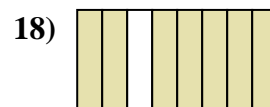
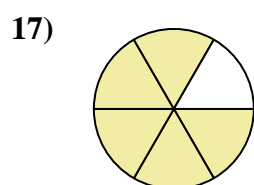
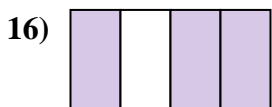

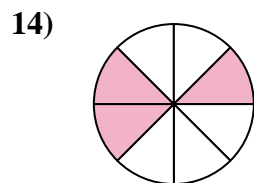
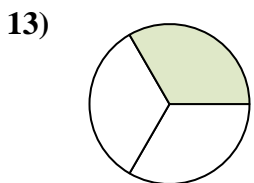
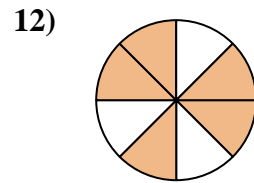
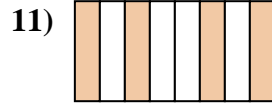
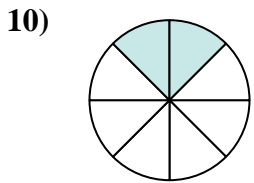
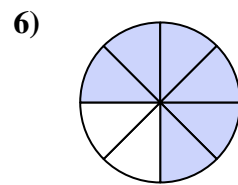
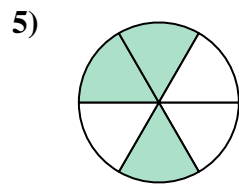

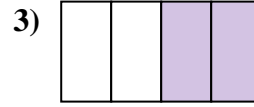
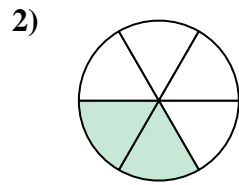

16. 2/3

17. 2/8

18. 2/4



Escribe la cantidad sombreada como una fracción de la cantidad entera.

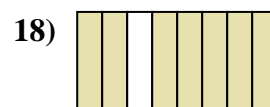
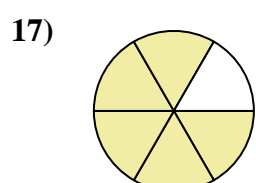
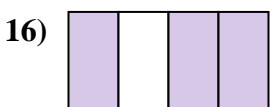

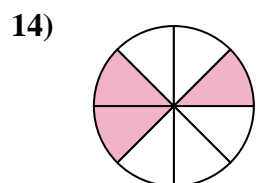
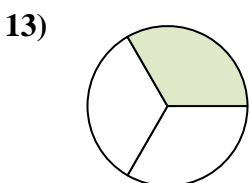
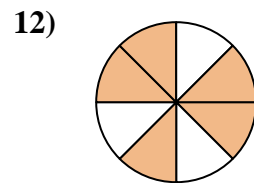
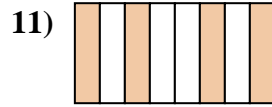
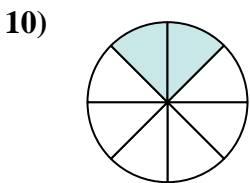
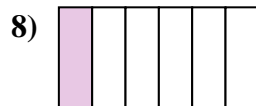
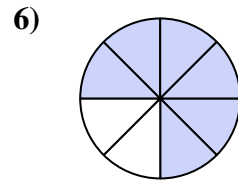
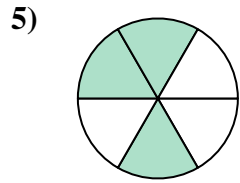

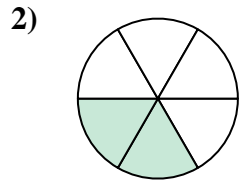



Respuestas

1. _____
2. _____
3. _____
4. _____
5. _____
6. _____
7. _____
8. _____
9. _____
10. _____
11. _____
12. _____
13. _____
14. _____
15. _____
16. _____
17. _____
18. _____



Escribe la cantidad sombreada como una fracción de la cantidad entera.



Respuestas

1. 1/2

2. 2/6

3. 2/4

4. 2/3

5. 3/6

6. 6/8

7. 1/4

8. 1/6

9. 1/8

10. 2/8

11. 4/8

12. 5/8

13. 1/3

14. 3/6

15. 4/6

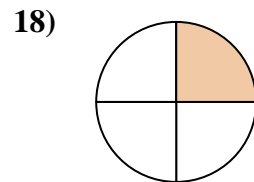
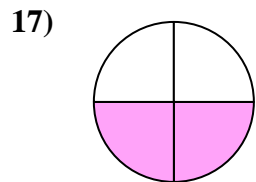
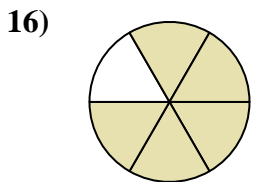
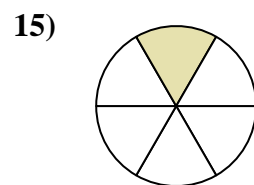
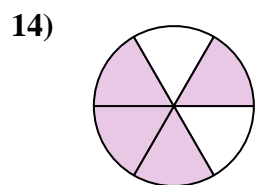
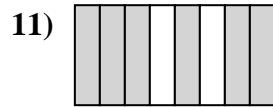
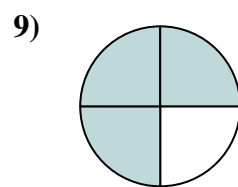
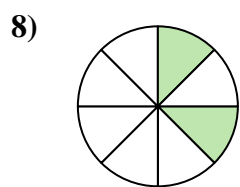
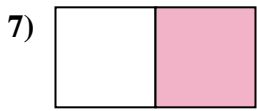
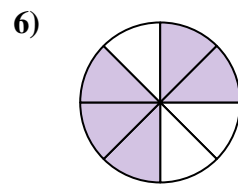
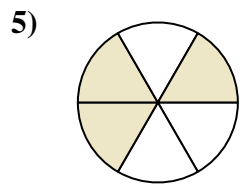
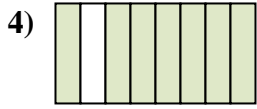
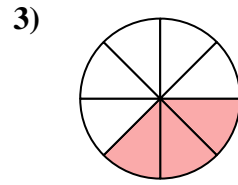
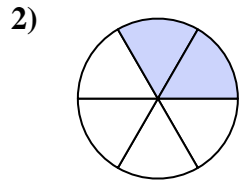
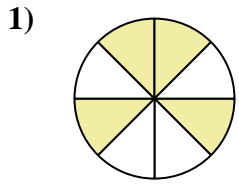
16. 3/4

17. 5/6

18. 7/8



Escribe la cantidad sombreada como una fracción de la cantidad entera.

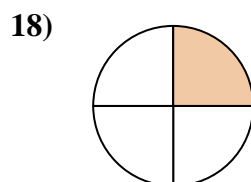
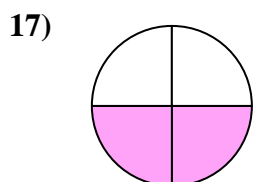
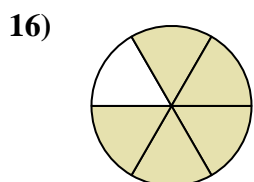
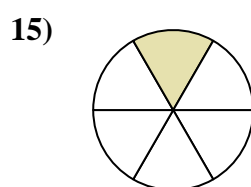
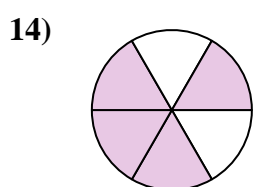

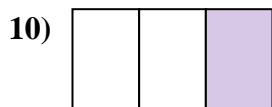
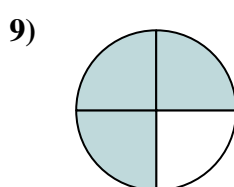
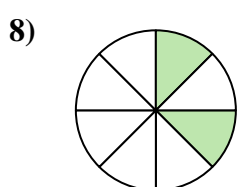

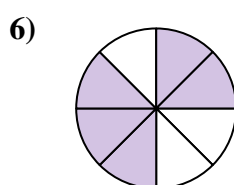
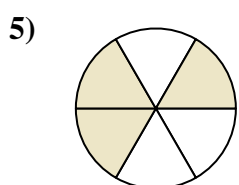
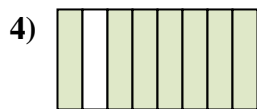
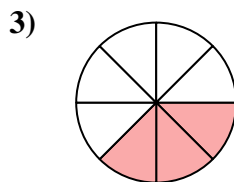
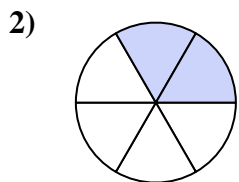
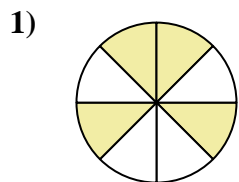


Respuestas

1. _____
2. _____
3. _____
4. _____
5. _____
6. _____
7. _____
8. _____
9. _____
10. _____
11. _____
12. _____
13. _____
14. _____
15. _____
16. _____
17. _____
18. _____



Escribe la cantidad sombreada como una fracción de la cantidad entera.



Respuestas

1. $\frac{4}{8}$

2. $\frac{2}{6}$

3. $\frac{3}{8}$

4. $\frac{7}{10}$

5. $\frac{3}{6}$

6. $\frac{5}{8}$

7. $\frac{1}{2}$

8. $\frac{2}{8}$

9. $\frac{3}{4}$

10. $\frac{1}{3}$

11. $\frac{6}{10}$

12. $\frac{2}{3}$

13. $\frac{1}{10}$

14. $\frac{4}{6}$

15. $\frac{1}{6}$

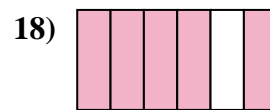
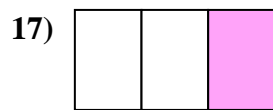
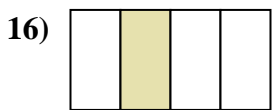
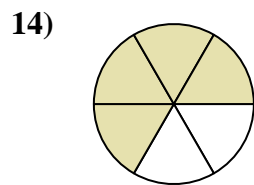
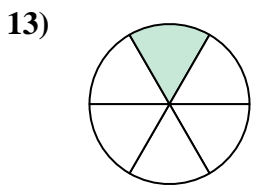
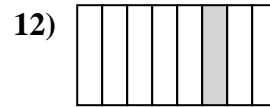
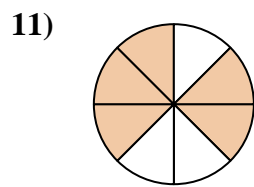
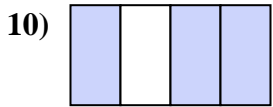
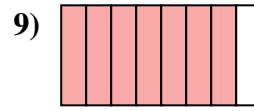
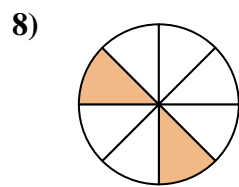
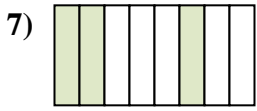
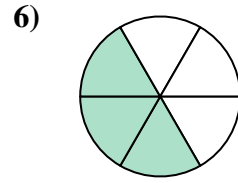
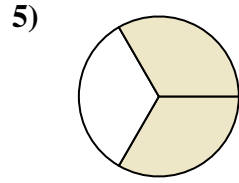
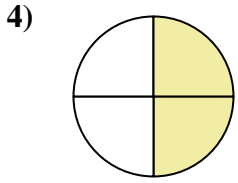
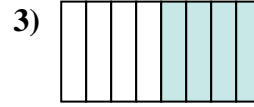
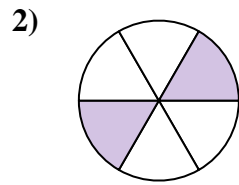
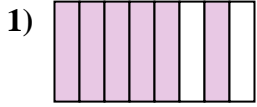
16. $\frac{5}{6}$

17. $\frac{2}{4}$

18. $\frac{1}{4}$



Escribe la cantidad sombreada como una fracción de la cantidad entera.

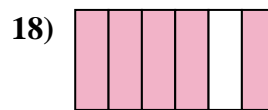
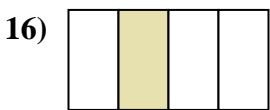
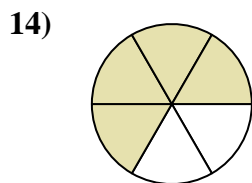
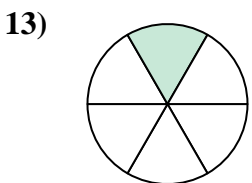
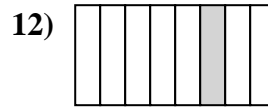
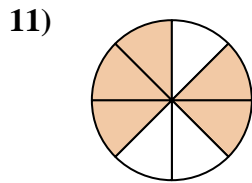
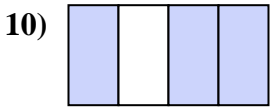
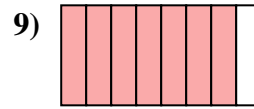
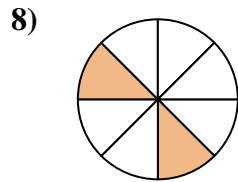
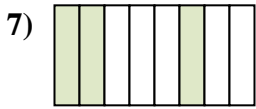
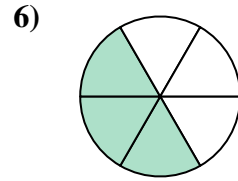
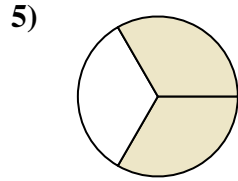
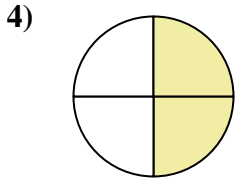
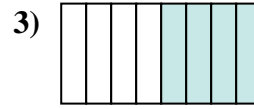
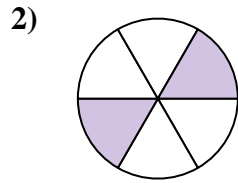
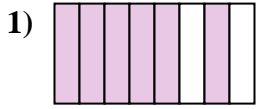


Respuestas

1. _____
2. _____
3. _____
4. _____
5. _____
6. _____
7. _____
8. _____
9. _____
10. _____
11. _____
12. _____
13. _____
14. _____
15. _____
16. _____
17. _____
18. _____



Escribe la cantidad sombreada como una fracción de la cantidad entera.



Respuestas

1. $\frac{6}{8}$

2. $\frac{2}{6}$

3. $\frac{4}{8}$

4. $\frac{2}{4}$

5. $\frac{2}{3}$

6. $\frac{3}{6}$

7. $\frac{3}{8}$

8. $\frac{2}{8}$

9. $\frac{7}{8}$

10. $\frac{3}{4}$

11. $\frac{5}{8}$

12. $\frac{1}{8}$

13. $\frac{1}{6}$

14. $\frac{4}{6}$

15. $\frac{1}{2}$

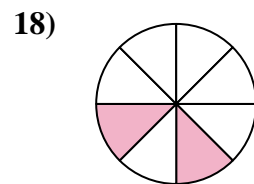
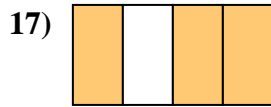
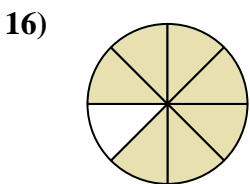
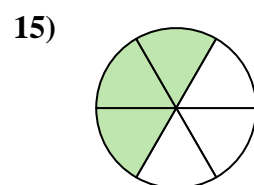

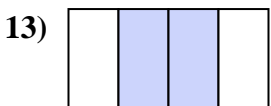
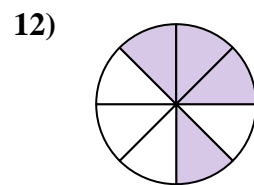
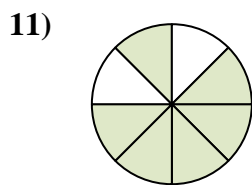
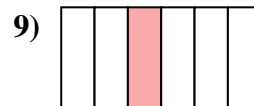
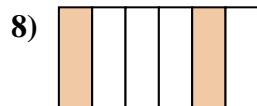
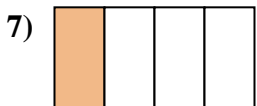
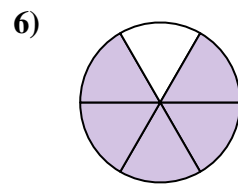
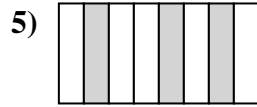
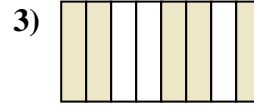
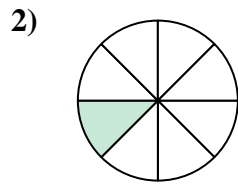
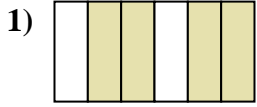
16. $\frac{1}{4}$

17. $\frac{1}{3}$

18. $\frac{5}{6}$



Escribe la cantidad sombreada como una fracción de la cantidad entera.

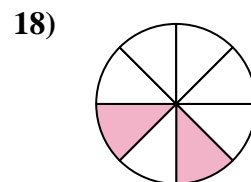
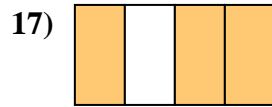
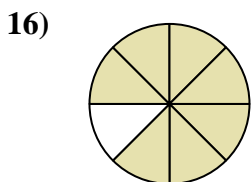
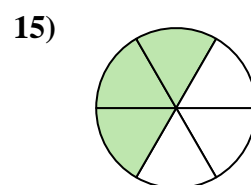

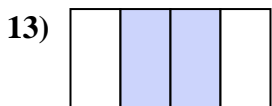
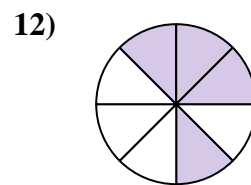
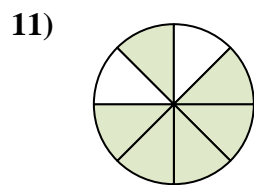
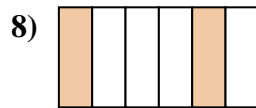
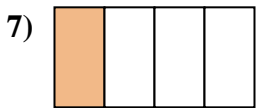
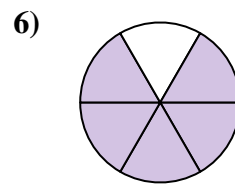
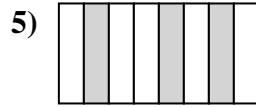
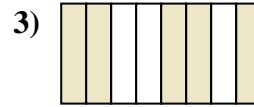
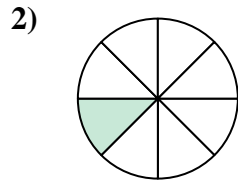
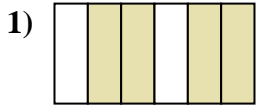


Respuestas

1. _____
2. _____
3. _____
4. _____
5. _____
6. _____
7. _____
8. _____
9. _____
10. _____
11. _____
12. _____
13. _____
14. _____
15. _____
16. _____
17. _____
18. _____



Escribe la cantidad sombreada como una fracción de la cantidad entera.



Respuestas

1. $\frac{4}{6}$

2. $\frac{1}{8}$

3. $\frac{5}{8}$

4. $\frac{2}{3}$

5. $\frac{3}{8}$

6. $\frac{5}{6}$

7. $\frac{1}{4}$

8. $\frac{2}{6}$

9. $\frac{1}{6}$

10. $\frac{1}{2}$

11. $\frac{6}{8}$

12. $\frac{4}{8}$

13. $\frac{2}{4}$

14. $\frac{1}{3}$

15. $\frac{3}{6}$

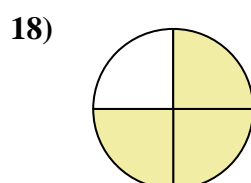
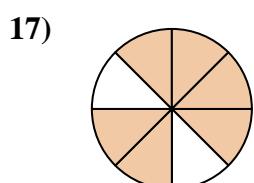
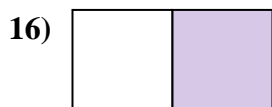
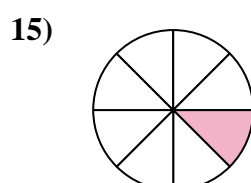
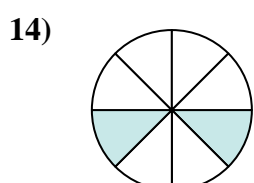

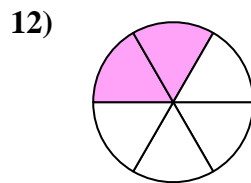
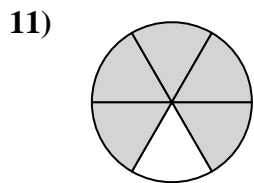
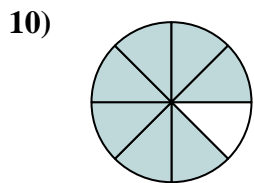
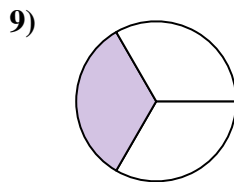
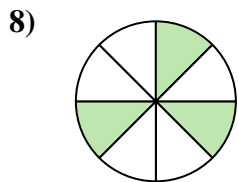
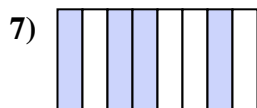
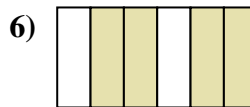
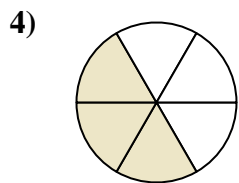

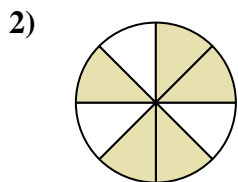
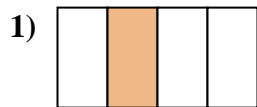
16. $\frac{7}{8}$

17. $\frac{3}{4}$

18. $\frac{2}{8}$



Escribe la cantidad sombreada como una fracción de la cantidad entera.



Respuestas

1. _____

2. _____

3. _____

4. _____

5. _____

6. _____

7. _____

8. _____

9. _____

10. _____

11. _____

12. _____

13. _____

14. _____

15. _____

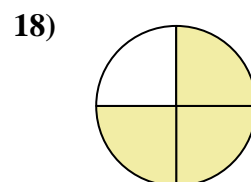
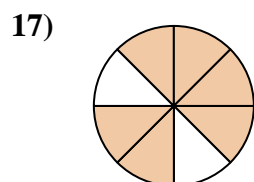

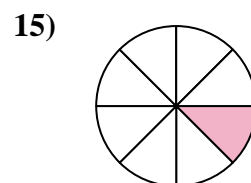
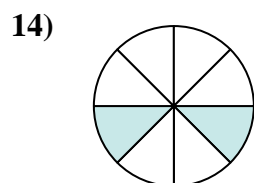

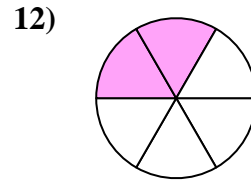
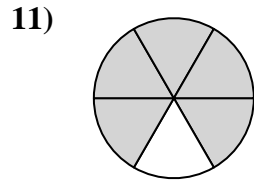
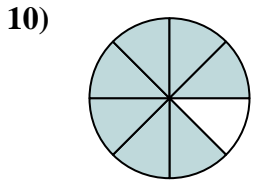
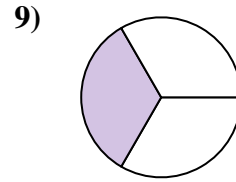
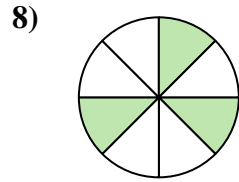
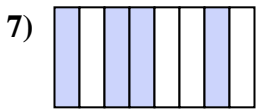
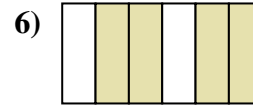
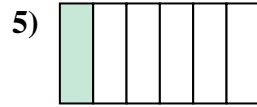
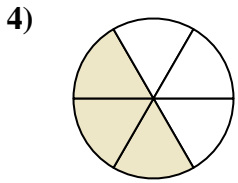
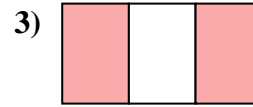
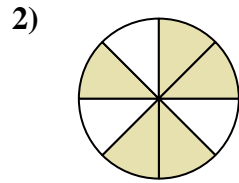
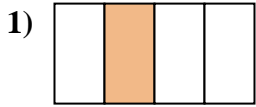
16. _____

17. _____

18. _____



Escribe la cantidad sombreada como una fracción de la cantidad entera.



Respuestas

1. 1/4

2. 5/8

3. 2/3

4. 3/6

5. 1/6

6. 4/6

7. 4/8

8. 3/8

9. 1/3

10. 7/8

11. 5/6

12. 2/6

13. 2/4

14. 2/8

15. 1/8

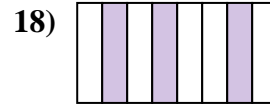
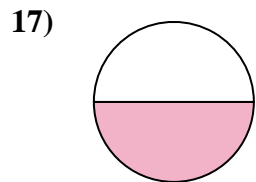
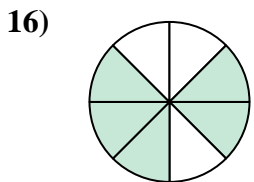

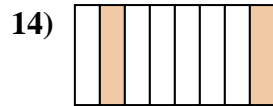
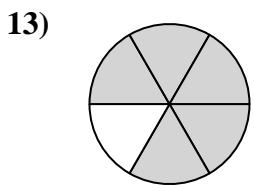
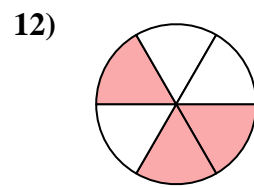

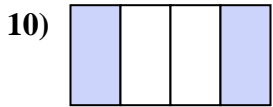

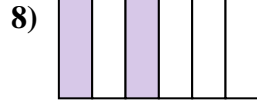
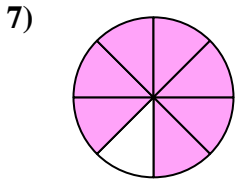
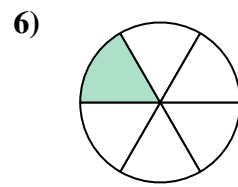
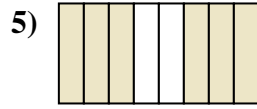
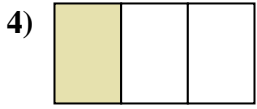
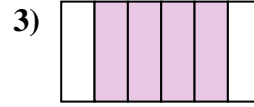
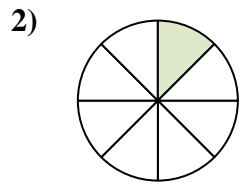
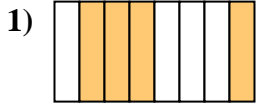
16. 1/2

17. 6/8

18. 3/4



Escribe la cantidad sombreada como una fracción de la cantidad entera.

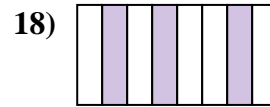
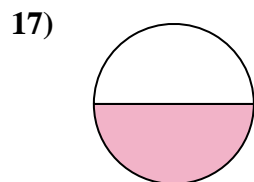
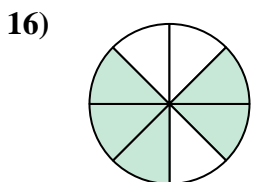

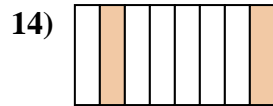
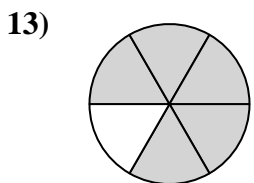
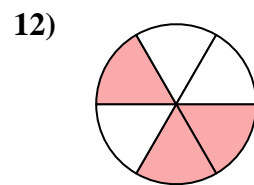

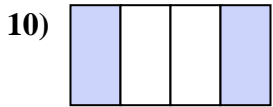
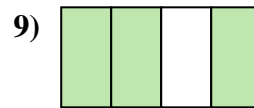
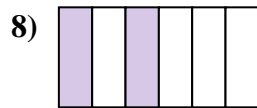
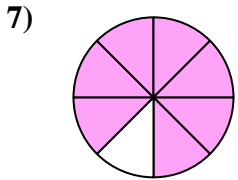
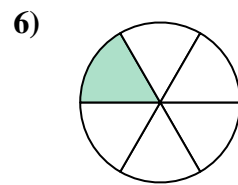
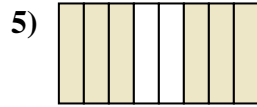

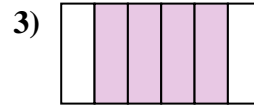
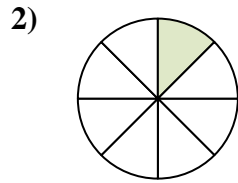
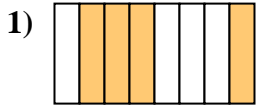


Respuestas

1. _____
2. _____
3. _____
4. _____
5. _____
6. _____
7. _____
8. _____
9. _____
10. _____
11. _____
12. _____
13. _____
14. _____
15. _____
16. _____
17. _____
18. _____



Escribe la cantidad sombreada como una fracción de la cantidad entera.



Respuestas

1. $\frac{4}{8}$

2. $\frac{1}{8}$

3. $\frac{4}{6}$

4. $\frac{1}{3}$

5. $\frac{6}{8}$

6. $\frac{1}{6}$

7. $\frac{7}{8}$

8. $\frac{2}{6}$

9. $\frac{3}{4}$

10. $\frac{2}{4}$

11. $\frac{2}{3}$

12. $\frac{3}{6}$

13. $\frac{5}{6}$

14. $\frac{2}{8}$

15. $\frac{1}{4}$

16. $\frac{5}{8}$

17. $\frac{1}{2}$

18. $\frac{3}{8}$