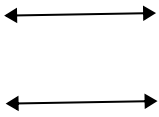




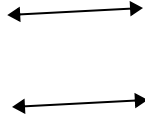
Usar 'Paralela', 'Perpendicular' o 'Intersección' para describir las líneas.

Respuestas

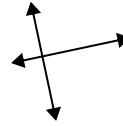
1)



2)



3)



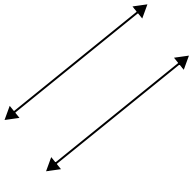
1. _____

2. _____

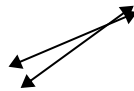
3. _____

4. _____

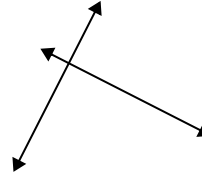
4)



5)



6)



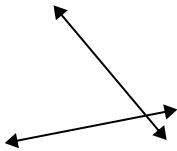
5. _____

6. _____

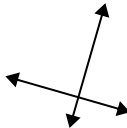
7. _____

8. _____

7)



8)



9)



9. _____

10. _____

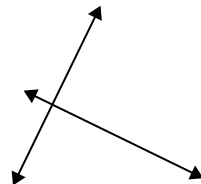
11. _____

12. _____

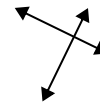
10)



11)



12)

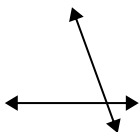


13. _____

14. _____

15. _____

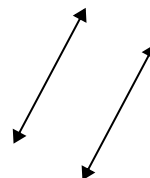
13)



14)

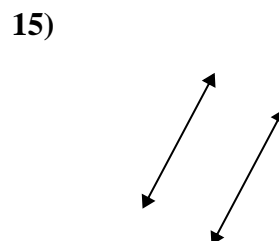
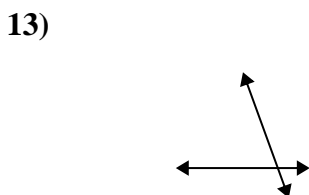
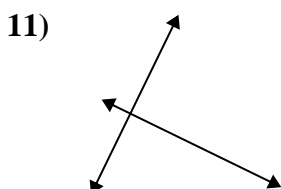
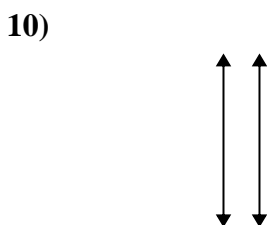
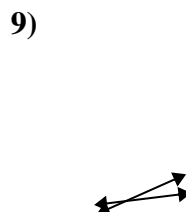
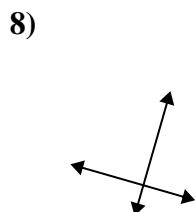
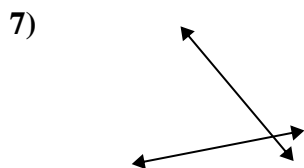
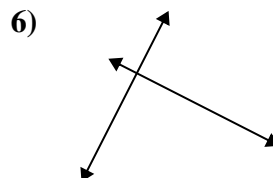
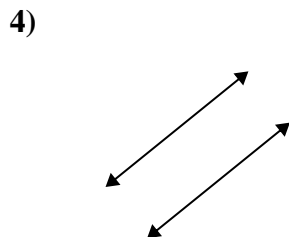
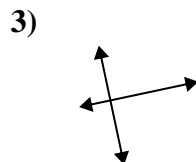
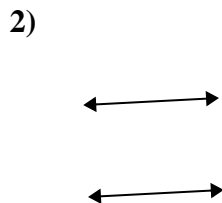
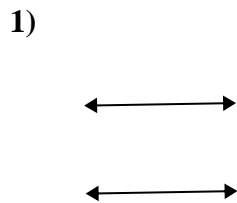


15)





Usar 'Paralela', 'Perpendicular' o 'Intersección' para describir las líneas.



Respuestas

1. paralelo

2. paralelo

3. perp & inter

4. paralelo

5. intersección

6. perp & inter

7. intersección

8. perp & inter

9. intersección

10. paralelo

11. perp & inter

12. perp & inter

13. intersección

14. intersección

15. paralelo