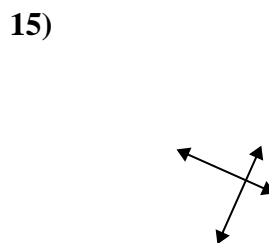
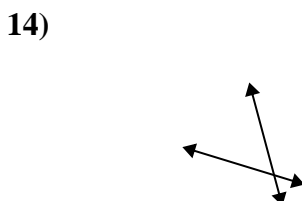
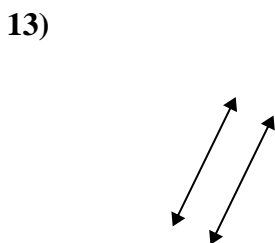
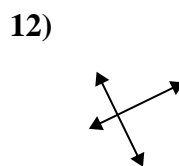
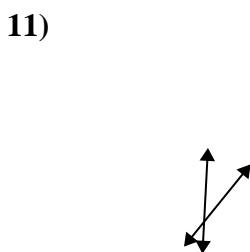
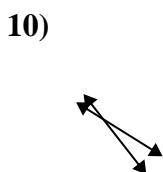
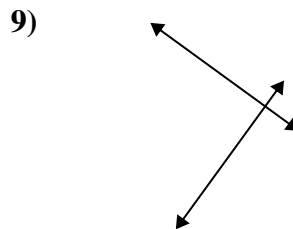
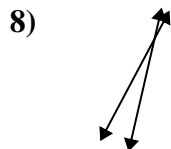
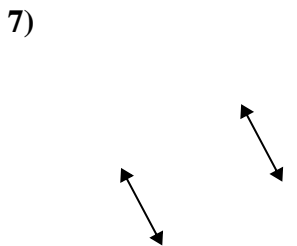
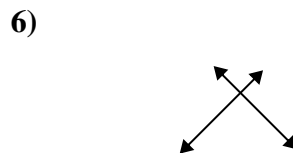
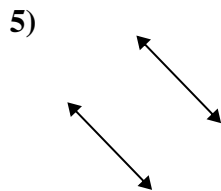
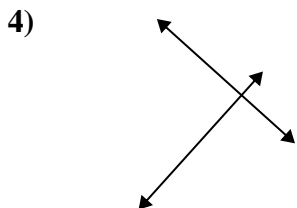
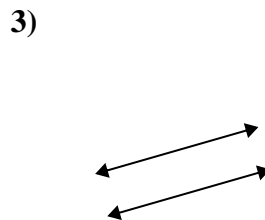
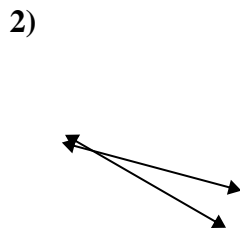
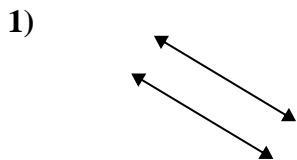




Usar 'Paralela', 'Perpendicular' o 'Intersección' para describir las líneas.

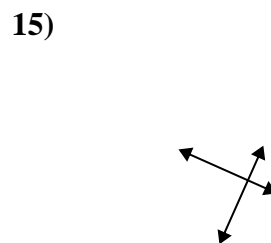
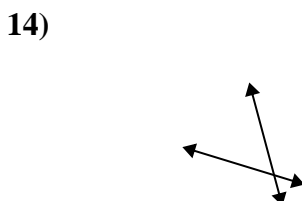
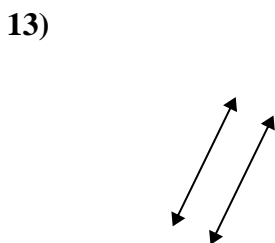
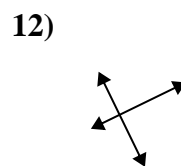
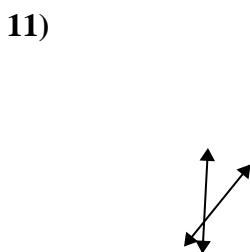
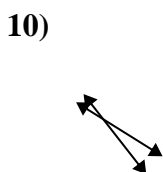
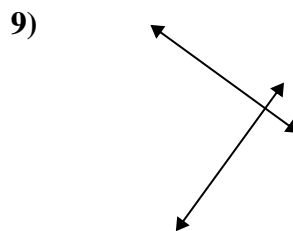
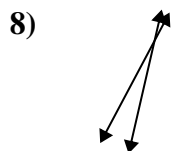
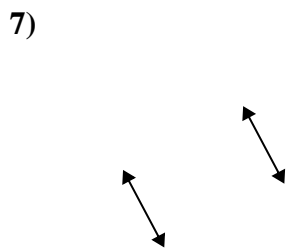
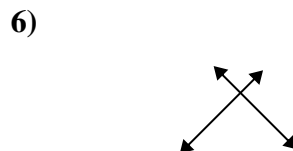
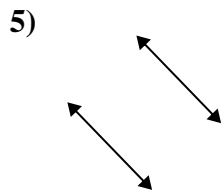
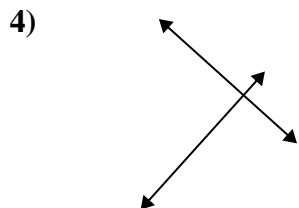
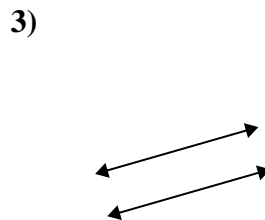
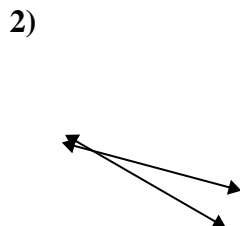
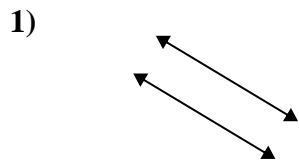
Respuestas



1. _____
2. _____
3. _____
4. _____
5. _____
6. _____
7. _____
8. _____
9. _____
10. _____
11. _____
12. _____
13. _____
14. _____
15. _____



Usar 'Paralela', 'Perpendicular' o 'Intersección' para describir las líneas.



Respuestas

1. paralelo

2. intersección

3. paralelo

4. perp & inter

5. paralelo

6. perp & inter

7. paralelo

8. intersección

9. perp & inter

10. intersección

11. intersección

12. perp & inter

13. paralelo

14. intersección

15. perp & inter