



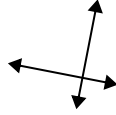
Usar 'Paralela', 'Perpendicular' o 'Intersección' para describir las líneas.

Respuestas

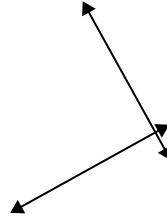
1)



2)



3)



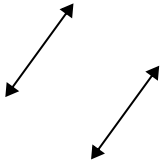
1. _____

2. _____

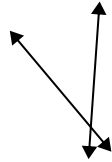
3. _____

4. _____

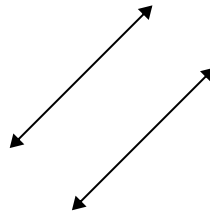
4)



5)



6)



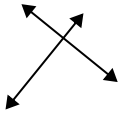
5. _____

6. _____

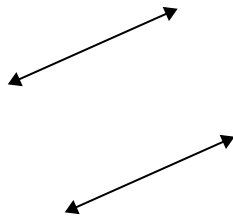
7. _____

8. _____

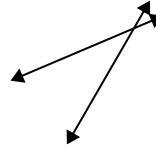
7)



8)



9)



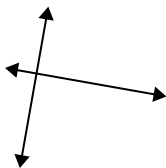
9. _____

10. _____

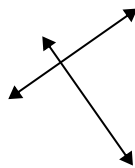
11. _____

12. _____

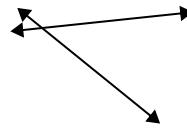
10)



11)



12)

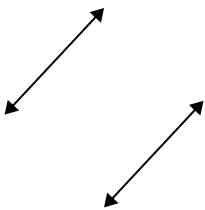


13. _____

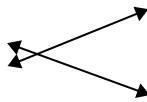
14. _____

15. _____

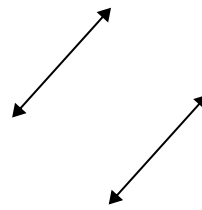
13)



14)



15)



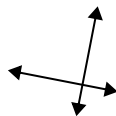


Usar 'Paralela', 'Perpendicular' o 'Intersección' para describir las líneas.

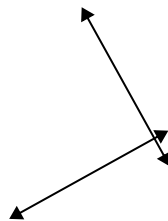
1)



2)



3)



1. intersección

2. perp & inter

3. perp & inter

4. paralelo

5. intersección

6. paralelo

7. perp & inter

8. paralelo

9. intersección

10. perp & inter

11. perp & inter

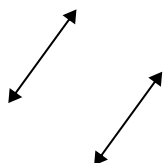
12. intersección

13. paralelo

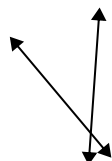
14. intersección

15. paralelo

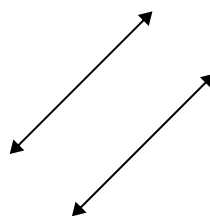
4)



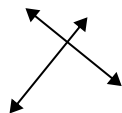
5)



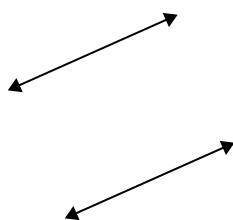
6)



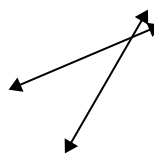
7)



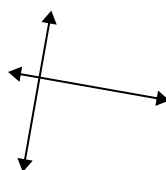
8)



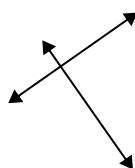
9)



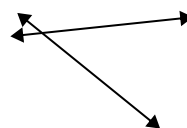
10)



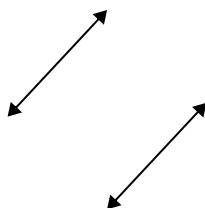
11)



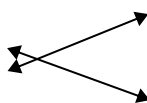
12)



13)



14)



15)

