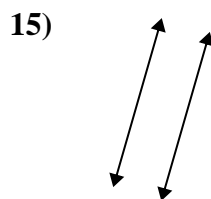
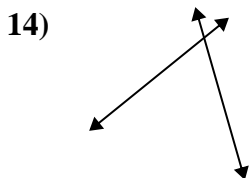
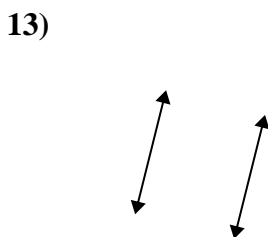
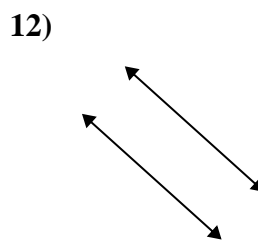
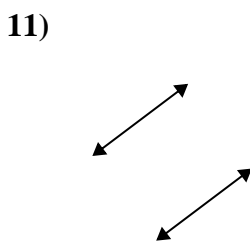
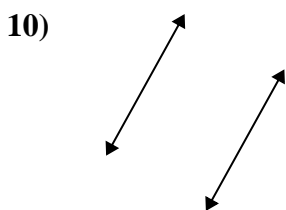
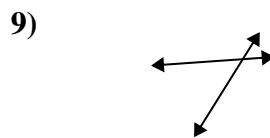
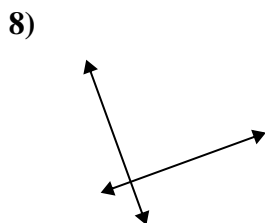
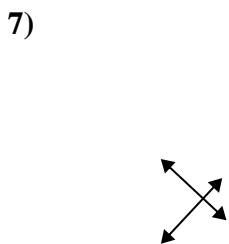
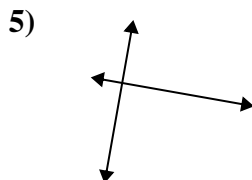
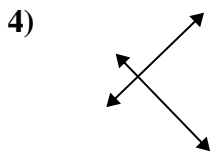
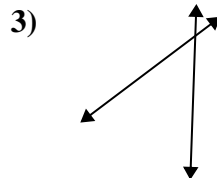
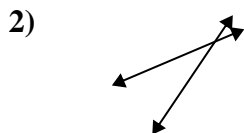
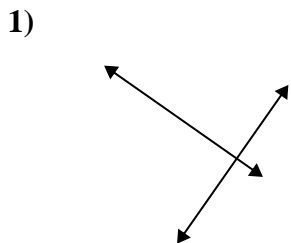




Usar 'Paralela', 'Perpendicular' o 'Intersección' para describir las líneas.

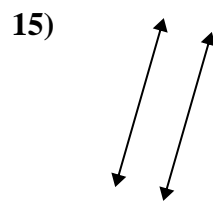
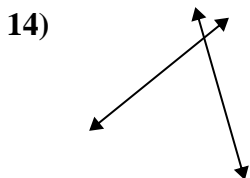
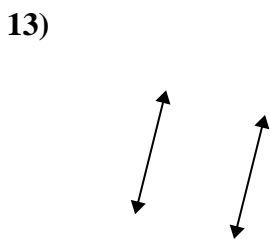
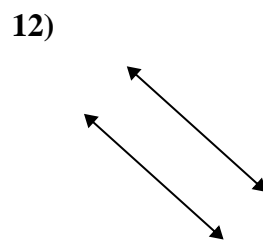
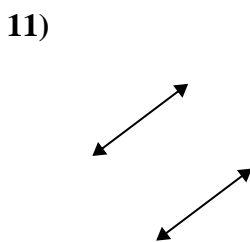
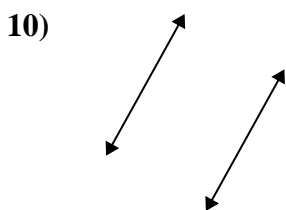
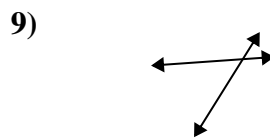
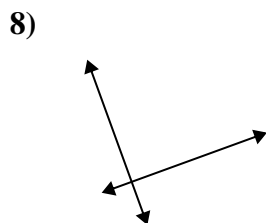
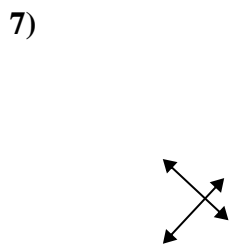
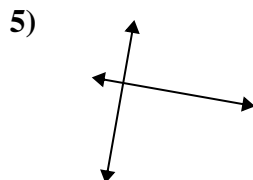
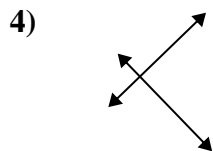
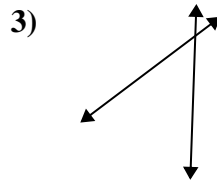
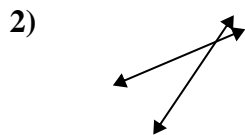
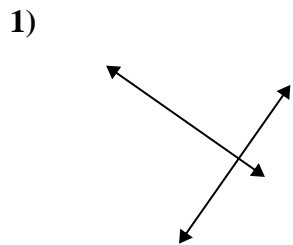
Respuestas



- 1. \_\_\_\_\_
- 2. \_\_\_\_\_
- 3. \_\_\_\_\_
- 4. \_\_\_\_\_
- 5. \_\_\_\_\_
- 6. \_\_\_\_\_
- 7. \_\_\_\_\_
- 8. \_\_\_\_\_
- 9. \_\_\_\_\_
- 10. \_\_\_\_\_
- 11. \_\_\_\_\_
- 12. \_\_\_\_\_
- 13. \_\_\_\_\_
- 14. \_\_\_\_\_
- 15. \_\_\_\_\_



Usar 'Paralela', 'Perpendicular' o 'Intersección' para describir las líneas.



**Respuestas**

1. perp & inter
2. intersección
3. intersección
4. perp & inter
5. perp & inter
6. intersección
7. perp & inter
8. perp & inter
9. intersección
10. paralelo
11. paralelo
12. paralelo
13. paralelo
14. intersección
15. paralelo