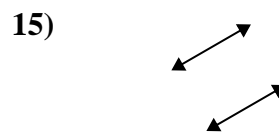
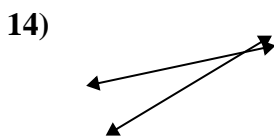
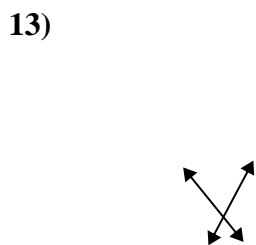
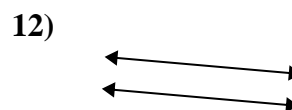
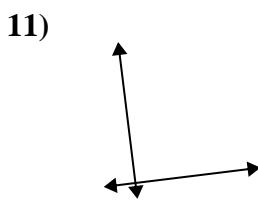
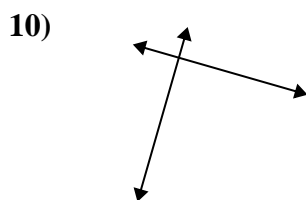
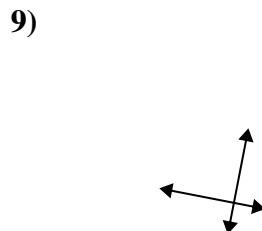
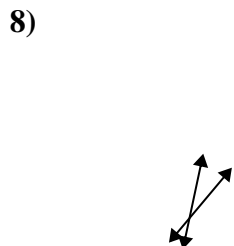
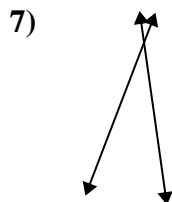
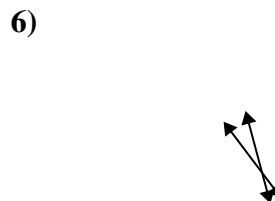
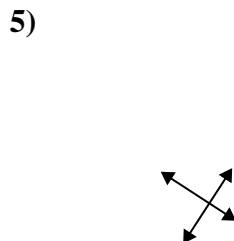
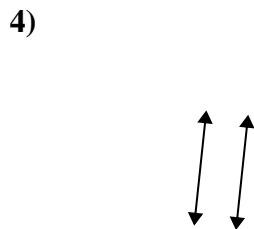
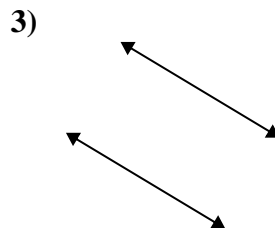
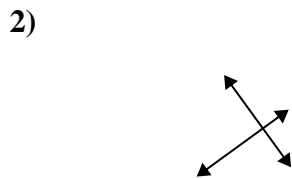
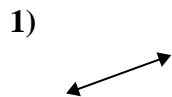




Usar 'Paralela', 'Perpendicular' o 'Intersección' para describir las líneas.

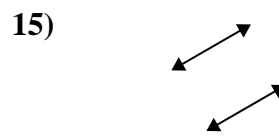
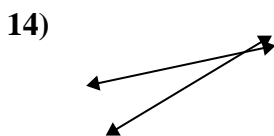
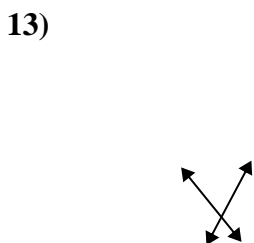
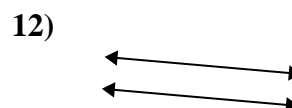
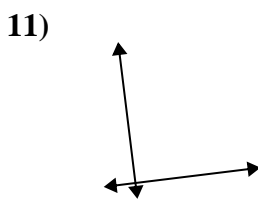
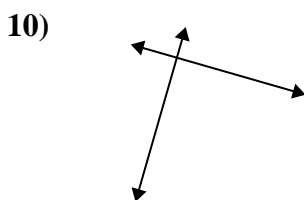
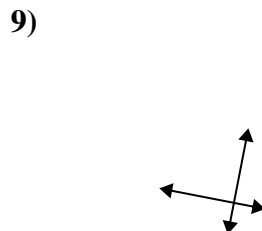
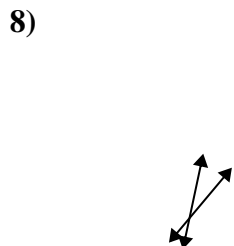
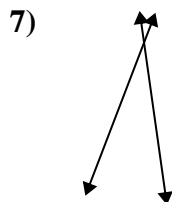
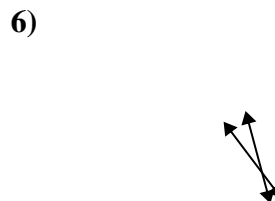
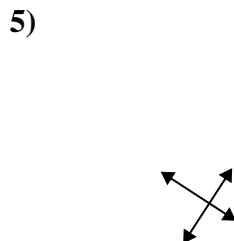
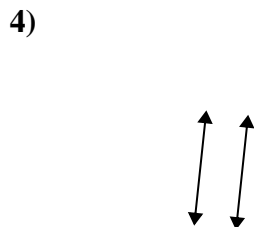
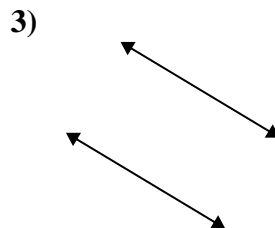
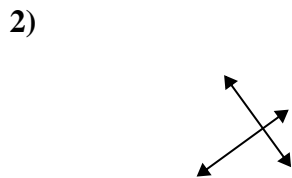
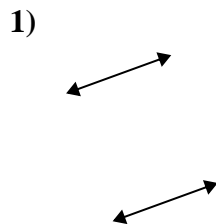


Respuestas

1. _____
2. _____
3. _____
4. _____
5. _____
6. _____
7. _____
8. _____
9. _____
10. _____
11. _____
12. _____
13. _____
14. _____
15. _____



Usar 'Paralela', 'Perpendicular' o 'Intersección' para describir las líneas.



Respuestas

1. paralelo

2. perp & inter

3. paralelo

4. paralelo

5. perp & inter

6. intersección

7. intersección

8. intersección

9. perp & inter

10. perp & inter

11. perp & inter

12. paralelo

13. intersección

14. intersección

15. paralelo