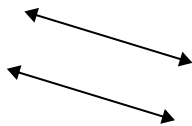




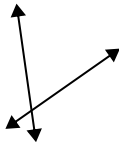
Usar 'Paralela', 'Perpendicular' o 'Intersección' para describir las líneas.

**Respuestas**

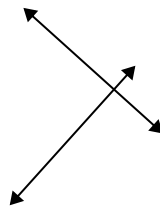
1)



2)



3)



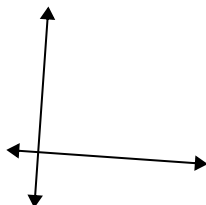
1. \_\_\_\_\_

2. \_\_\_\_\_

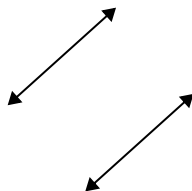
3. \_\_\_\_\_

4. \_\_\_\_\_

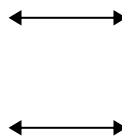
4)



5)



6)



5. \_\_\_\_\_

6. \_\_\_\_\_

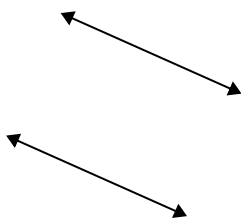
7. \_\_\_\_\_

8. \_\_\_\_\_

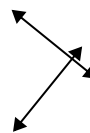
7)



8)



9)



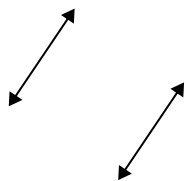
9. \_\_\_\_\_

10. \_\_\_\_\_

11. \_\_\_\_\_

12. \_\_\_\_\_

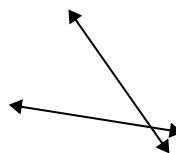
10)



11)



12)

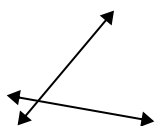


13. \_\_\_\_\_

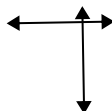
14. \_\_\_\_\_

15. \_\_\_\_\_

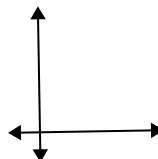
13)



14)



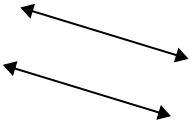
15)



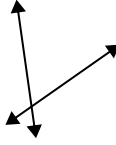


Usar 'Paralela', 'Perpendicular' o 'Intersección' para describir las líneas.

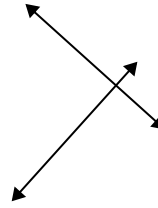
1)



2)



3)



**Respuestas**

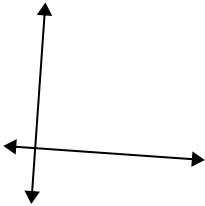
1. paralelo

2. intersección

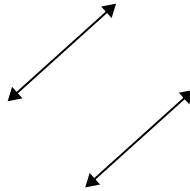
3. perp & inter

4. perp & inter

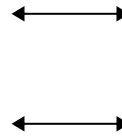
4)



5)



6)



5. paralelo

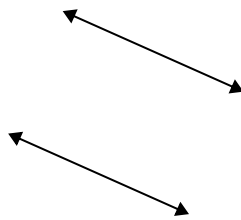
6. paralelo

7. intersección

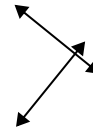
7)



8)



9)



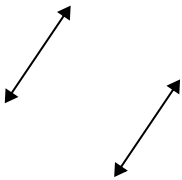
8. paralelo

9. perp & inter

10. paralelo

11. intersección

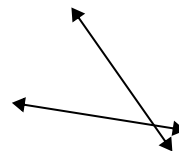
10)



11)



12)

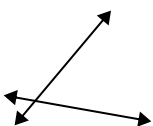


12. intersección

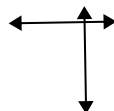
13. intersección

14. perp & inter

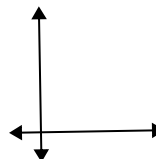
13)



14)



15)



15. perp & inter