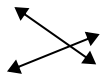




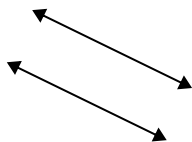
Usar 'Paralela', 'Perpendicular' o 'Intersección' para describir las líneas.

Respuestas

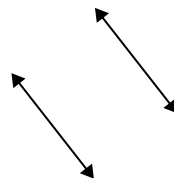
1)



2)



3)



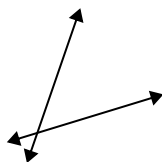
1. _____

2. _____

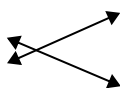
3. _____

4. _____

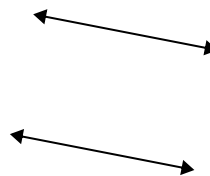
4)



5)



6)



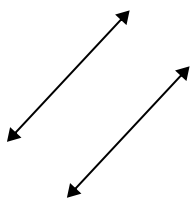
5. _____

6. _____

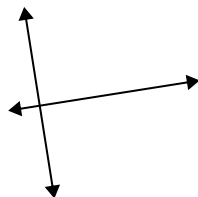
7. _____

8. _____

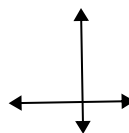
7)



8)



9)



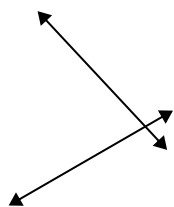
9. _____

10. _____

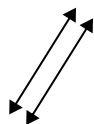
11. _____

12. _____

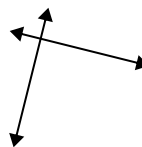
10)



11)



12)

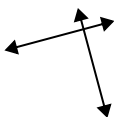


13. _____

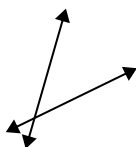
14. _____

15. _____

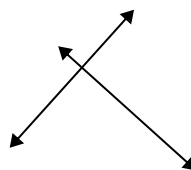
13)



14)

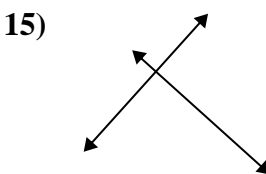
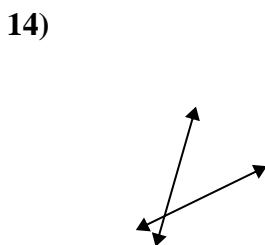
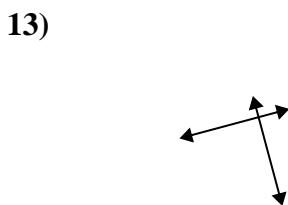
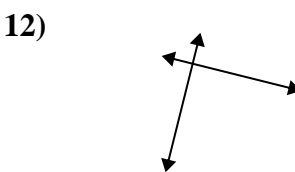
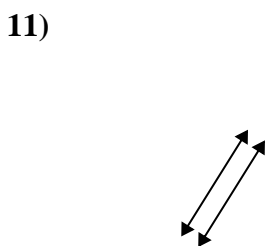
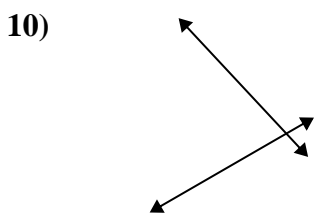
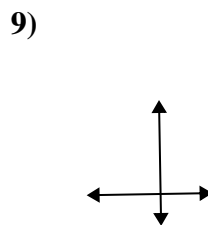
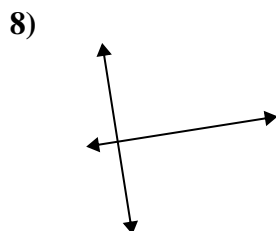
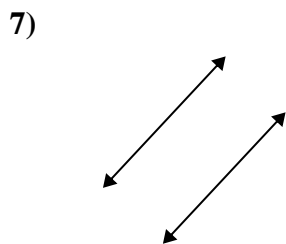
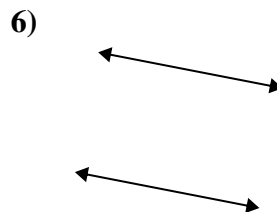
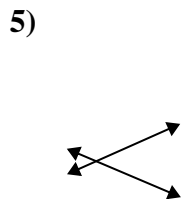
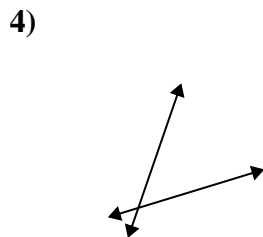
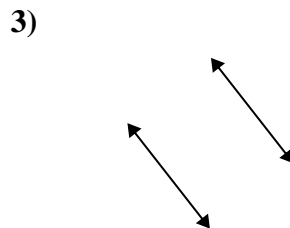
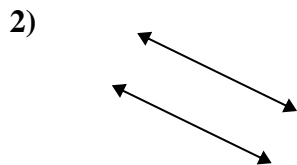


15)





Usar 'Paralela', 'Perpendicular' o 'Intersección' para describir las líneas.



Respuestas

- 1. intersección
- 2. paralelo
- 3. paralelo
- 4. intersección
- 5. intersección
- 6. paralelo
- 7. paralelo
- 8. perp & inter
- 9. perp & inter
- 10. intersección
- 11. paralelo
- 12. perp & inter
- 13. perp & inter
- 14. intersección
- 15. perp & inter