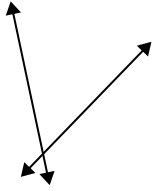




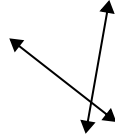
Usar 'Paralela', 'Perpendicular' o 'Intersección' para describir las líneas.

**Respuestas**

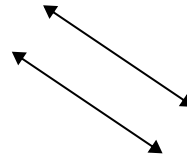
1)



2)



3)



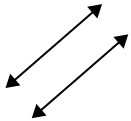
1. \_\_\_\_\_

2. \_\_\_\_\_

3. \_\_\_\_\_

4. \_\_\_\_\_

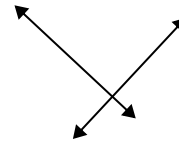
4)



5)



6)



5. \_\_\_\_\_

6. \_\_\_\_\_

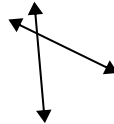
7. \_\_\_\_\_

8. \_\_\_\_\_

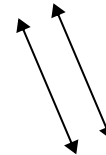
7)



8)



9)



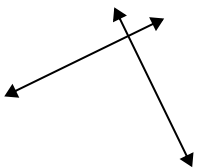
9. \_\_\_\_\_

10. \_\_\_\_\_

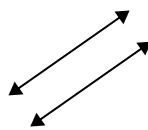
11. \_\_\_\_\_

12. \_\_\_\_\_

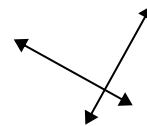
10)



11)



12)

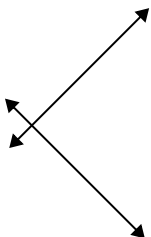


13. \_\_\_\_\_

14. \_\_\_\_\_

15. \_\_\_\_\_

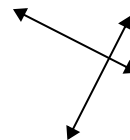
13)



14)

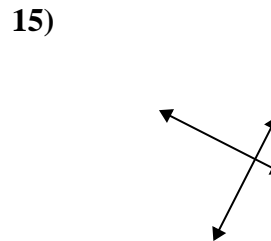
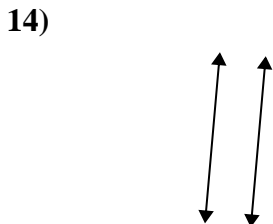
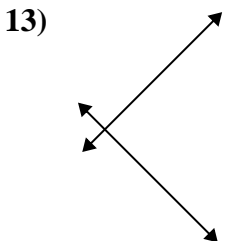
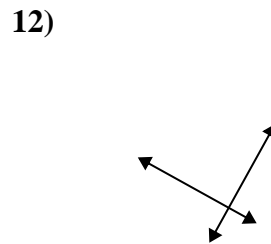
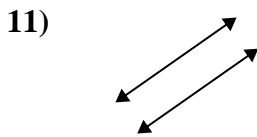
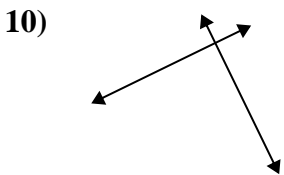
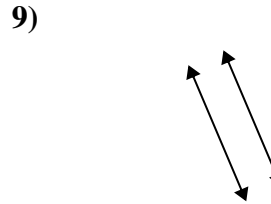
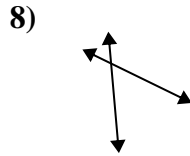
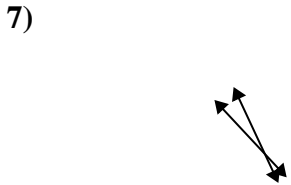
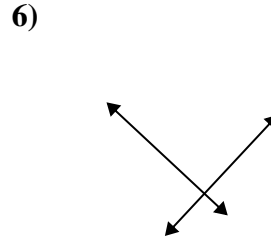
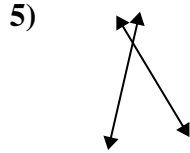
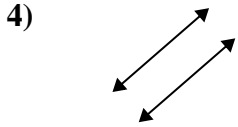
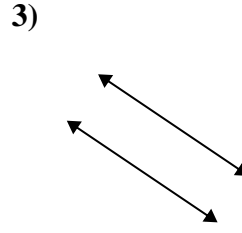
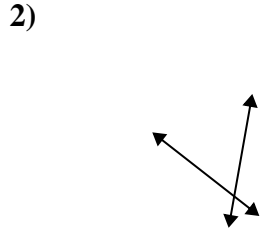
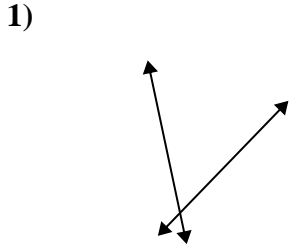


15)





Usar 'Paralela', 'Perpendicular' o 'Intersección' para describir las líneas.



Respuestas

1. intersección

2. intersección

3. paralelo

4. paralelo

5. intersección

6. perp & inter

7. intersección

8. intersección

9. paralelo

10. perp & inter

11. paralelo

12. perp & inter

13. perp & inter

14. paralelo

15. perp & inter