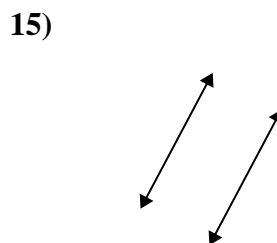
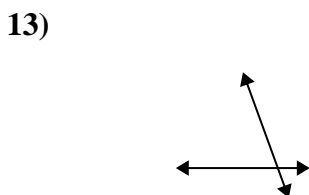
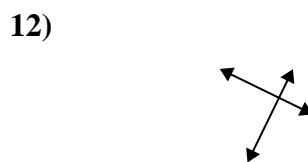
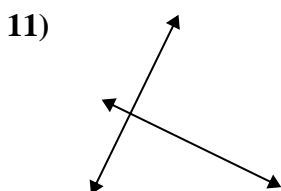
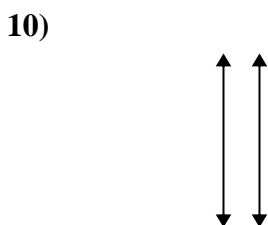
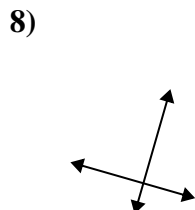
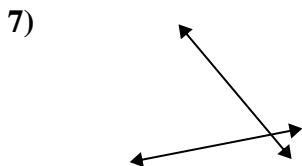
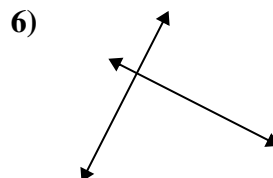
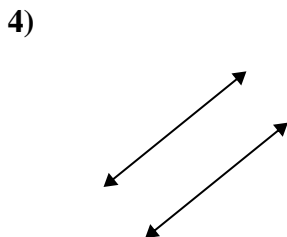
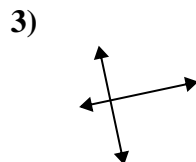
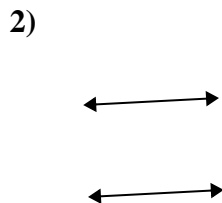
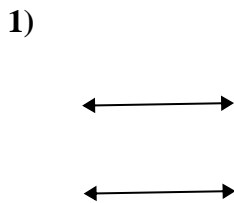




Usar 'Paralela', 'Perpendicular' o 'Intersección' para describir las líneas.

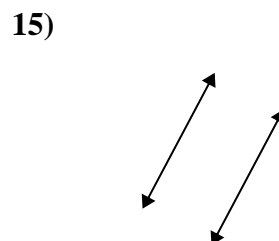

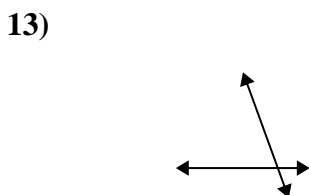
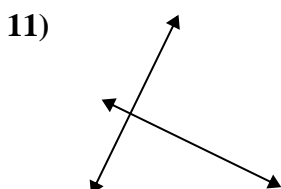
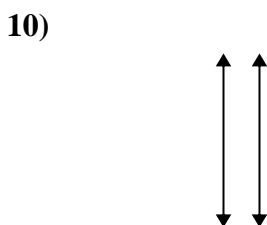
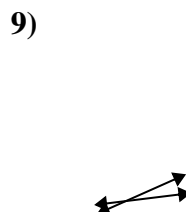
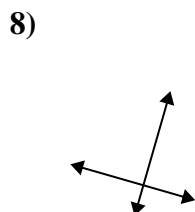
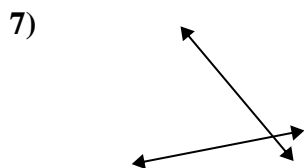
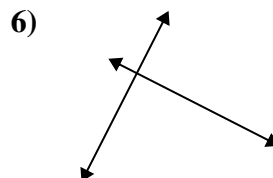
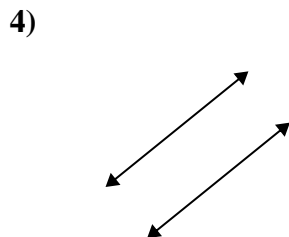
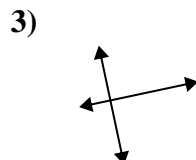
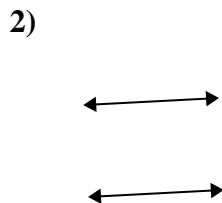
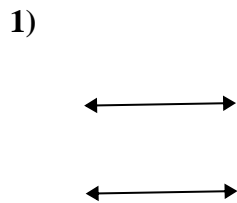
Respuestas



1. _____
2. _____
3. _____
4. _____
5. _____
6. _____
7. _____
8. _____
9. _____
10. _____
11. _____
12. _____
13. _____
14. _____
15. _____



Usar 'Paralela', 'Perpendicular' o 'Intersección' para describir las líneas.



Respuestas

1. paralelo

2. paralelo

3. perp & inter

4. paralelo

5. intersección

6. perp & inter

7. intersección

8. perp & inter

9. intersección

10. paralelo

11. perp & inter

12. perp & inter

13. intersección

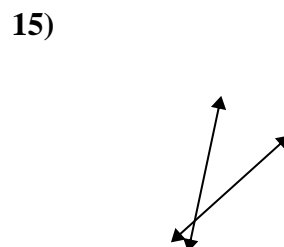
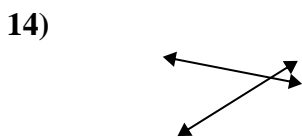
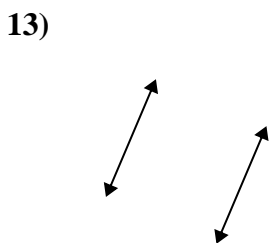
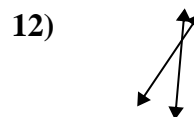
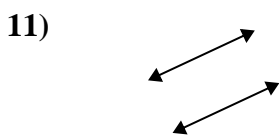
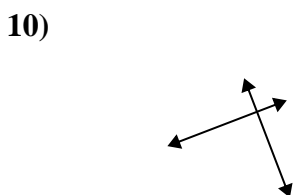
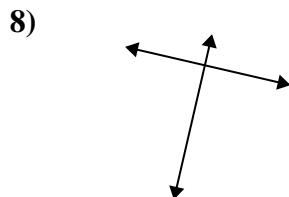
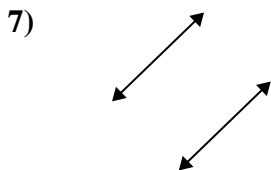
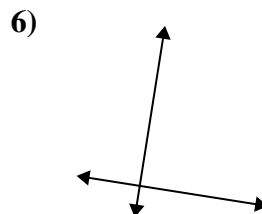
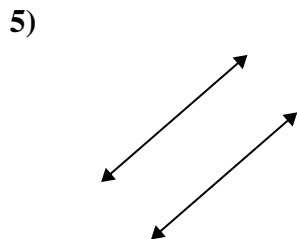
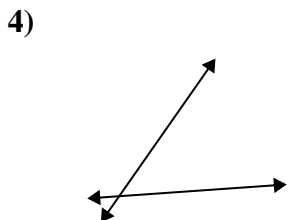
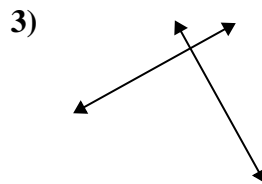
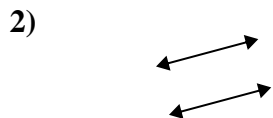
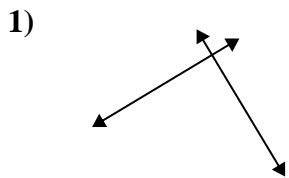
14. intersección

15. paralelo



Usar 'Paralela', 'Perpendicular' o 'Intersección' para describir las líneas.

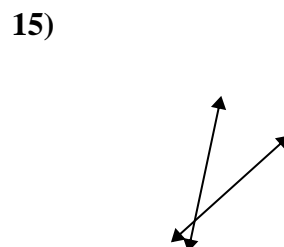
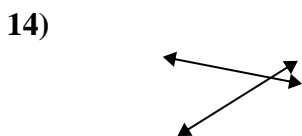
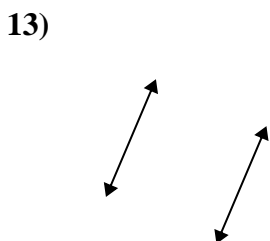
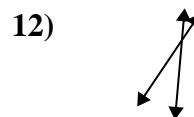
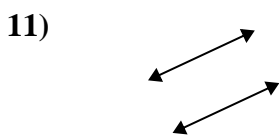
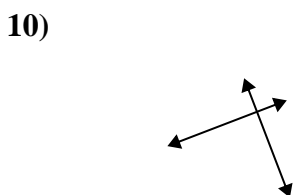
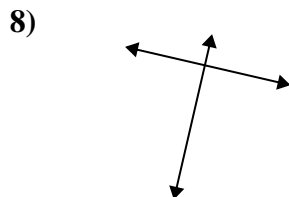
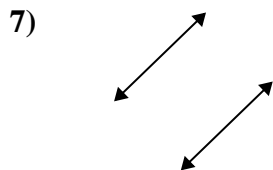
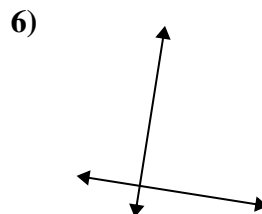
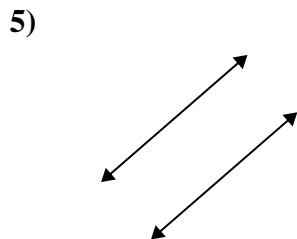
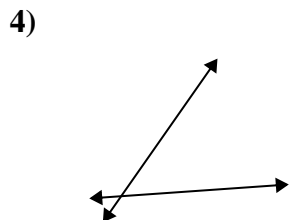
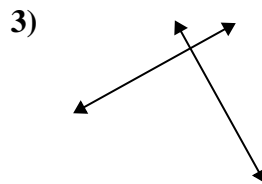
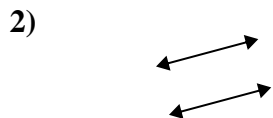
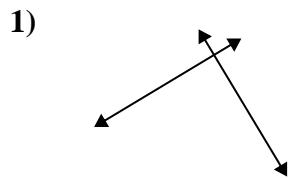
Respuestas



1. _____
2. _____
3. _____
4. _____
5. _____
6. _____
7. _____
8. _____
9. _____
10. _____
11. _____
12. _____
13. _____
14. _____
15. _____



Usar 'Paralela', 'Perpendicular' o 'Intersección' para describir las líneas.



Respuestas

1. perp & inter

2. paralelo

3. perp & inter

4. intersección

5. paralelo

6. perp & inter

7. paralelo

8. perp & inter

9. intersección

10. perp & inter

11. paralelo

12. intersección

13. paralelo

14. intersección

15. intersección



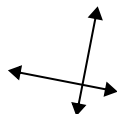
Usar 'Paralela', 'Perpendicular' o 'Intersección' para describir las líneas.

Respuestas

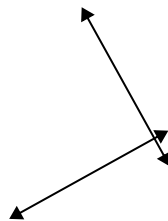
1)



2)



3)



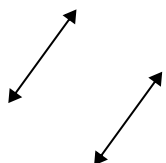
1. _____

2. _____

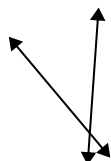
3. _____

4. _____

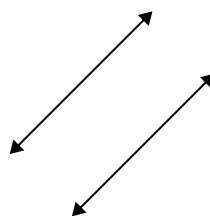
4)



5)



6)



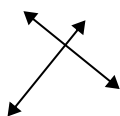
5. _____

6. _____

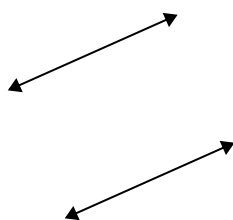
7. _____

8. _____

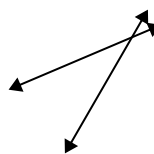
7)



8)



9)



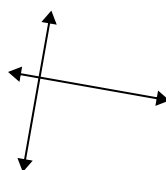
9. _____

10. _____

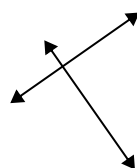
11. _____

12. _____

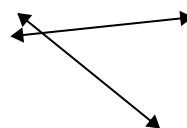
10)



11)



12)

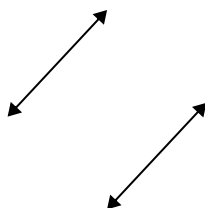


13. _____

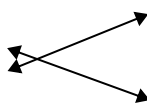
14. _____

15. _____

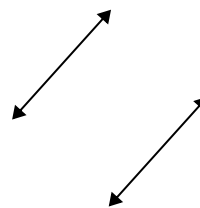
13)



14)



15)



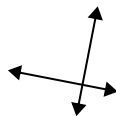


Usar 'Paralela', 'Perpendicular' o 'Intersección' para describir las líneas.

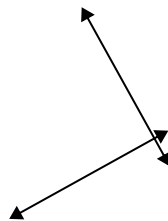
1)



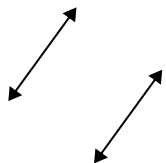
2)



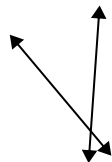
3)



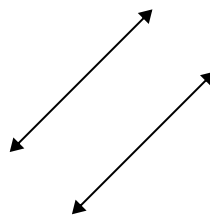
4)



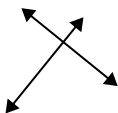
5)



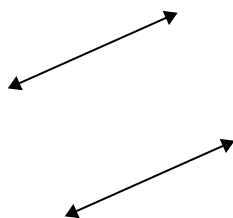
6)



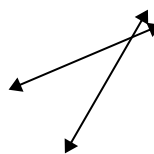
7)



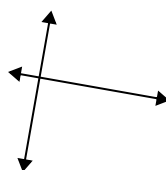
8)



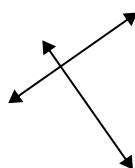
9)



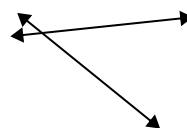
10)



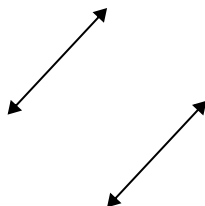
11)



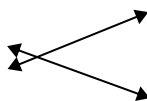
12)



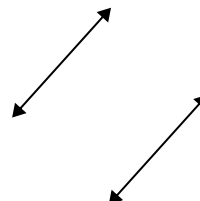
13)



14)



15)



Respuestas

1. intersección

2. perp & inter

3. perp & inter

4. paralelo

5. intersección

6. paralelo

7. perp & inter

8. paralelo

9. intersección

10. perp & inter

11. perp & inter

12. intersección

13. paralelo

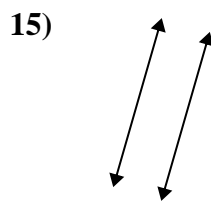
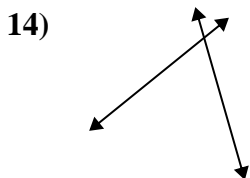
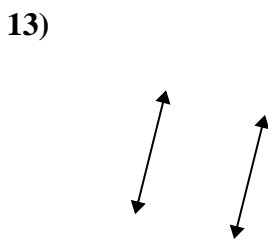
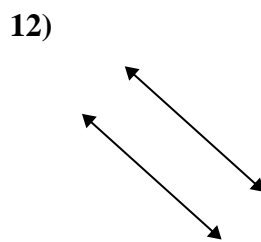
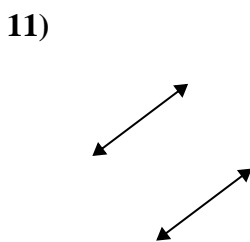
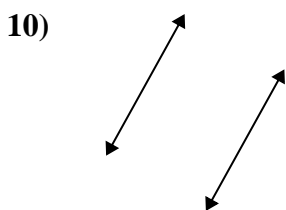
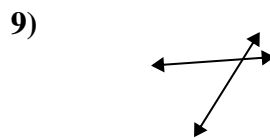
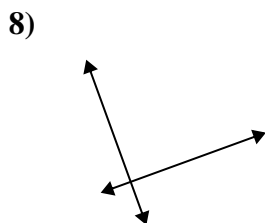
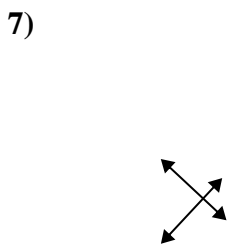
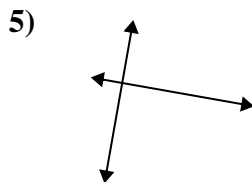
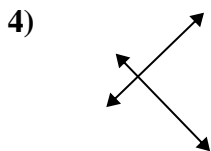
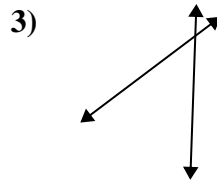
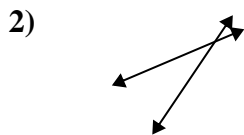
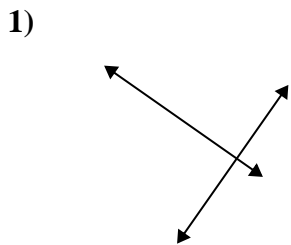
14. intersección

15. paralelo



Usar 'Paralela', 'Perpendicular' o 'Intersección' para describir las líneas.

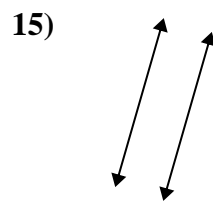
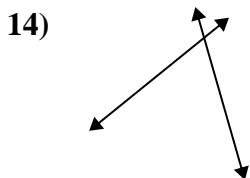
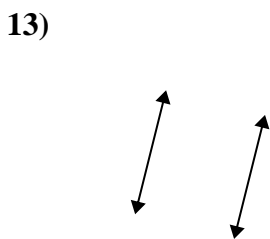
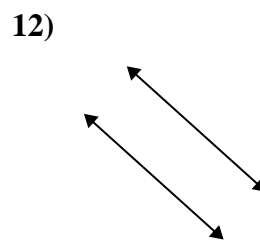
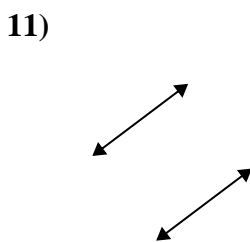
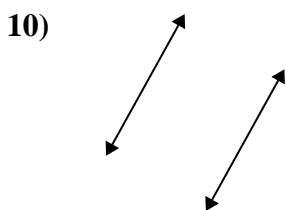
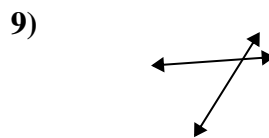
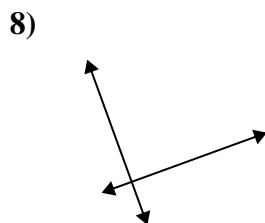
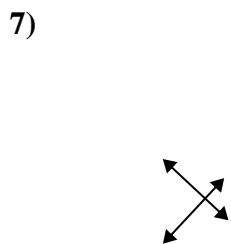
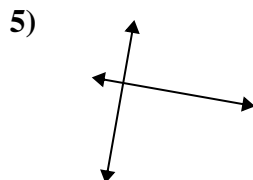
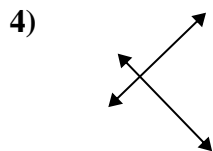
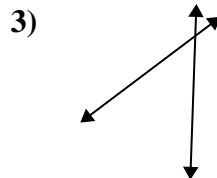
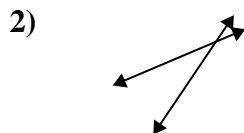
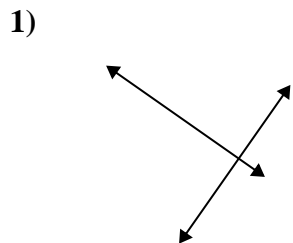
Respuestas



- 1. _____
- 2. _____
- 3. _____
- 4. _____
- 5. _____
- 6. _____
- 7. _____
- 8. _____
- 9. _____
- 10. _____
- 11. _____
- 12. _____
- 13. _____
- 14. _____
- 15. _____



Usar 'Paralela', 'Perpendicular' o 'Intersección' para describir las líneas.



Respuestas

1. perp & inter

2. intersección

3. intersección

4. perp & inter

5. perp & inter

6. intersección

7. perp & inter

8. perp & inter

9. intersección

10. paralelo

11. paralelo

12. paralelo

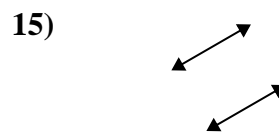
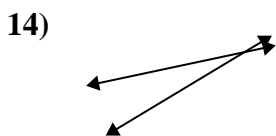
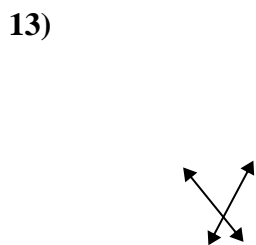
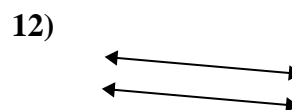
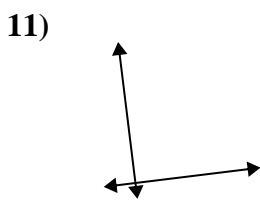
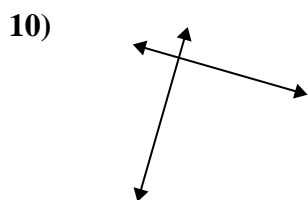
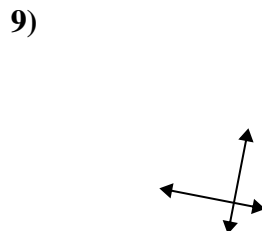
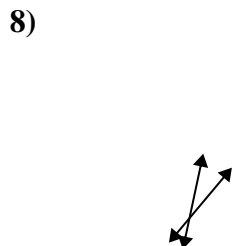
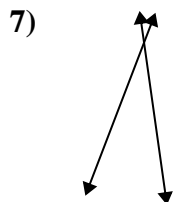
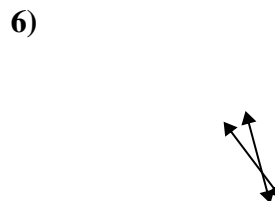
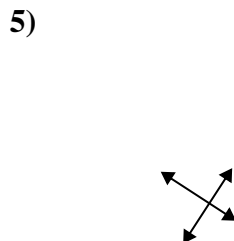
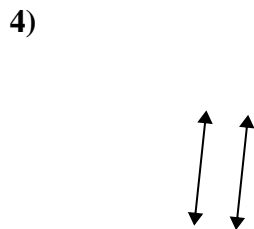
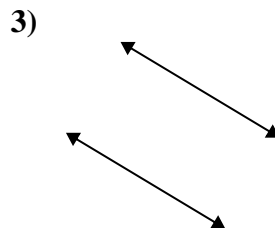
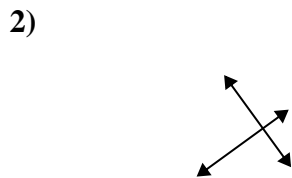
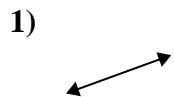
13. paralelo

14. intersección

15. paralelo



Usar 'Paralela', 'Perpendicular' o 'Intersección' para describir las líneas.

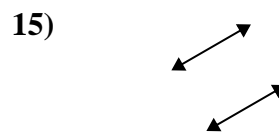
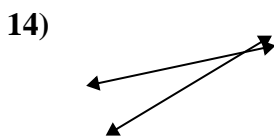
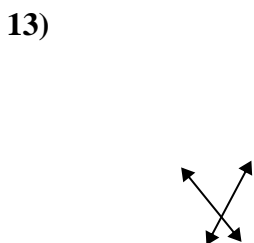
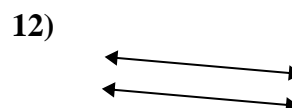
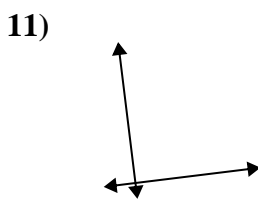
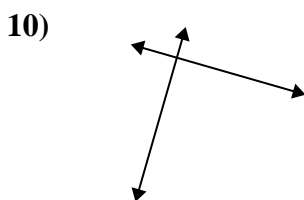
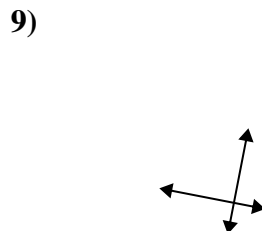
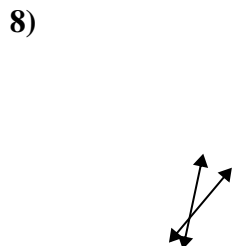
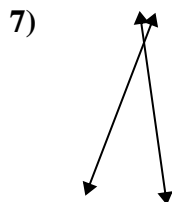
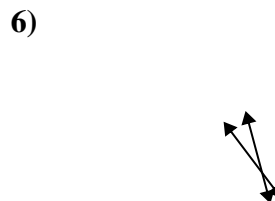
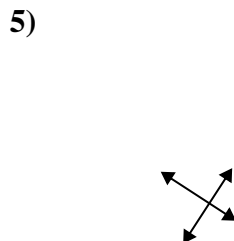
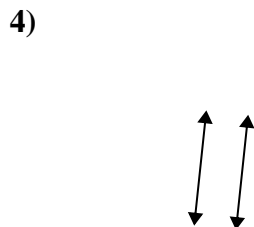
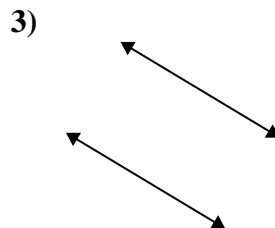
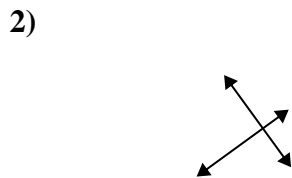
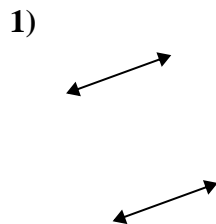


Respuestas

1. _____
2. _____
3. _____
4. _____
5. _____
6. _____
7. _____
8. _____
9. _____
10. _____
11. _____
12. _____
13. _____
14. _____
15. _____



Usar 'Paralela', 'Perpendicular' o 'Intersección' para describir las líneas.



Respuestas

1. paralelo

2. perp & inter

3. paralelo

4. paralelo

5. perp & inter

6. intersección

7. intersección

8. intersección

9. perp & inter

10. perp & inter

11. perp & inter

12. paralelo

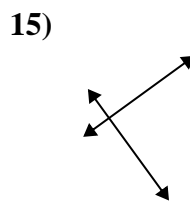
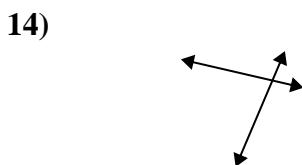
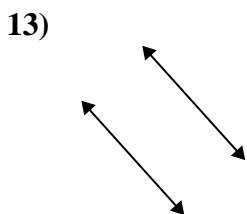
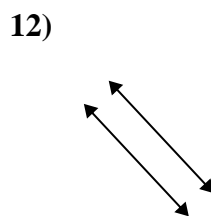
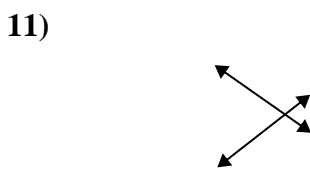
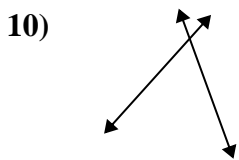
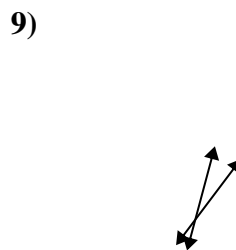
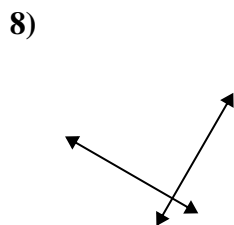
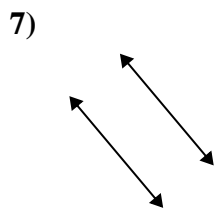
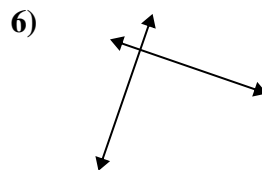
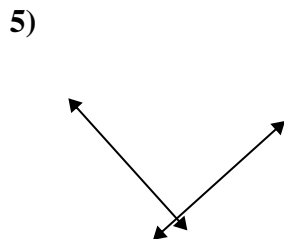
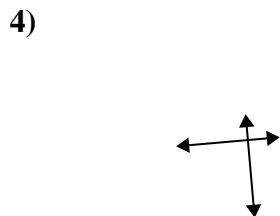
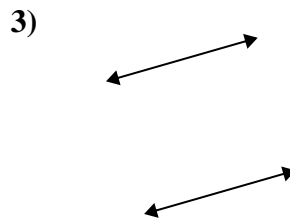
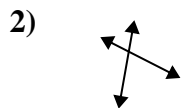
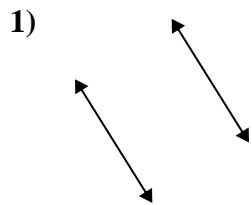
13. intersección

14. intersección

15. paralelo



Usar 'Paralela', 'Perpendicular' o 'Intersección' para describir las líneas.

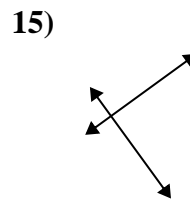
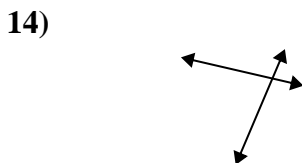
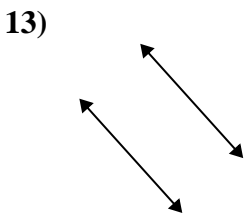
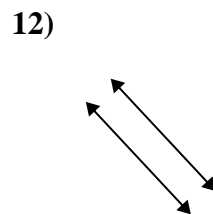
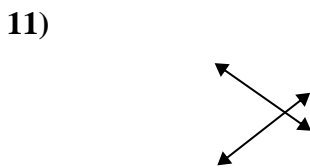
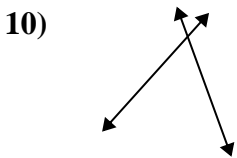
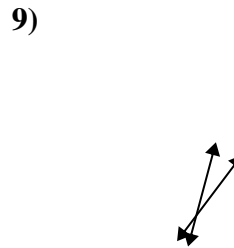
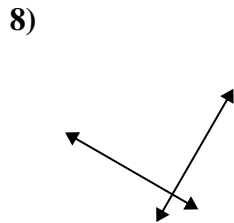
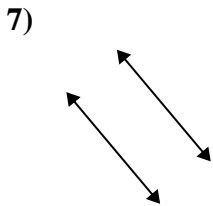
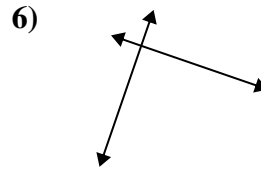
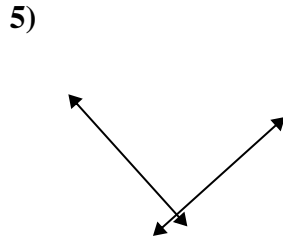
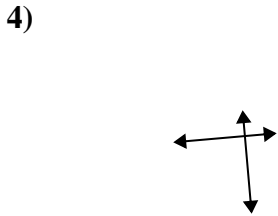
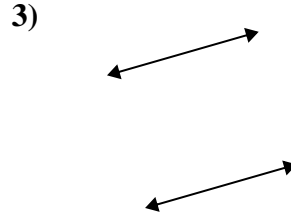
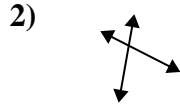
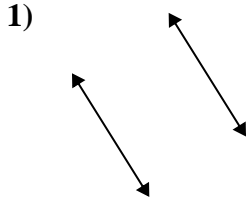


Respuestas

1. _____
2. _____
3. _____
4. _____
5. _____
6. _____
7. _____
8. _____
9. _____
10. _____
11. _____
12. _____
13. _____
14. _____
15. _____



Usar 'Paralela', 'Perpendicular' o 'Intersección' para describir las líneas.



Respuestas

1. paralelo

2. intersección

3. paralelo

4. perp & inter

5. perp & inter

6. perp & inter

7. paralelo

8. perp & inter

9. intersección

10. intersección

11. intersección

12. paralelo

13. paralelo

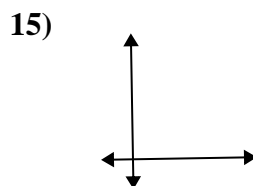
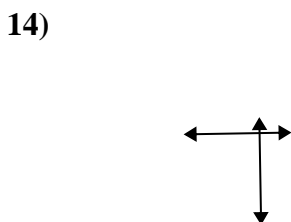
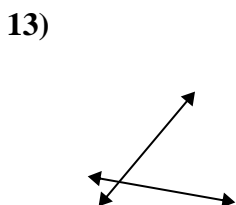
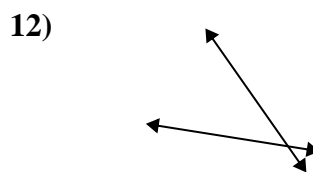
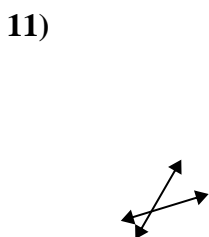
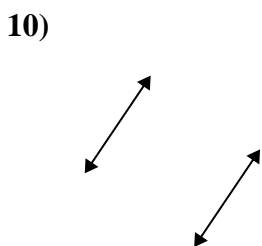
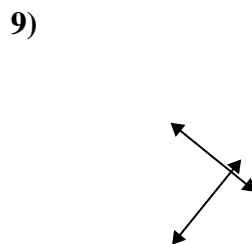
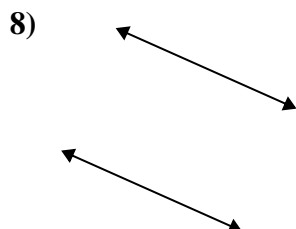
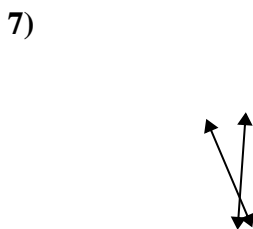
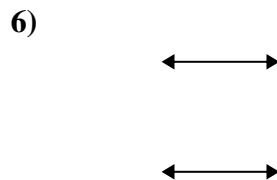
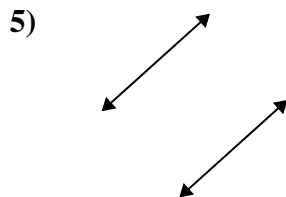
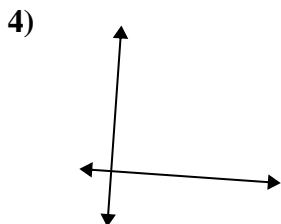
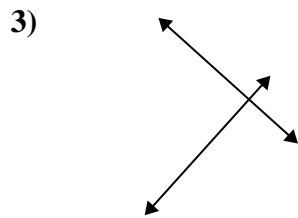
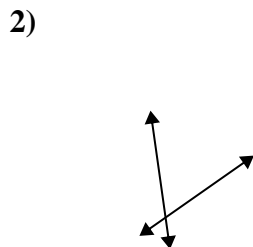
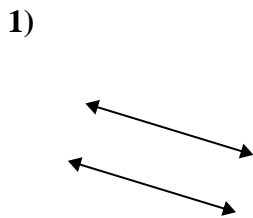
14. intersección

15. perp & inter

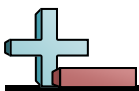


Usar 'Paralela', 'Perpendicular' o 'Intersección' para describir las líneas.

Respuestas

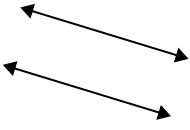


1. _____
2. _____
3. _____
4. _____
5. _____
6. _____
7. _____
8. _____
9. _____
10. _____
11. _____
12. _____
13. _____
14. _____
15. _____

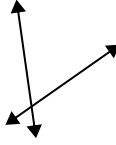


Usar 'Paralela', 'Perpendicular' o 'Intersección' para describir las líneas.

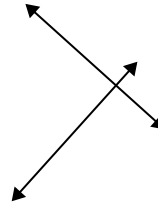
1)



2)



3)



Respuestas

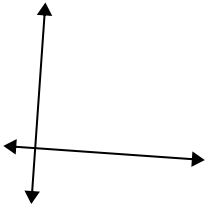
1. paralelo

2. intersección

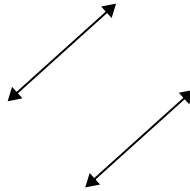
3. perp & inter

4. perp & inter

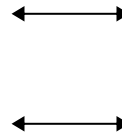
4)



5)



6)



5. paralelo

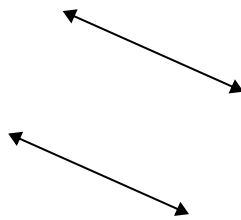
6. paralelo

7. intersección

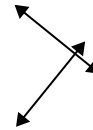
7)



8)



9)



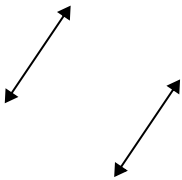
8. paralelo

9. perp & inter

10. paralelo

11. intersección

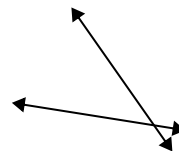
10)



11)



12)

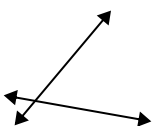


12. intersección

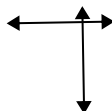
13. intersección

14. perp & inter

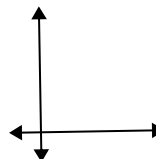
13)



14)



15)



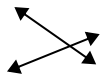
15. perp & inter



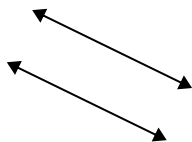
Usar 'Paralela', 'Perpendicular' o 'Intersección' para describir las líneas.

Respuestas

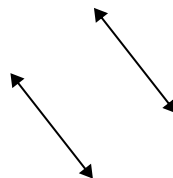
1)



2)



3)



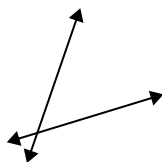
1. _____

2. _____

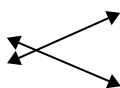
3. _____

4. _____

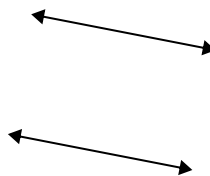
4)



5)



6)



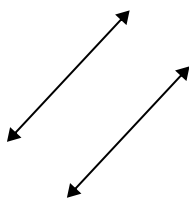
5. _____

6. _____

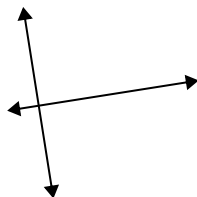
7. _____

8. _____

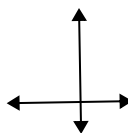
7)



8)



9)



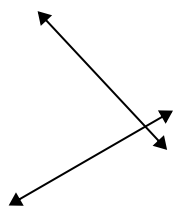
9. _____

10. _____

11. _____

12. _____

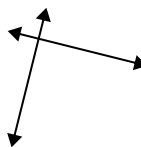
10)



11)



12)

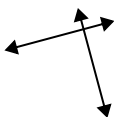


13. _____

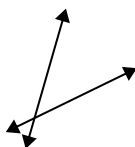
14. _____

15. _____

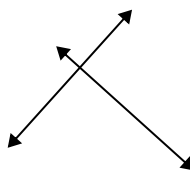
13)



14)

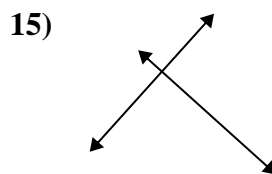
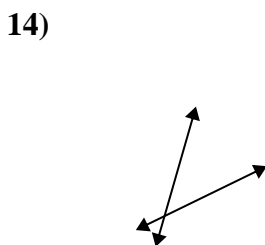
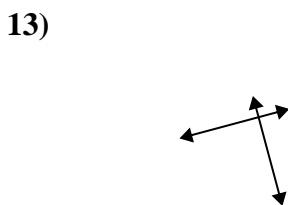
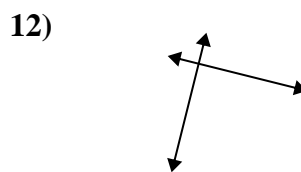
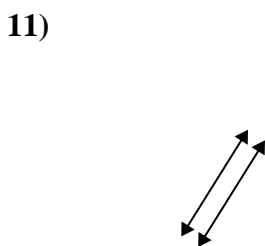
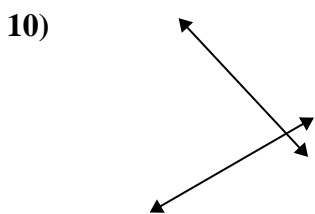
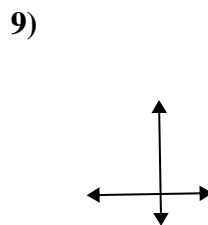
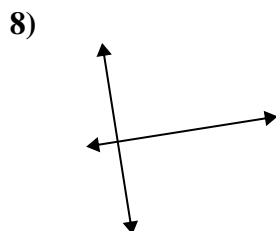
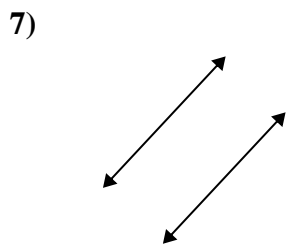
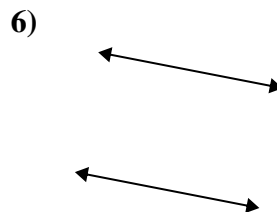
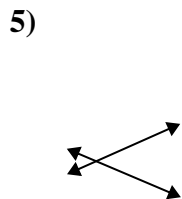
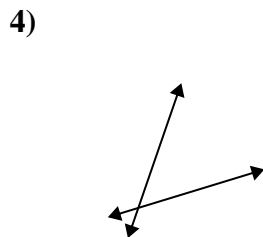
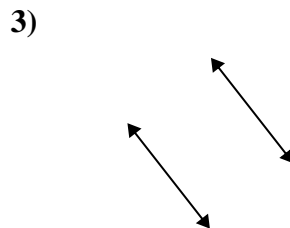
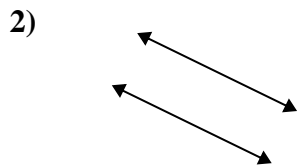


15)





Usar 'Paralela', 'Perpendicular' o 'Intersección' para describir las líneas.



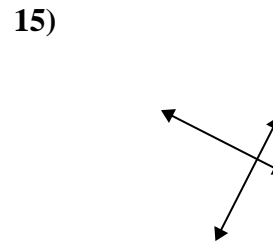
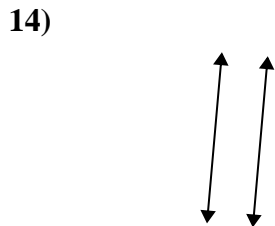
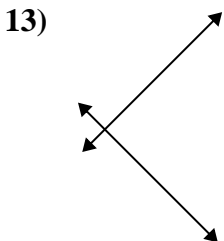
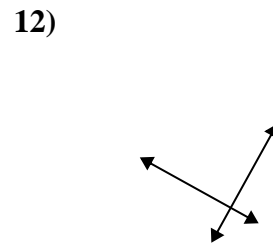
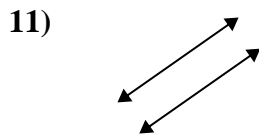
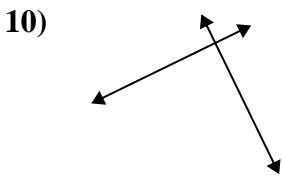
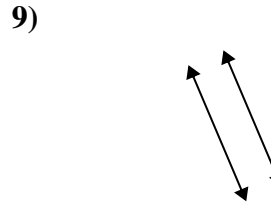
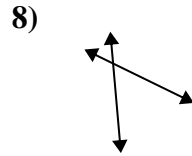
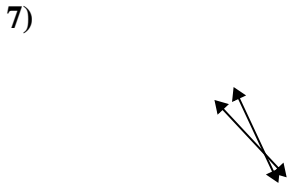
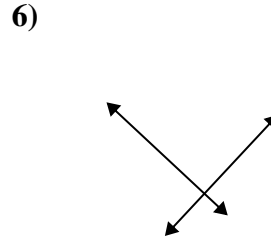
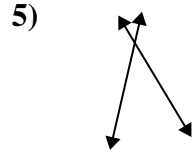
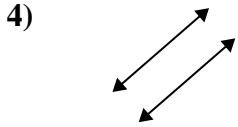
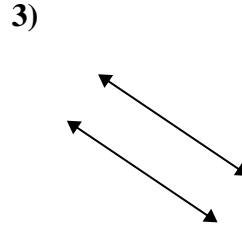
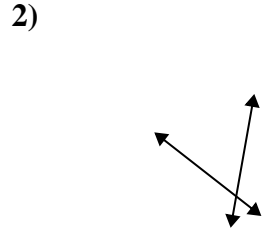
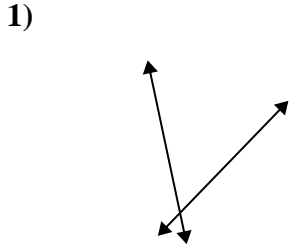
Respuestas

- 1. intersección
- 2. paralelo
- 3. paralelo
- 4. intersección
- 5. intersección
- 6. paralelo
- 7. paralelo
- 8. perp & inter
- 9. perp & inter
- 10. intersección
- 11. paralelo
- 12. perp & inter
- 13. perp & inter
- 14. intersección
- 15. perp & inter



Usar 'Paralela', 'Perpendicular' o 'Intersección' para describir las líneas.

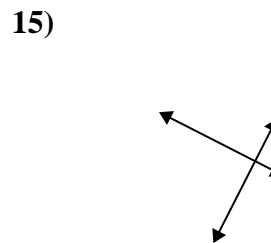
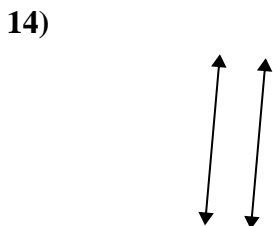
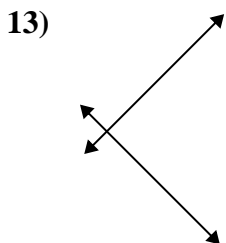
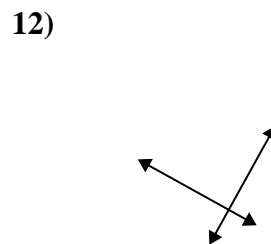
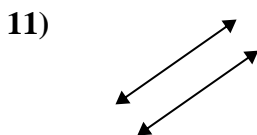
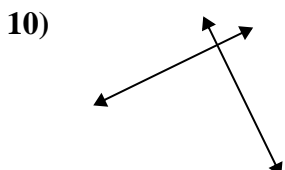
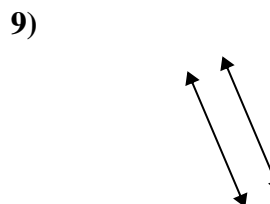
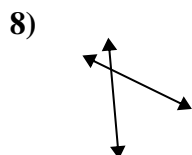
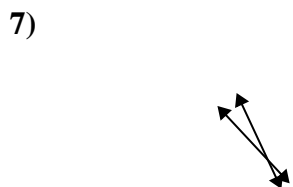
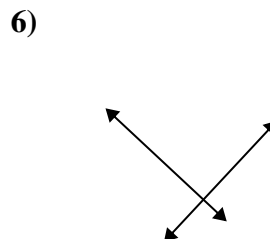
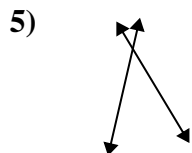
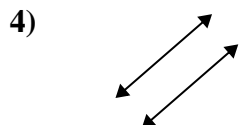
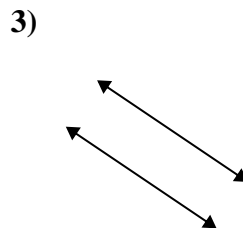
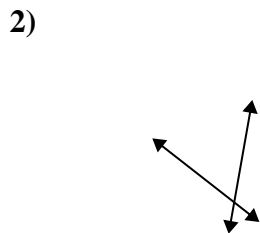
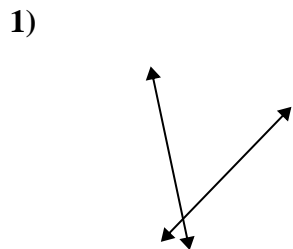
Respuestas



1. _____
2. _____
3. _____
4. _____
5. _____
6. _____
7. _____
8. _____
9. _____
10. _____
11. _____
12. _____
13. _____
14. _____
15. _____



Usar 'Paralela', 'Perpendicular' o 'Intersección' para describir las líneas.



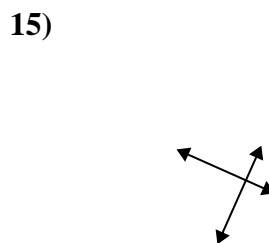
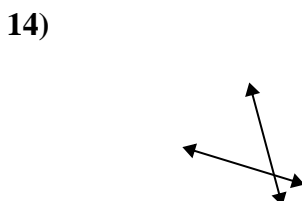
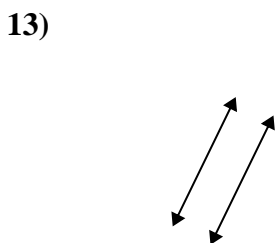
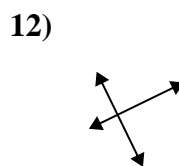
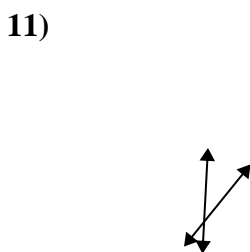
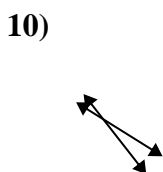
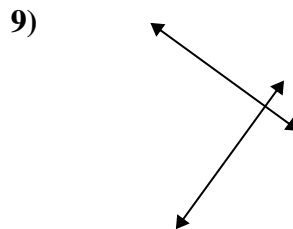
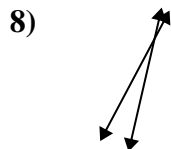
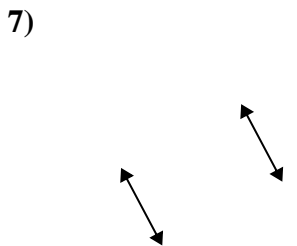
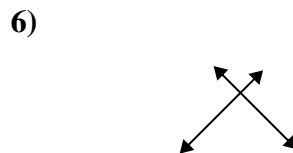
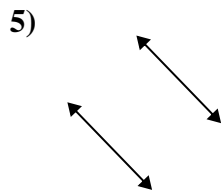
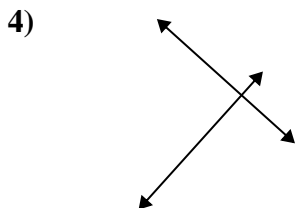
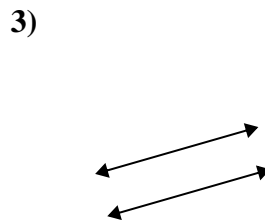
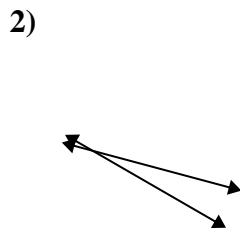
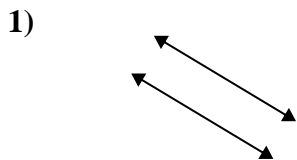
Respuestas

- 1. intersección
- 2. intersección
- 3. paralelo
- 4. paralelo
- 5. intersección
- 6. perp & inter
- 7. intersección
- 8. intersección
- 9. paralelo
- 10. perp & inter
- 11. paralelo
- 12. perp & inter
- 13. perp & inter
- 14. paralelo
- 15. perp & inter



Usar 'Paralela', 'Perpendicular' o 'Intersección' para describir las líneas.

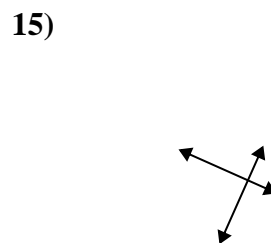
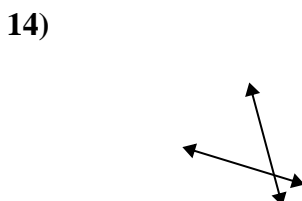
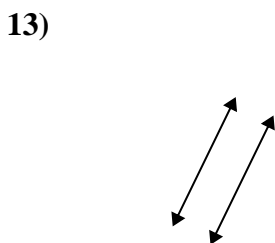
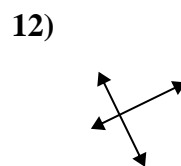
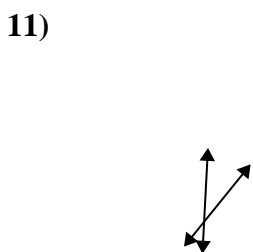
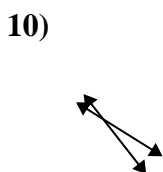
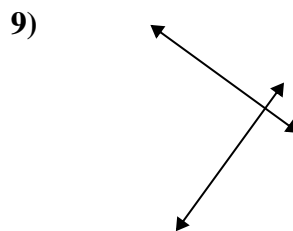
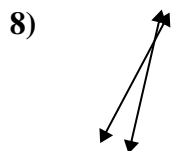
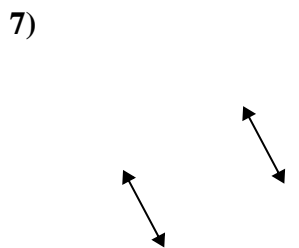
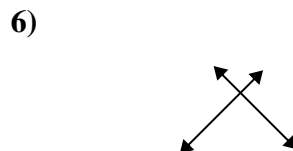
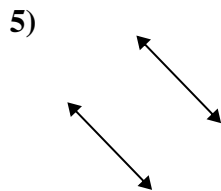
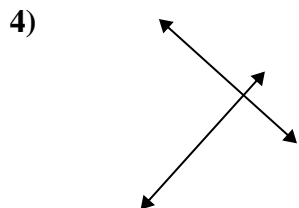
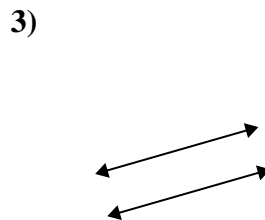
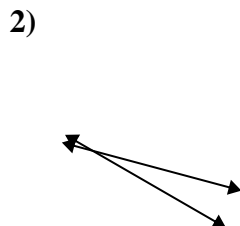
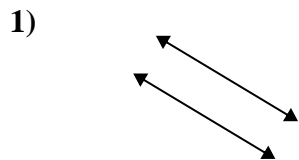
Respuestas



1. _____
2. _____
3. _____
4. _____
5. _____
6. _____
7. _____
8. _____
9. _____
10. _____
11. _____
12. _____
13. _____
14. _____
15. _____



Usar 'Paralela', 'Perpendicular' o 'Intersección' para describir las líneas.



Respuestas

1. paralelo

2. intersección

3. paralelo

4. perp & inter

5. paralelo

6. perp & inter

7. paralelo

8. intersección

9. perp & inter

10. intersección

11. intersección

12. perp & inter

13. paralelo

14. intersección

15. perp & inter