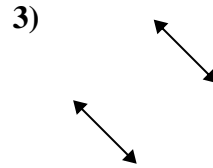
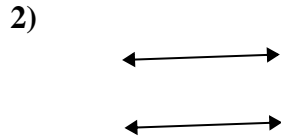
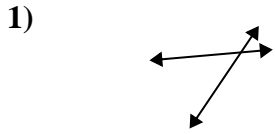




Usar 'Paralela', 'Perpendicular' o 'Intersección' para describir las líneas.

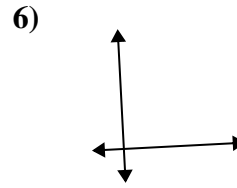
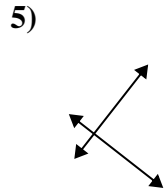
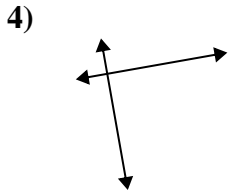
Respuestas



1. _____

2. _____

3. _____

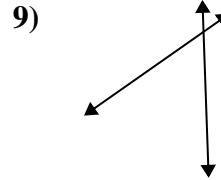
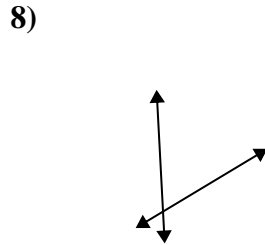
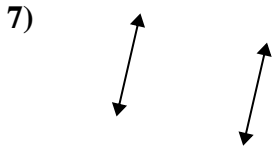


4. _____

5. _____

6. _____

7. _____

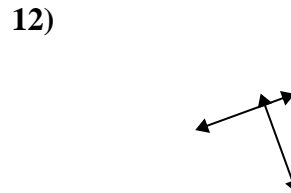
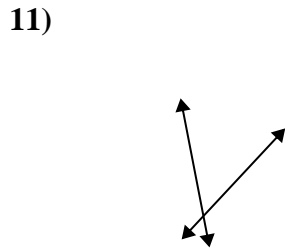
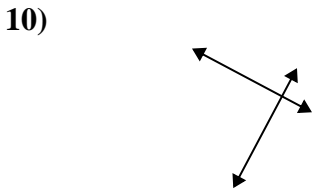


8. _____

9. _____

10. _____

11. _____

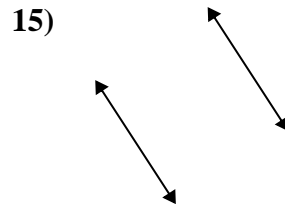
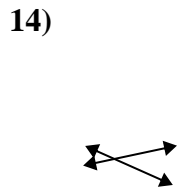
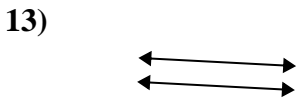


12. _____

13. _____

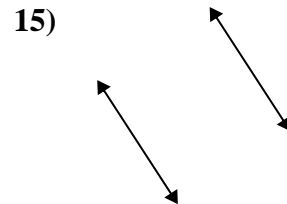
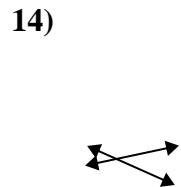
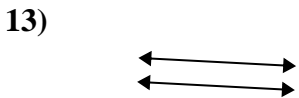
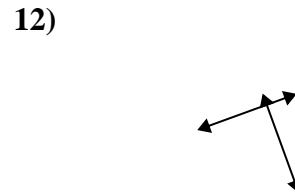
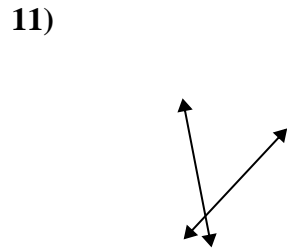
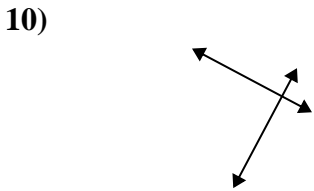
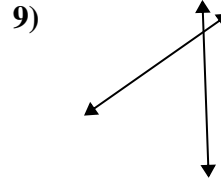
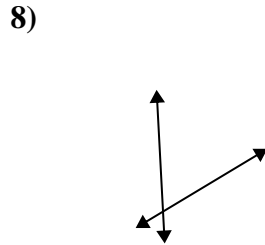
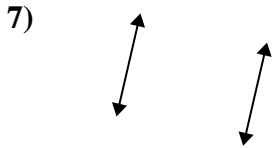
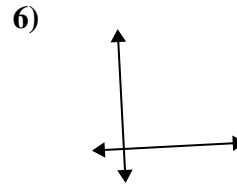
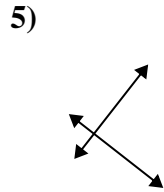
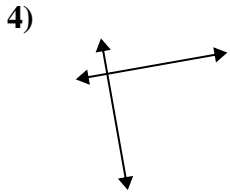
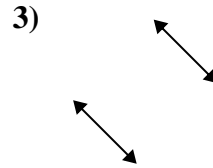
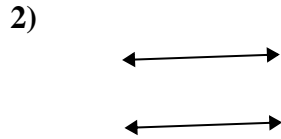
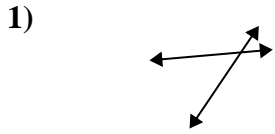
14. _____

15. _____





Usar 'Paralela', 'Perpendicular' o 'Intersección' para describir las líneas.



Respuestas

1. inter

2. paralelo

3. paralelo

4. perp & inter

5. perp & inter

6. perp & inter

7. paralelo

8. inter

9. inter

10. perp & inter

11. inter

12. perp & inter

13. paralelo

14. inter

15. paralelo