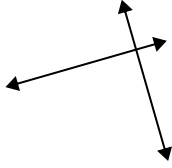




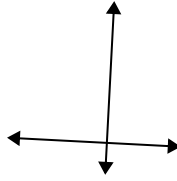
Usar 'Paralela', 'Perpendicular' o 'Intersección' para describir las líneas.

Respuestas

1)



2)



3)

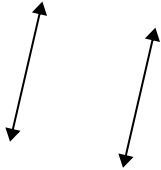


1. _____

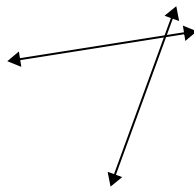
2. _____

3. _____

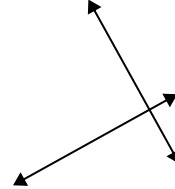
4)



5)



6)

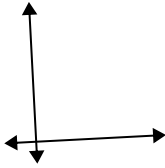


4. _____

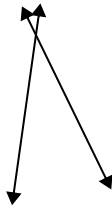
5. _____

6. _____

7)



8)



9)



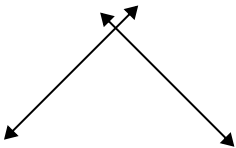
7. _____

8. _____

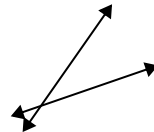
9. _____

10. _____

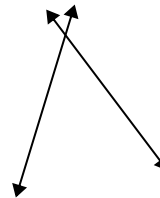
10)



11)



12)



11. _____

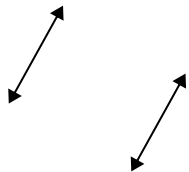
12. _____

13. _____

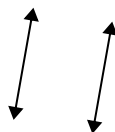
14. _____

15. _____

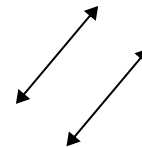
13)



14)

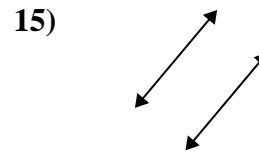
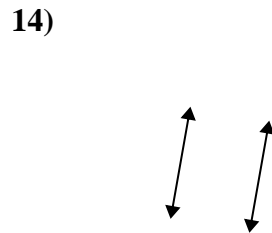
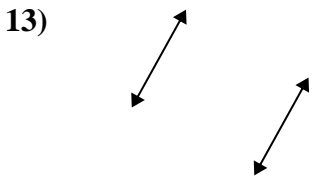
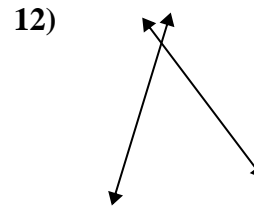
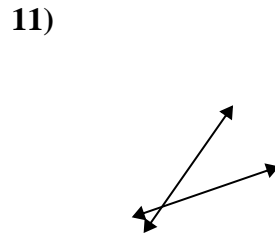
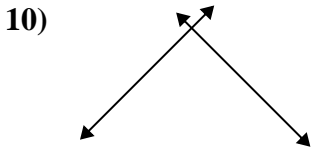
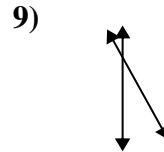
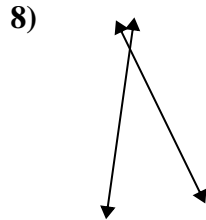
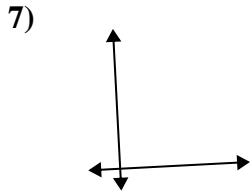
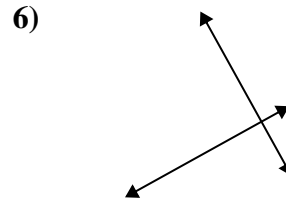
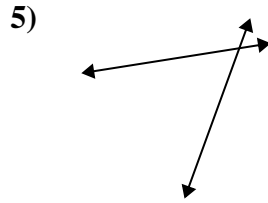
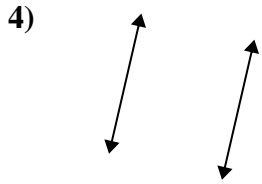
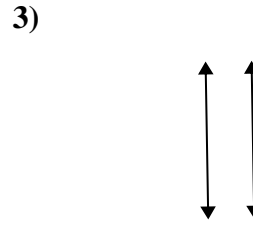
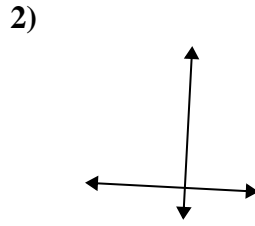
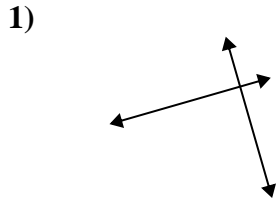


15)





Usar 'Paralela', 'Perpendicular' o 'Intersección' para describir las líneas.



Respuestas

1. perp & inter

2. perp & inter

3. paralelo

4. paralelo

5. inter

6. perp & inter

7. perp & inter

8. inter

9. inter

10. perp & inter

11. inter

12. inter

13. paralelo

14. paralelo

15. paralelo