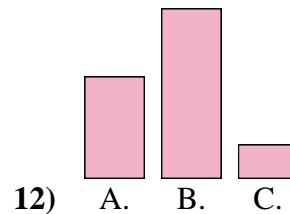
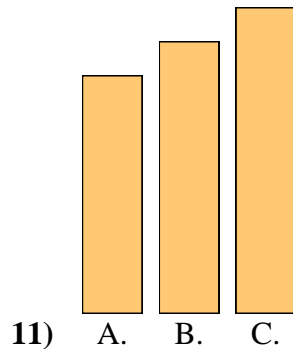
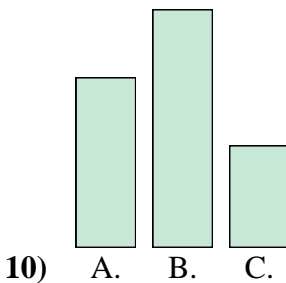
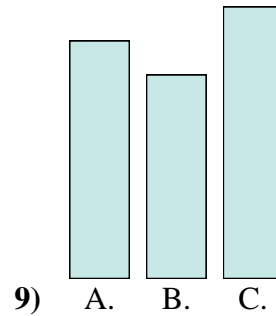
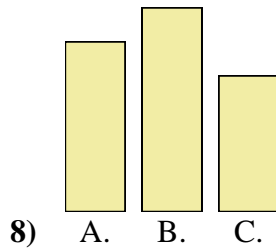
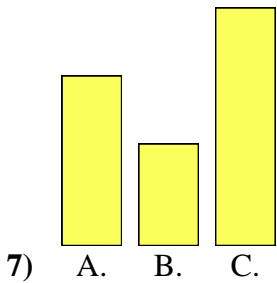
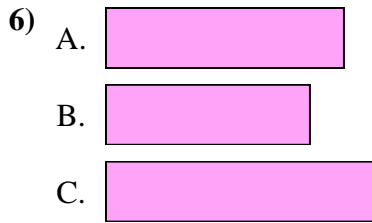
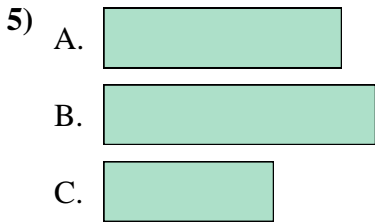
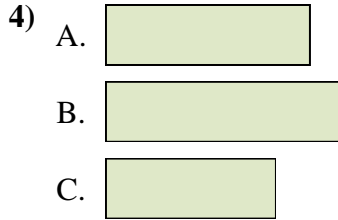
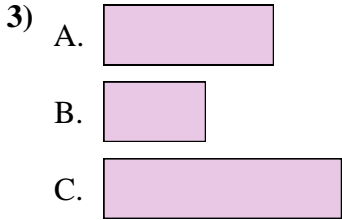
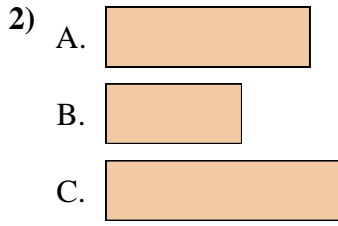
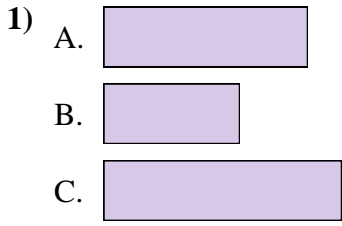




**Ordenar los objetos del más chico al más grande**

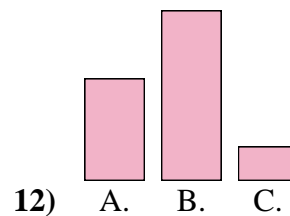
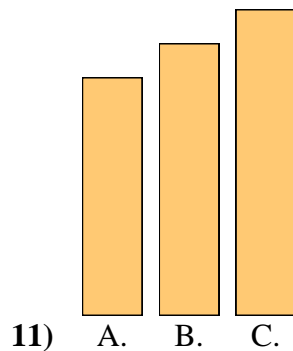
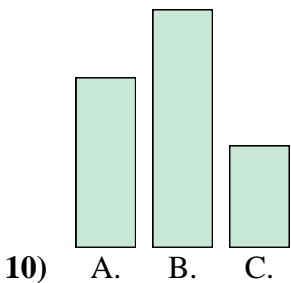
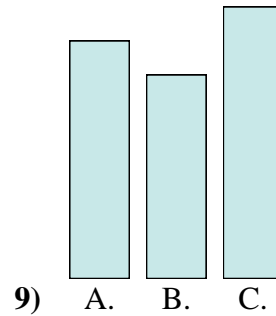
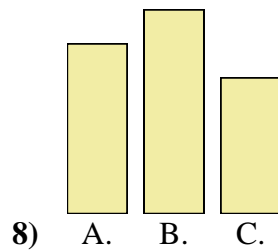
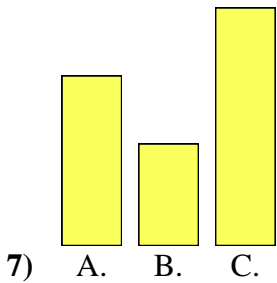
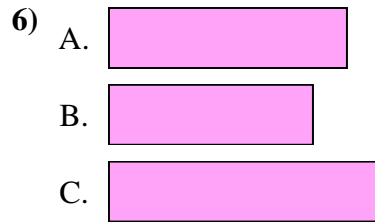
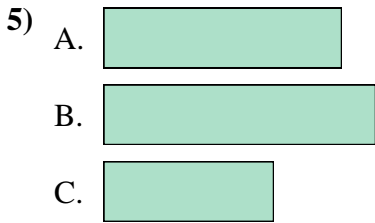
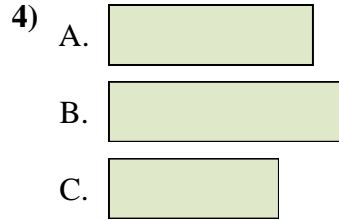
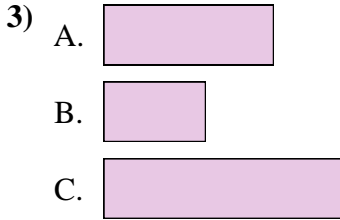
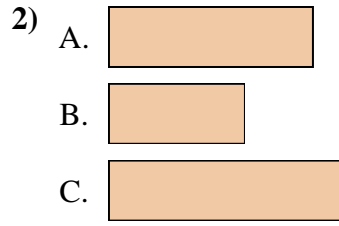
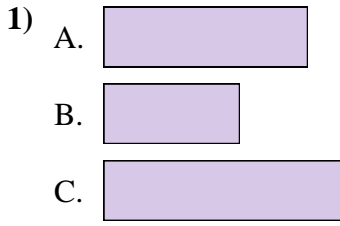


**Respuestas**

1. \_\_\_\_\_
2. \_\_\_\_\_
3. \_\_\_\_\_
4. \_\_\_\_\_
5. \_\_\_\_\_
6. \_\_\_\_\_
7. \_\_\_\_\_
8. \_\_\_\_\_
9. \_\_\_\_\_
10. \_\_\_\_\_
11. \_\_\_\_\_
12. \_\_\_\_\_



Ordenar los objetos del más chico al más grande



**Respuestas**

1. **B, A, C**

2. **B, A, C**

3. **B, A, C**

4. **C, A, B**

5. **C, A, B**

6. **B, A, C**

7. **B, A, C**

8. **C, A, B**

9. **B, A, C**

10. **C, A, B**

11. **A, B, C**

12. **C, A, B**