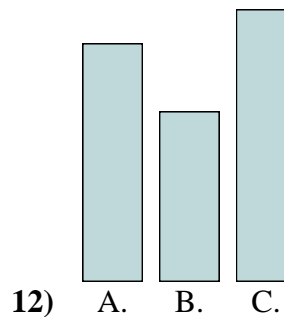
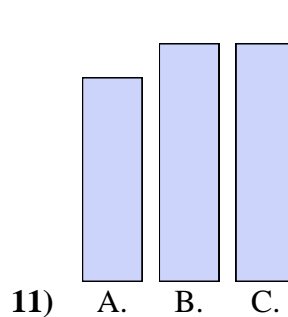
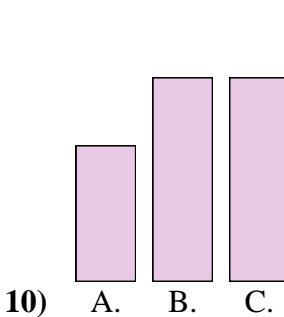
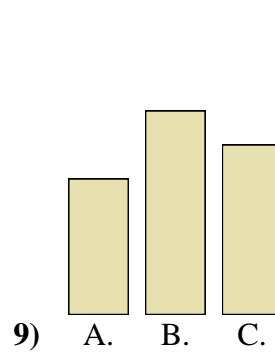
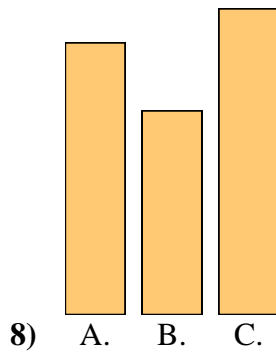
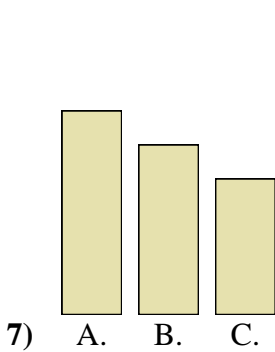
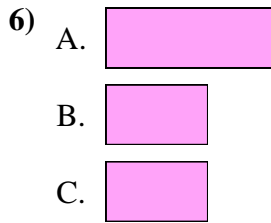
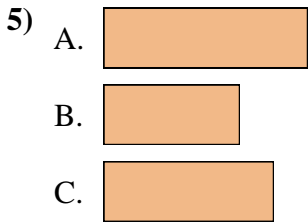
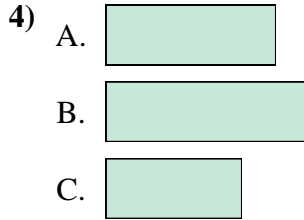
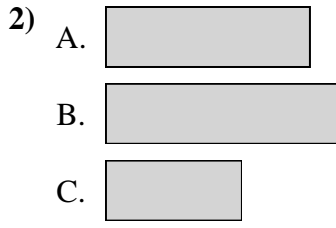
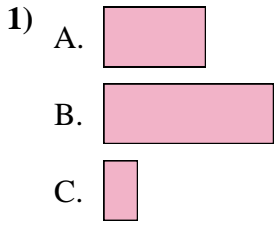




**Ordenar los objetos del más chico al más grande**

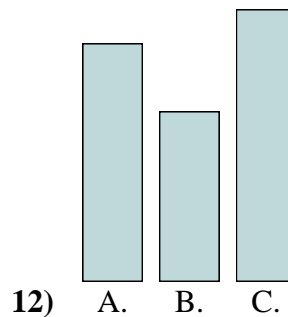
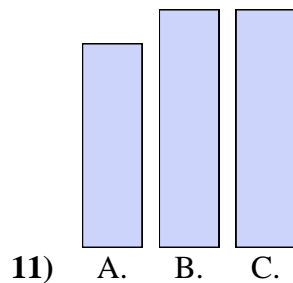
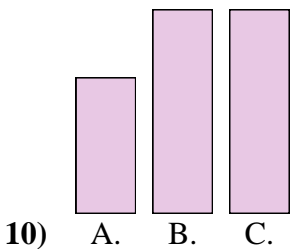
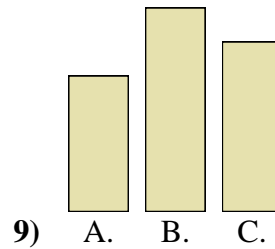
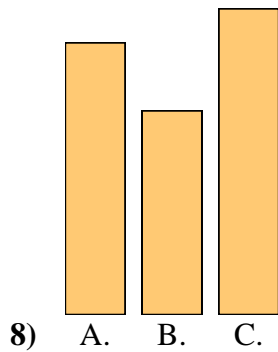
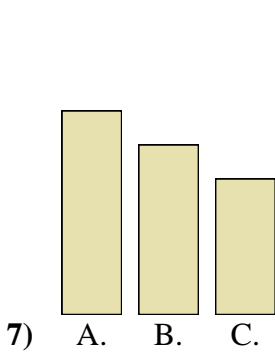
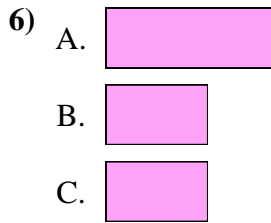
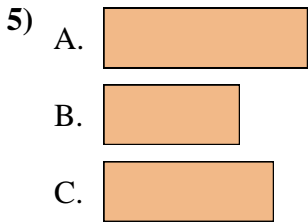
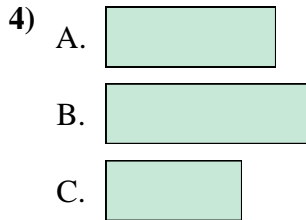
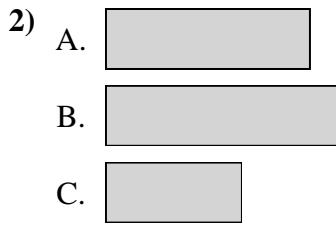
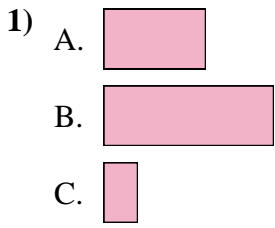


**Respuestas**

1. \_\_\_\_\_
2. \_\_\_\_\_
3. \_\_\_\_\_
4. \_\_\_\_\_
5. \_\_\_\_\_
6. \_\_\_\_\_
7. \_\_\_\_\_
8. \_\_\_\_\_
9. \_\_\_\_\_
10. \_\_\_\_\_
11. \_\_\_\_\_
12. \_\_\_\_\_



Ordenar los objetos del más chico al más grande



Respuestas

1. C, A, B

2. C, A, B

3. A, B, B

4. C, A, B

5. B, C, A

6. B, B, A

7. C, B, A

8. B, A, C

9. A, C, B

10. A, B, B

11. A, B, B

12. B, A, C