





Medir el ancho y alto de cada bloque en pulgadas y en centímetros


Ej)



1)




2)



3)



4)



**Respuestas**

Ex.(in-l) 5

Ex.(in-a) 1 1/2

Ex.(cm-l) 12

Ex.(cm-a) 4

1.(in-l) \_\_\_\_\_

1.(in-a) \_\_\_\_\_

1.(cm-l) \_\_\_\_\_

1.(cm-a) \_\_\_\_\_

2.(in-l) \_\_\_\_\_

2.(in-a) \_\_\_\_\_

2.(cm-l) \_\_\_\_\_

2.(cm-a) \_\_\_\_\_

3.(in-l) \_\_\_\_\_

3.(in-a) \_\_\_\_\_

3.(cm-l) \_\_\_\_\_

3.(cm-a) \_\_\_\_\_

4.(in-l) \_\_\_\_\_

4.(in-a) \_\_\_\_\_

4.(cm-l) \_\_\_\_\_


4.(cm-a) \_\_\_\_\_

In		1		2		3		4		5		6		7				
Cm	1	2	3	4	5	6	7	8	9	10	11	12	13	14	15	16	17	18
In		1		2		3		4		5		6		7				
Cm	1	2	3	4	5	6	7	8	9	10	11	12	13	14	15	16	17	18
In		1		2		3		4		5		6		7				
Cm	1	2	3	4	5	6	7	8	9	10	11	12	13	14	15	16	17	18
In		1		2		3		4		5		6		7				
Cm	1	2	3	4	5	6	7	8	9	10	11	12	13	14	15	16	17	18
In		1		2		3		4		5		6		7				
Cm	1	2	3	4	5	6	7	8	9	10	11	12	13	14	15	16	17	18
In		1		2		3		4		5		6		7				
Cm	1	2	3	4	5	6	7	8	9	10	11	12	13	14	15	16	17	18
In		1		2		3		4		5		6		7				
Cm	1	2	3	4	5	6	7	8	9	10	11	12	13	14	15	16	17	18
In		1		2		3		4		5		6		7				
Cm	1	2	3	4	5	6	7	8	9	10	11	12	13	14	15	16	17	18
In		1		2		3		4		5		6		7				
Cm	1	2	3	4	5	6	7	8	9	10	11	12	13	14	15	16	17	18



Medir el ancho y alto de cada bloque en pulgadas y en centímetros


Ej)



1)




2)



3)



4)



**Respuestas**

Ex.(in-l) 5

Ex.(in-a) 1 1/2

Ex.(cm-l) 12

Ex.(cm-a) 4

1.(in-l) 3 1/2

1.(in-a) 1

1.(cm-l) 8.9

1.(cm-a) 2.5

2.(in-l) 4 1/2

2.(in-a) 1 1/2

2.(cm-l) 11.4

2.(cm-a) 3.8

3.(in-l) 2

3.(in-a) 1

3.(cm-l) 5.1

3.(cm-a) 2.5

4.(in-l) 1 1/2

4.(in-a) 1

4.(cm-l) 3.8

4.(cm-a) 2.5