



Usa las unidades proporcionadas para medir el ancho de cada una de las barras.



**Respuestas**

1. \_\_\_\_\_

2. \_\_\_\_\_

3. \_\_\_\_\_

4. \_\_\_\_\_

5. \_\_\_\_\_

6. \_\_\_\_\_

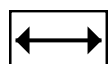
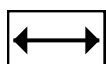
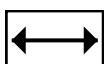
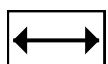
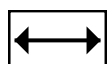
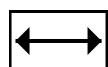
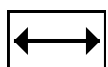
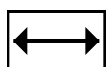
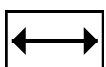
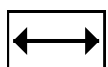
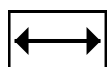
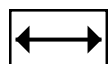
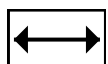
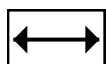
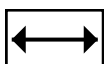
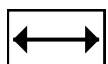
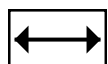
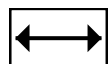
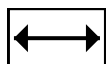
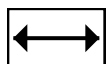
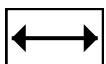
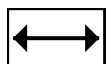
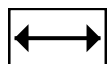
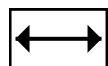
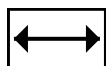
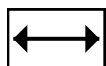
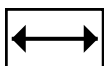
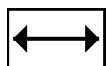
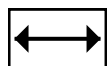
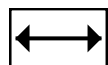
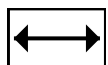
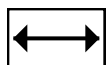
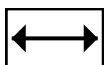
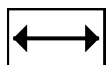
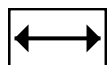
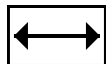
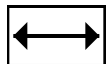
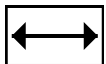
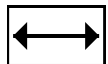
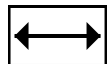
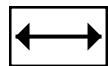
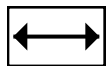
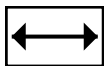
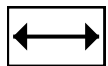
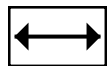
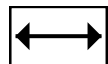
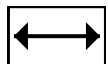
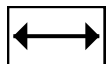
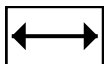
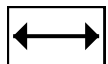
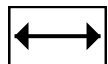
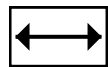
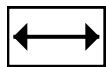
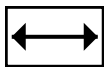
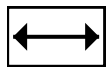
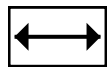
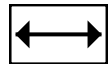
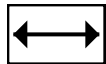
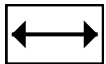
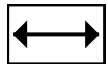
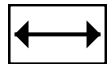
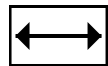
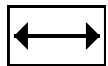
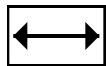
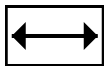
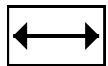
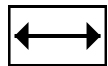
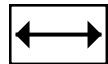
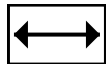
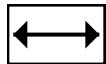
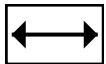
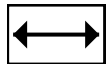
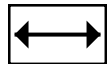
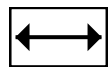
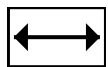
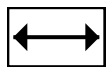
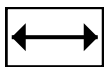
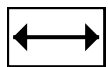
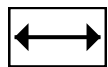
7. \_\_\_\_\_

8. \_\_\_\_\_

9. \_\_\_\_\_


10. \_\_\_\_\_

Recortar y utilizar las unidades mostradas para medir las barras en la página anterior.





Usa las unidades proporcionadas para medir el ancho de cada una de las barras.



Respuestas

1. 2

2. 1

3. 11

4. 9

5. 6

6. 3

7. 5

8. 7

9. 10

10. 8