



Usa las unidades proporcionadas para medir el ancho de cada una de las barras.



Respuestas

1. _____

2. _____

3. _____

4. _____

5. _____

6. _____

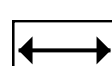
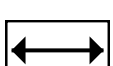
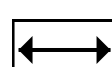
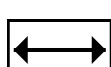
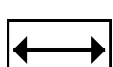
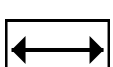
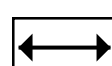
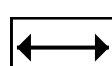
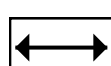
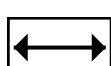
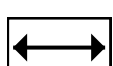
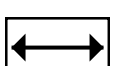
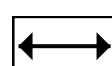
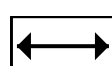
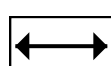
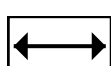
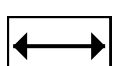
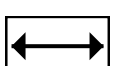
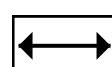
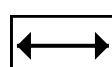
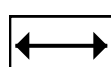

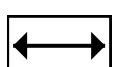
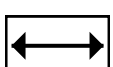


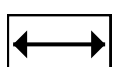
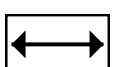
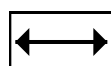
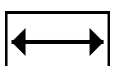
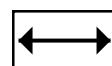
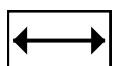
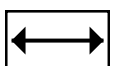
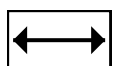
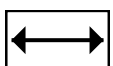
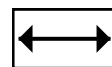
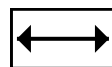
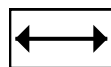
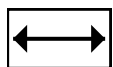
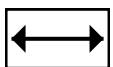
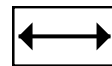
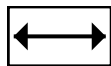
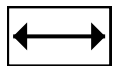
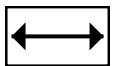
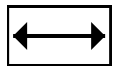
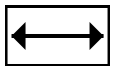
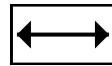
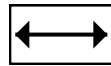
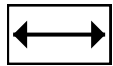
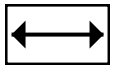
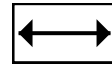
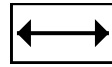
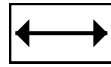
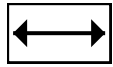
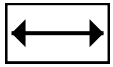
7. _____

8. _____

9. _____

10. _____

Recortar y utilizar las unidades mostradas para medir las barras en la página anterior.





Usa las unidades proporcionadas para medir el ancho de cada una de las barras.



Respuestas

1. 6

2. 8

3. 10

4. 9

5. 3

6. 4

7. 7

8. 11

9. 5

10. 1