



Usa las unidades proporcionadas para medir el ancho de cada una de las barras.



**Respuestas**

1. \_\_\_\_\_

2. \_\_\_\_\_

3. \_\_\_\_\_

4. \_\_\_\_\_

5. \_\_\_\_\_

6. \_\_\_\_\_

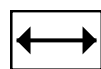
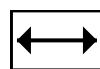
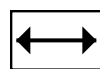
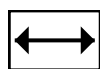
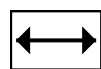
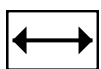
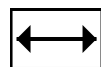
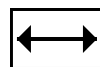
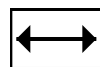
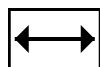
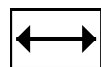
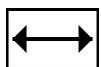
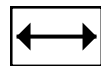
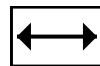
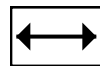
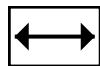
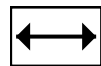
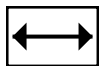
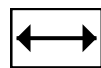
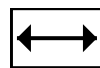
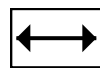
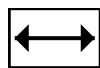
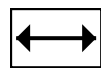
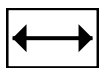
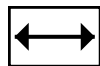
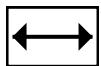
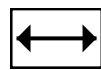
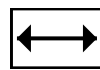
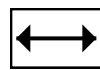
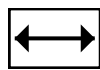
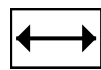
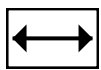
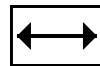
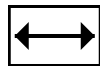
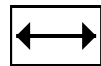
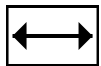
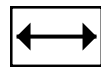
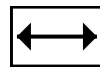
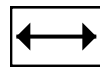
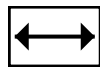
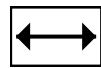
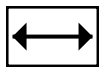
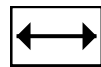
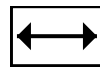
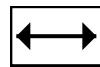
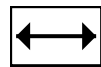
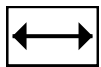
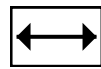
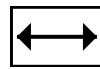
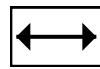
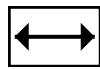
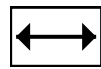
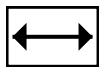
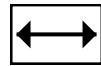
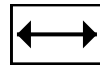
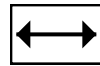
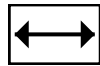
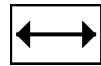
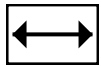
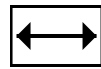
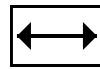
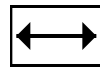
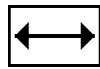
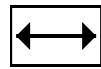
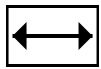
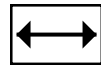
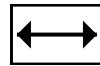
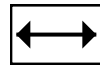
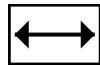
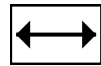
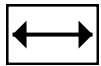
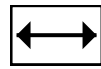
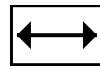
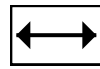
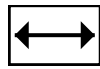
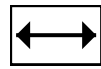
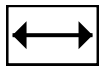
7. \_\_\_\_\_

8. \_\_\_\_\_

9. \_\_\_\_\_



10. \_\_\_\_\_

Recortar y utilizar las unidades mostradas para medir las barras en la página anterior.





Usa las unidades proporcionadas para medir el ancho de cada una de las barras.



Respuestas

1. 7

2. 10

3. 11

4. 5

5. 3

6. 6

7. 12

8. 9

9. 4

10. 1