

















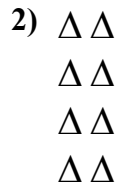
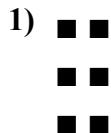









Escribir una ecuación para expresar la matriz y después encontrar el número de formas.



Respuestas

Ej. 5+5+5 = 15

1. \_\_\_\_\_

2. \_\_\_\_\_

3. \_\_\_\_\_

4. \_\_\_\_\_

5. \_\_\_\_\_

6. \_\_\_\_\_



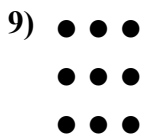



7. \_\_\_\_\_

8. \_\_\_\_\_

9. \_\_\_\_\_



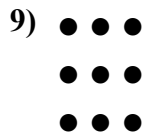




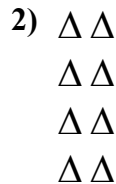
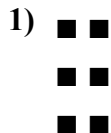
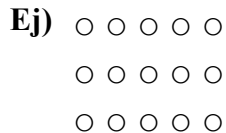
10. \_\_\_\_\_

11. \_\_\_\_\_





Escribir una ecuación para expresar la matriz y después encontrar el número de formas.



Respuestas

Ej. 5+5+5 = 15

1. 2+2+2 = 6

2. 2+2+2+2 = 8

3. 2+2+2+2+2 = 10

4. 4+4+4+4+4 = 20

5. 5+5+5+5+5 = 25

6. 5+5+5+5 = 20

7. 5+5 = 10

8. 3+3 = 6

9. 3+3+3 = 9

10. 3+3+3+3 = 12

11. 3+3+3+3+3 = 15

















