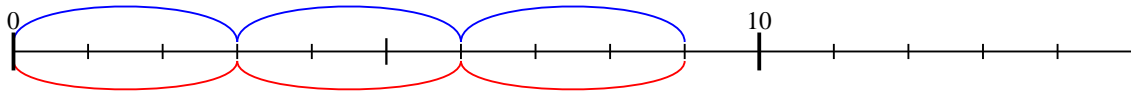




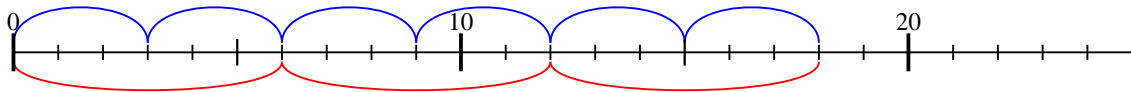


Usar la recta numérica para resolver cada problema.

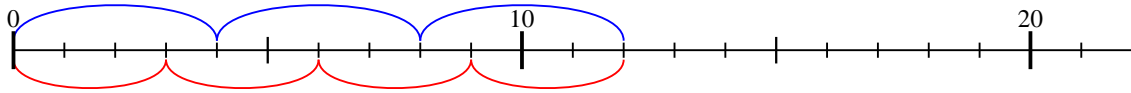
1)  $3 \times 3 =$   
 $3 \times 3 =$



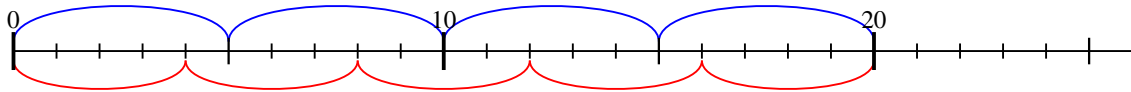
2)  $3 \times 6 =$   
 $6 \times 3 =$



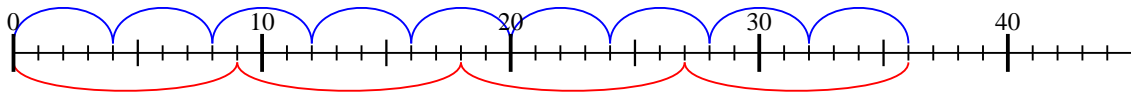
3)  $4 \times 3 =$   
 $3 \times 4 =$



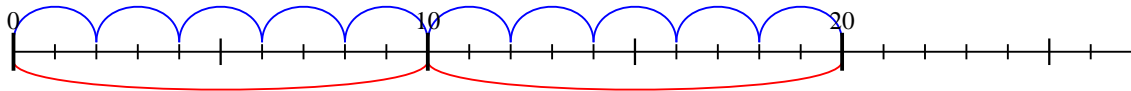
4)  $5 \times 4 =$   
 $4 \times 5 =$



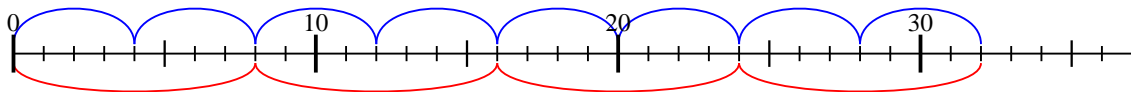
5)  $4 \times 9 =$   
 $9 \times 4 =$



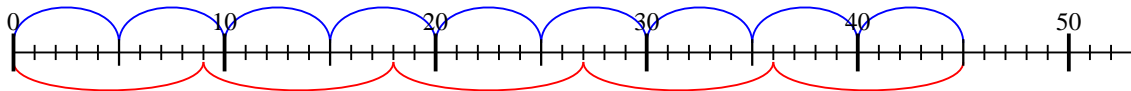
6)  $2 \times 10 =$   
 $10 \times 2 =$



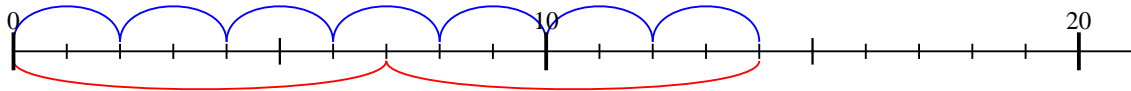
7)  $4 \times 8 =$   
 $8 \times 4 =$



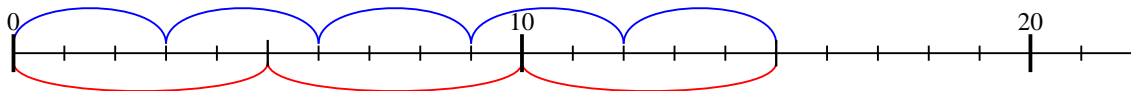
8)  $5 \times 9 =$   
 $9 \times 5 =$



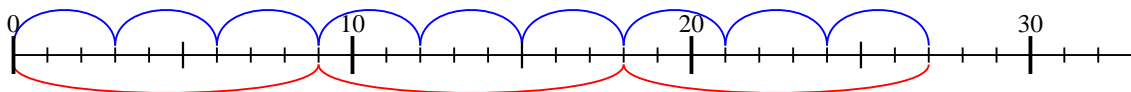
9)  $2 \times 7 =$   
 $7 \times 2 =$



10)  $3 \times 5 =$   
 $5 \times 3 =$



11)  $3 \times 9 =$   
 $9 \times 3 =$



**Respuestas**

1. 9

2. 18

3. 12

4. 20

5. 36

6. 20

7. 32

8. 45

9. 14

10. 15

11. 27