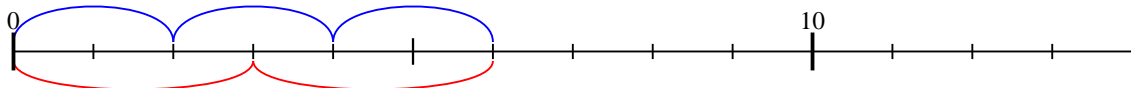


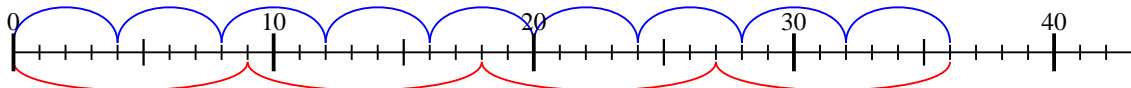


Usar la recta numérica para resolver cada problema.

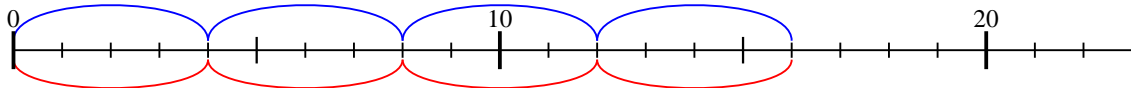
1) $2 \times 3 =$
 $3 \times 2 =$



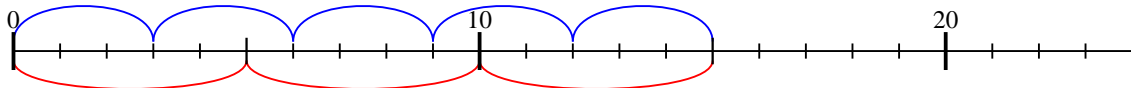
2) $4 \times 9 =$
 $9 \times 4 =$



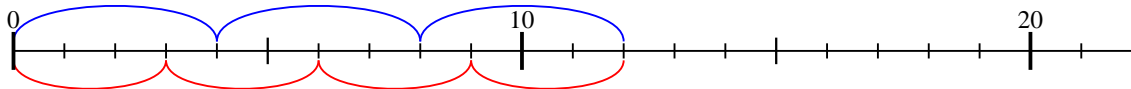
3) $4 \times 4 =$
 $4 \times 4 =$



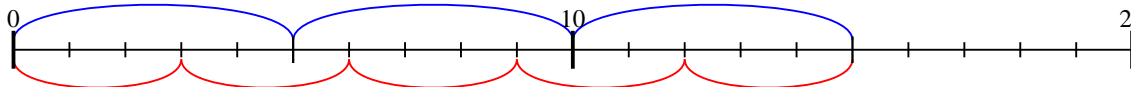
4) $3 \times 5 =$
 $5 \times 3 =$



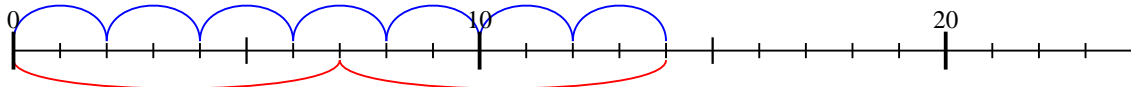
5) $4 \times 3 =$
 $3 \times 4 =$



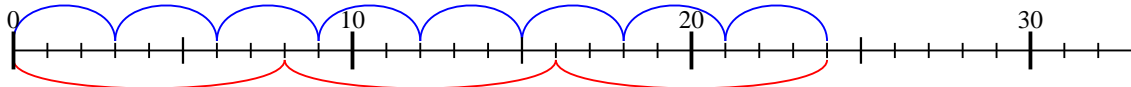
6) $5 \times 3 =$
 $3 \times 5 =$



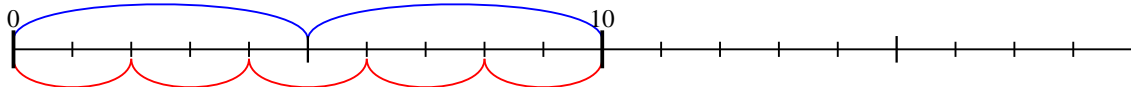
7) $2 \times 7 =$
 $7 \times 2 =$



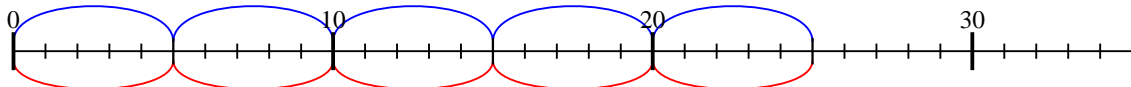
8) $3 \times 8 =$
 $8 \times 3 =$



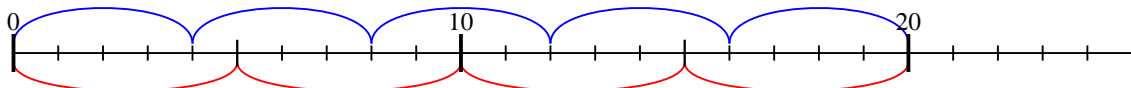
9) $5 \times 2 =$
 $2 \times 5 =$



10) $5 \times 5 =$
 $5 \times 5 =$



11) $4 \times 5 =$
 $5 \times 4 =$



Respuestas

1. 6

2. 36

3. 16

4. 15

5. 12

6. 15

7. 14

8. 24

9. 10

10. 25

11. 20

