


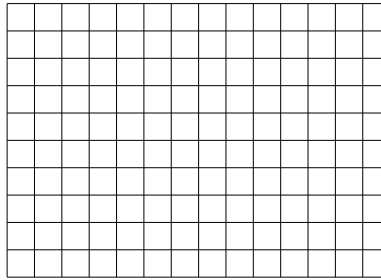


Usar las matrices proporcionadas para resolver cada problema.


1) $37 \times 10 =$




2) $10 \times 14 =$




3) $10 \times 19 =$




4) $10 \times 16 =$



5) $15 \times 10 =$



6) $17 \times 10 =$



Respuestas

1. _____

2. _____

3. _____

4. _____

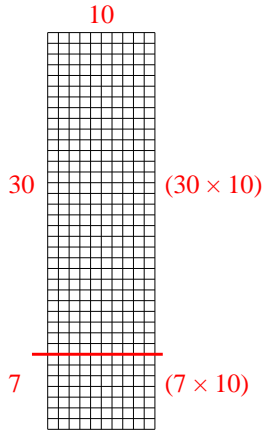
5. _____

6. _____

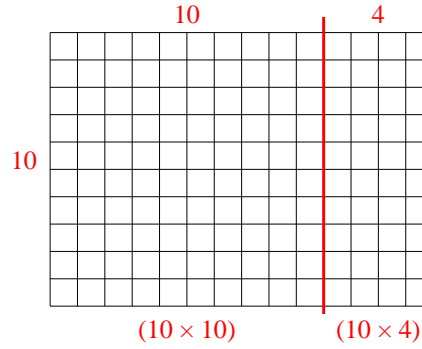


Usar las matrices proporcionadas para resolver cada problema.

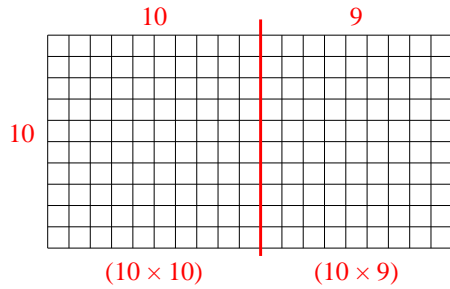
1) $37 \times 10 =$



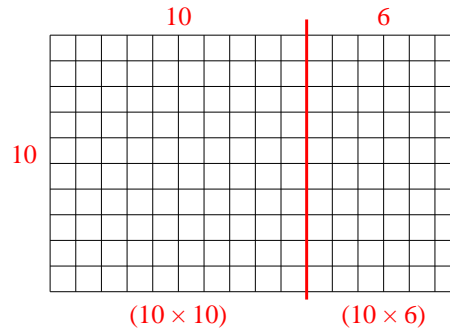
2) $10 \times 14 =$



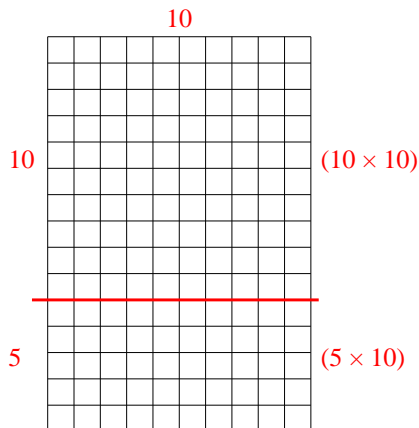
3) $10 \times 19 =$



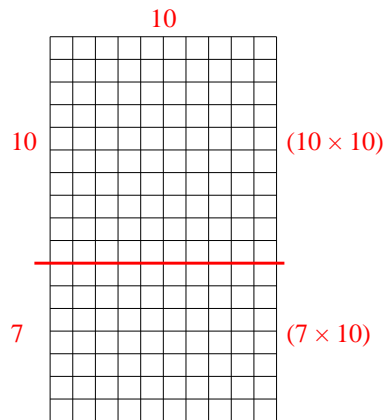
4) $10 \times 16 =$



5) $15 \times 10 =$



6) $17 \times 10 =$



Respuestas

1. 370
2. 140
3. 190
4. 160
5. 150
6. 170