





Usar las matrices proporcionadas para resolver cada problema.


1) $39 \times 20 =$




2) $10 \times 35 =$




3) $30 \times 32 =$




4) $30 \times 16 =$



5) $10 \times 17 =$



6) $10 \times 13 =$



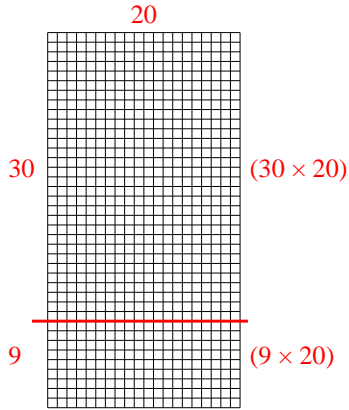
Respuestas

- 1. _____
- 2. _____
- 3. _____
- 4. _____
- 5. _____
- 6. _____

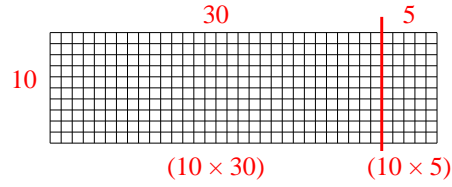


Usar las matrices proporcionadas para resolver cada problema.

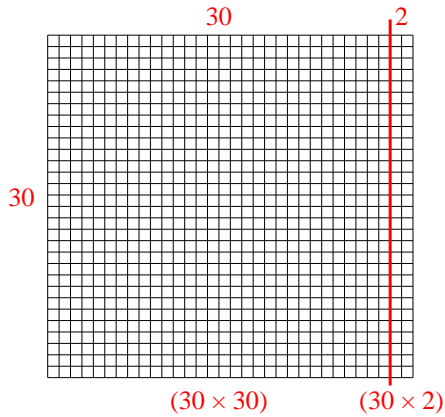
1) $39 \times 20 =$



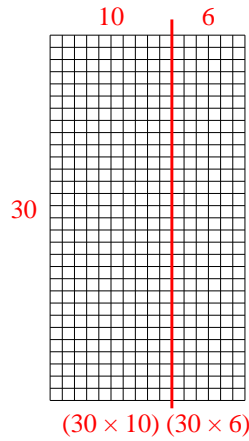
2) $10 \times 35 =$



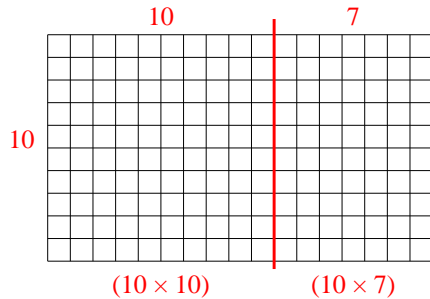
3) $30 \times 32 =$



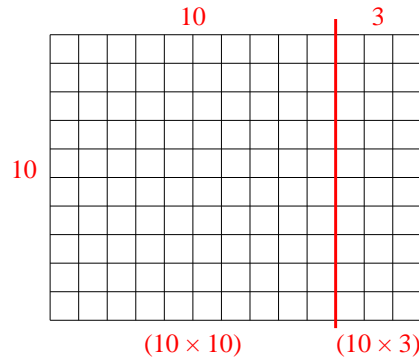
4) $30 \times 16 =$



5) $10 \times 17 =$



6) $10 \times 13 =$



Respuestas

1. 780
2. 350
3. 960
4. 480
5. 170
6. 130