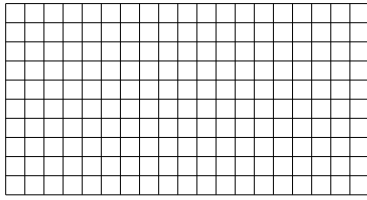





Usar las matrices proporcionadas para resolver cada problema.


1) $10 \times 19 =$




2) $13 \times 10 =$




3) $10 \times 12 =$




4) $17 \times 10 =$



5) $18 \times 10 =$



6) $15 \times 10 =$



Respuestas

1. _____

2. _____

3. _____

4. _____

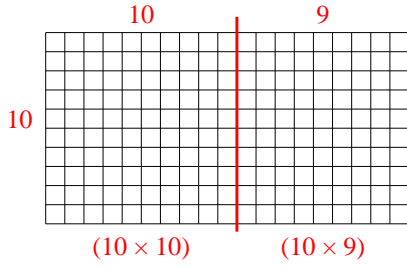
5. _____

6. _____

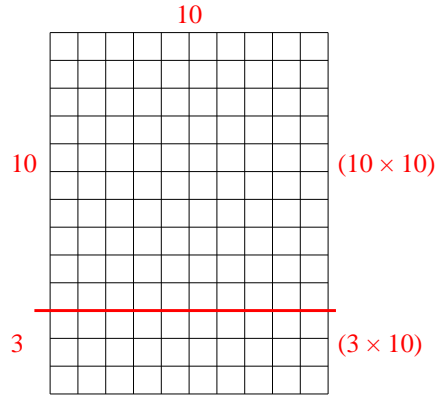


Usar las matrices proporcionadas para resolver cada problema.

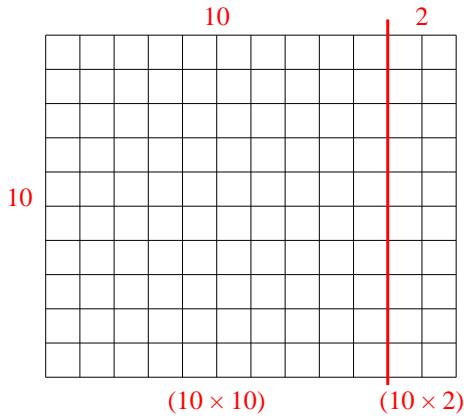
1) $10 \times 19 =$



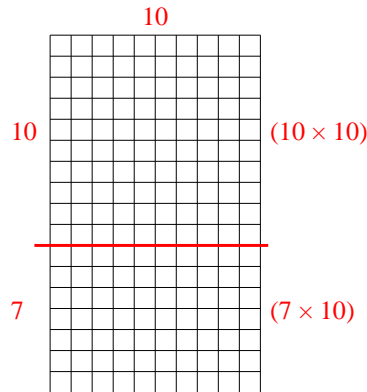
2) $13 \times 10 =$



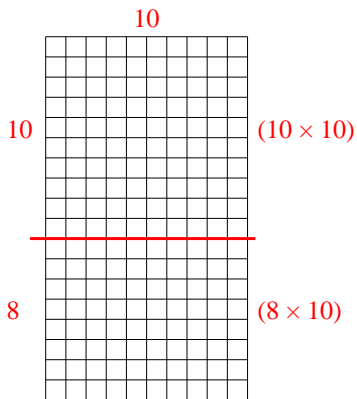
3) $10 \times 12 =$



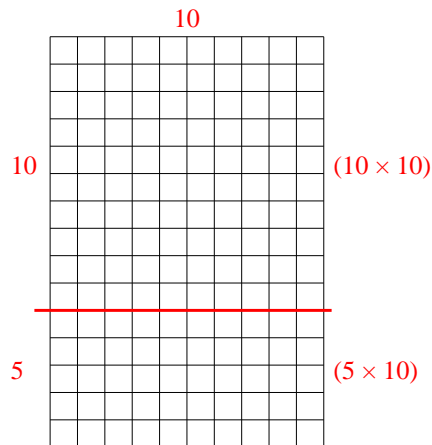
4) $17 \times 10 =$



5) $18 \times 10 =$



6) $15 \times 10 =$



Respuestas

1. **190**

2. **130**

3. **120**

4. **170**

5. **180**

6. **150**