





Usar las matrices proporcionadas para resolver cada problema.


1) $13 \times 20 =$




2) $16 \times 10 =$




3) $17 \times 10 =$




4) $10 \times 17 =$



5) $10 \times 19 =$



6) $11 \times 10 =$



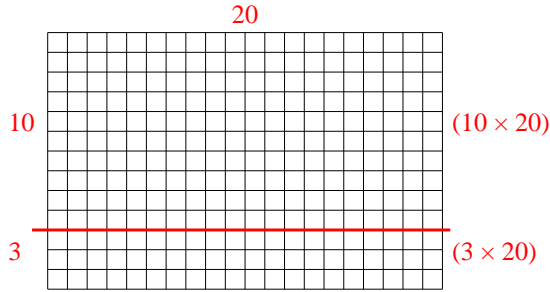
Respuestas

- 1. _____
- 2. _____
- 3. _____
- 4. _____
- 5. _____
- 6. _____

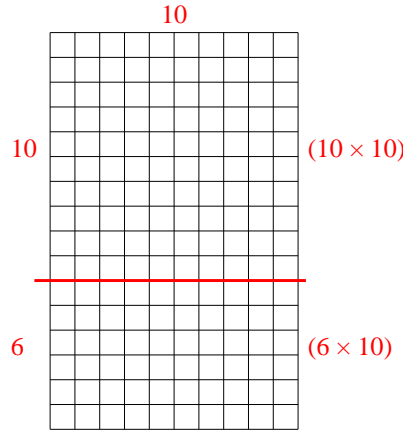


Usar las matrices proporcionadas para resolver cada problema.

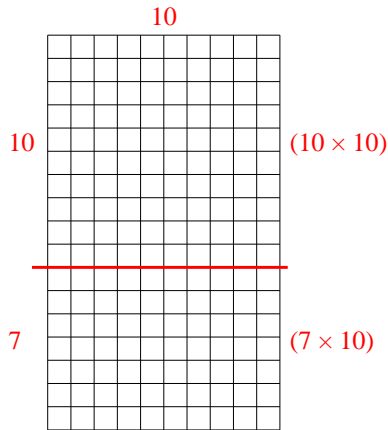
1) $13 \times 20 =$



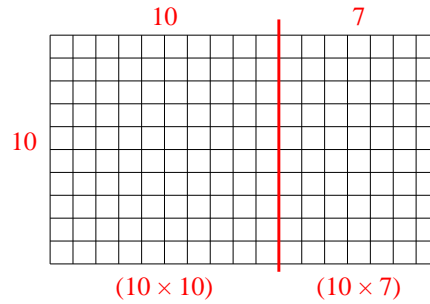
2) $16 \times 10 =$



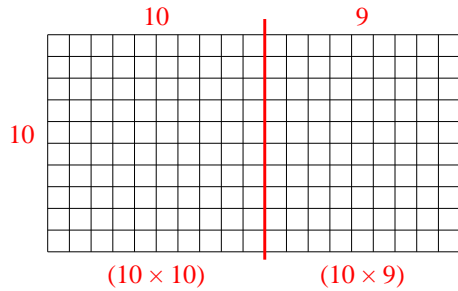
3) $17 \times 10 =$



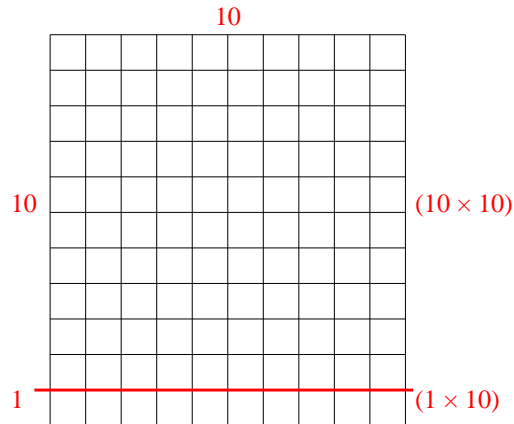
4) $10 \times 17 =$



5) $10 \times 19 =$



6) $11 \times 10 =$



Respuestas

1. 260
2. 160
3. 170
4. 170
5. 190
6. 110