





Usar las matrices proporcionadas para resolver cada problema.


1) $12 \times 20 =$




2) $14 \times 10 =$




3) $10 \times 11 =$




4) $13 \times 10 =$



5) $10 \times 13 =$



6) $15 \times 10 =$



Respuestas

1. _____

2. _____

3. _____

4. _____

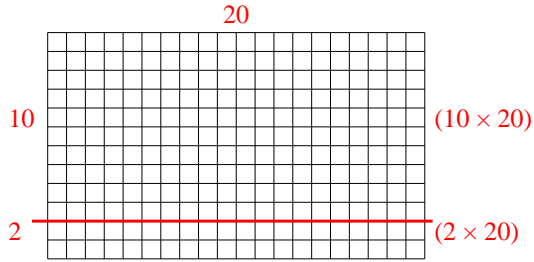
5. _____

6. _____

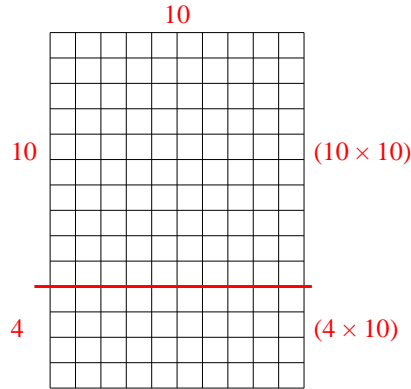


Usar las matrices proporcionadas para resolver cada problema.

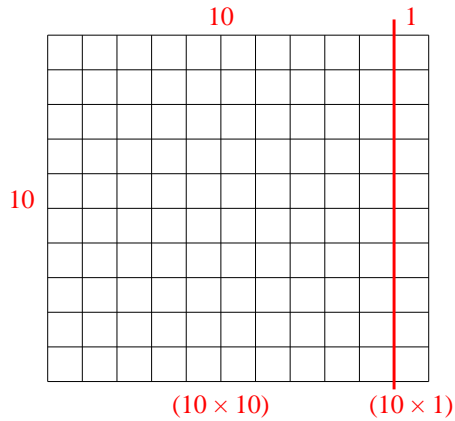
1) $12 \times 20 =$



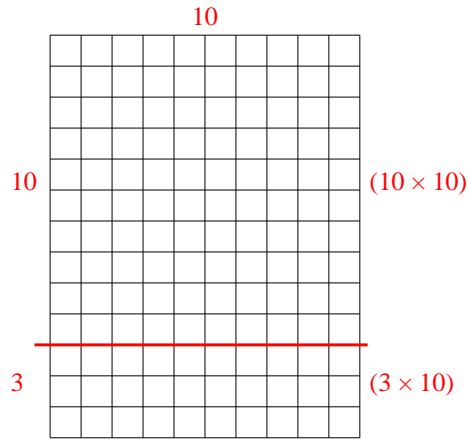
2) $14 \times 10 =$



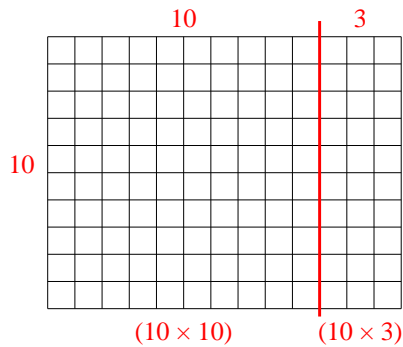
3) $10 \times 11 =$



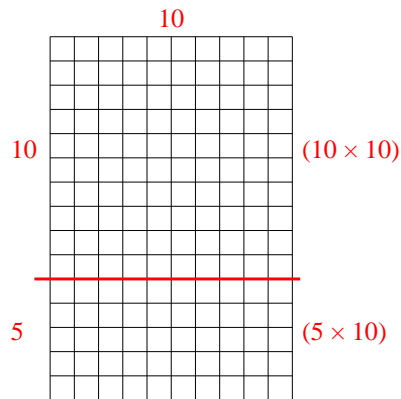
4) $13 \times 10 =$



5) $10 \times 13 =$



6) $15 \times 10 =$



Respuestas

1. 240
2. 140
3. 110
4. 130
5. 130
6. 150