





Usar las matrices proporcionadas para resolver cada problema.


1) $26 \times 20 =$




2) $10 \times 28 =$




3) $16 \times 10 =$




4) $15 \times 10 =$



5) $17 \times 10 =$



6) $10 \times 15 =$



Respuestas

1. _____

2. _____

3. _____

4. _____

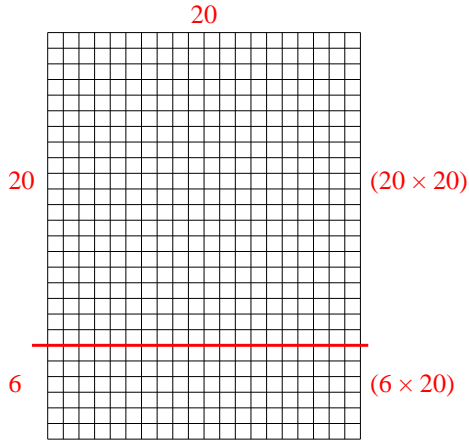
5. _____

6. _____

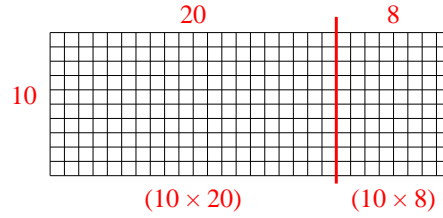


Usar las matrices proporcionadas para resolver cada problema.

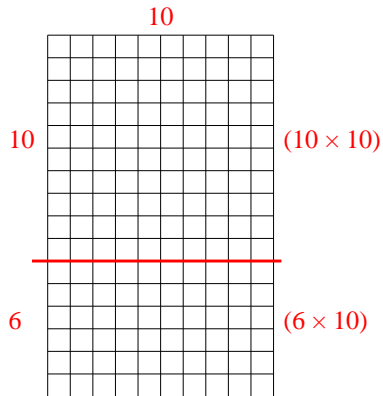
1) $26 \times 20 =$



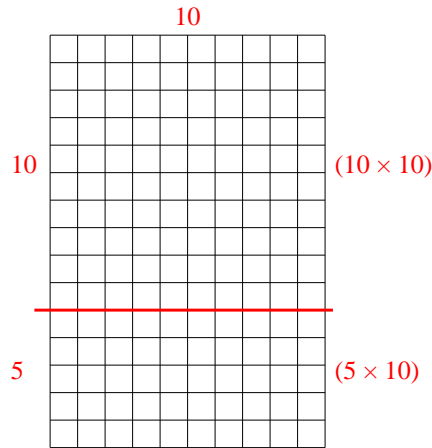
2) $10 \times 28 =$



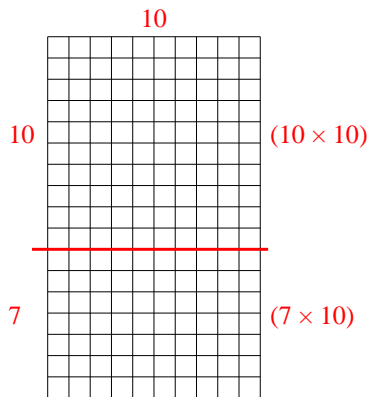
3) $16 \times 10 =$



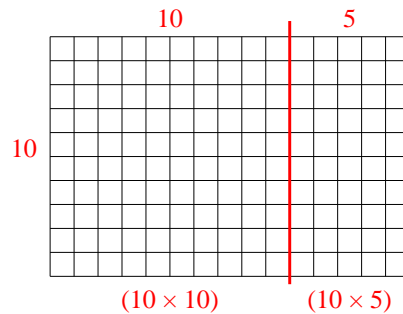
4) $15 \times 10 =$



5) $17 \times 10 =$



6) $10 \times 15 =$



Respuestas

1. 520

2. 280

3. 160

4. 150

5. 170

6. 150