





Usar las matrices proporcionadas para resolver cada problema.


1) $13 \times 30 =$




2) $10 \times 23 =$




3) $17 \times 10 =$




4) $10 \times 16 =$



5) $16 \times 10 =$



6) $12 \times 10 =$



Respuestas

1. _____

2. _____

3. _____

4. _____

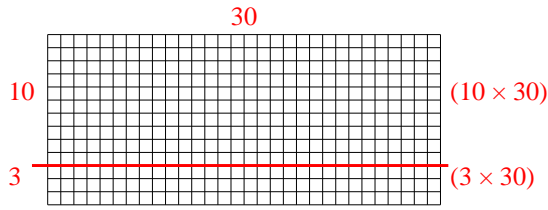
5. _____

6. _____

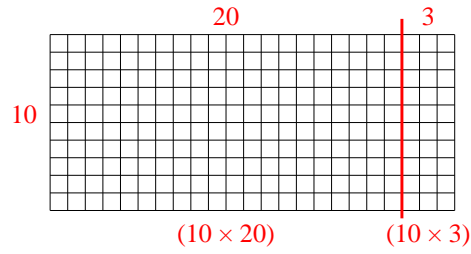


Usar las matrices proporcionadas para resolver cada problema.

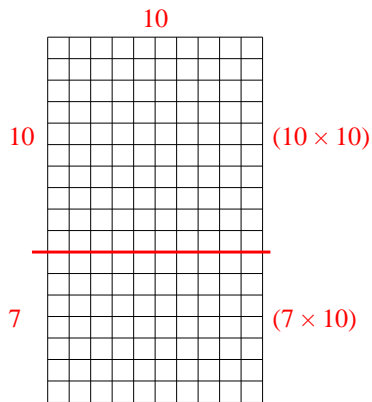
1) $13 \times 30 =$



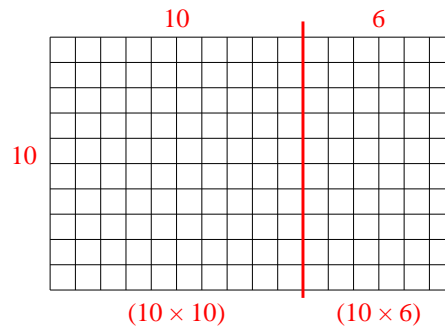
2) $10 \times 23 =$



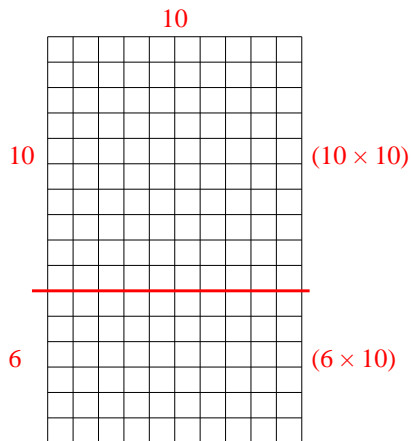
3) $17 \times 10 =$



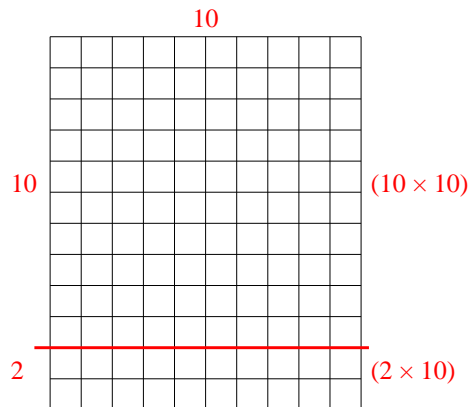
4) $10 \times 16 =$



5) $16 \times 10 =$



6) $12 \times 10 =$



Respuestas

1. 390
2. 230
3. 170
4. 160
5. 160
6. 120