





Usar las matrices proporcionadas para resolver cada problema.


1)  $20 \times 28 =$




2)  $21 \times 20 =$




3)  $10 \times 12 =$




4)  $13 \times 10 =$



5)  $10 \times 19 =$



6)  $17 \times 10 =$



**Respuestas**

1. \_\_\_\_\_

2. \_\_\_\_\_

3. \_\_\_\_\_

4. \_\_\_\_\_

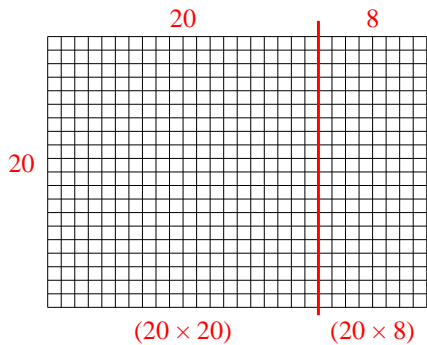
5. \_\_\_\_\_

6. \_\_\_\_\_

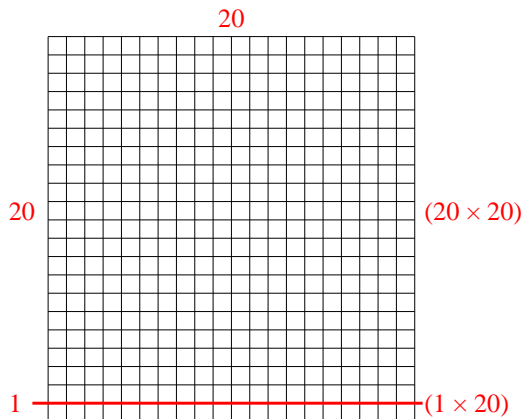


Usar las matrices proporcionadas para resolver cada problema.

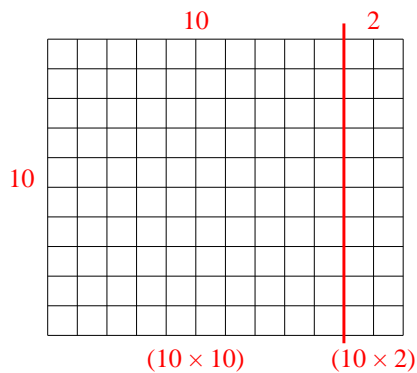
1)  $20 \times 28 =$



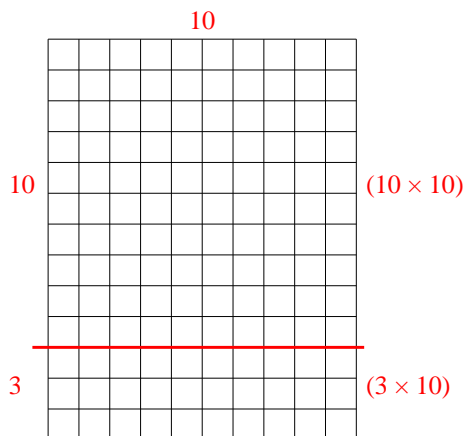
2)  $21 \times 20 =$



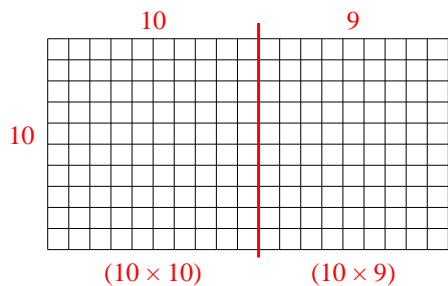
3)  $10 \times 12 =$



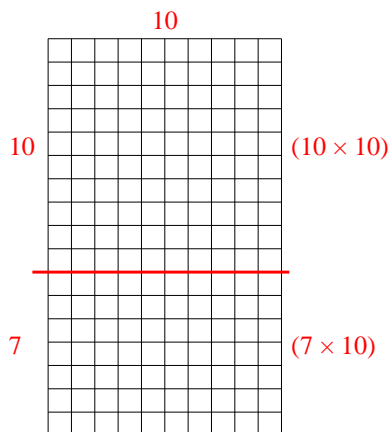
4)  $13 \times 10 =$



5)  $10 \times 19 =$



6)  $17 \times 10 =$



Respuestas

1. 560

2. 420

3. 120

4. 130

5. 190

6. 170