





Usar las matrices proporcionadas para resolver cada problema.


1) $15 \times 10 =$




2) $11 \times 10 =$




3) $10 \times 11 =$




4) $18 \times 10 =$



5) $10 \times 14 =$



6) $14 \times 10 =$



Respuestas

1. _____

2. _____

3. _____

4. _____

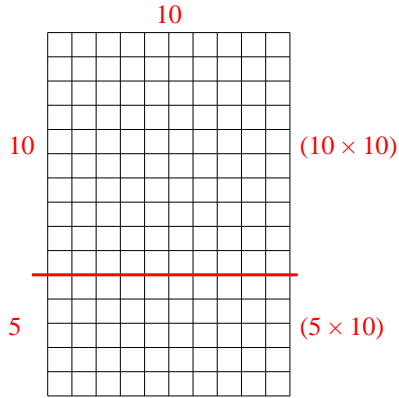
5. _____

6. _____

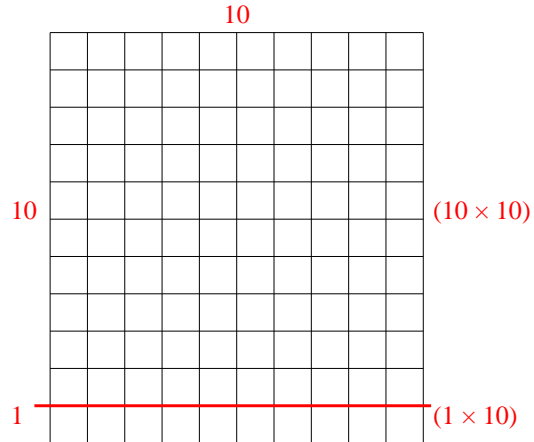


Usar las matrices proporcionadas para resolver cada problema.

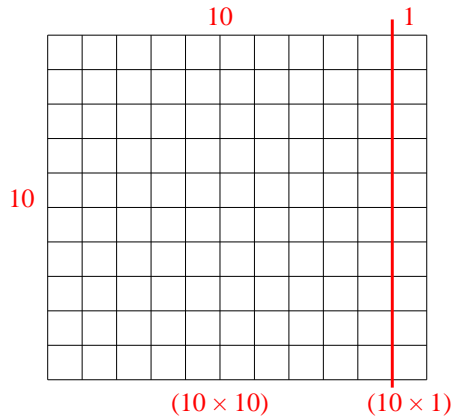
1) $15 \times 10 =$



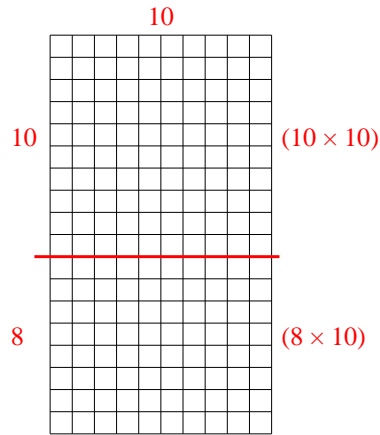
2) $11 \times 10 =$



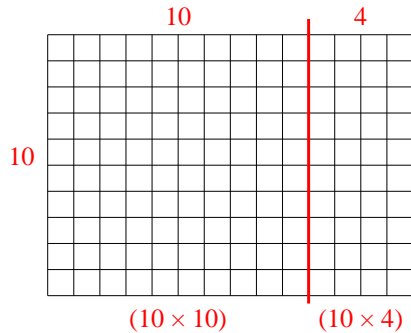
3) $10 \times 11 =$



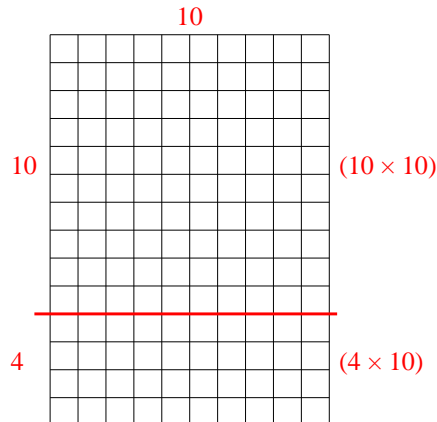
4) $18 \times 10 =$



5) $10 \times 14 =$



6) $14 \times 10 =$



Respuestas

1. 150
2. 110
3. 110
4. 180
5. 140
6. 140