





Usar las matrices proporcionadas para resolver cada problema.


1)  $20 \times 15 =$




2)  $13 \times 10 =$




3)  $19 \times 10 =$




4)  $14 \times 10 =$



5)  $10 \times 16 =$



6)  $16 \times 10 =$



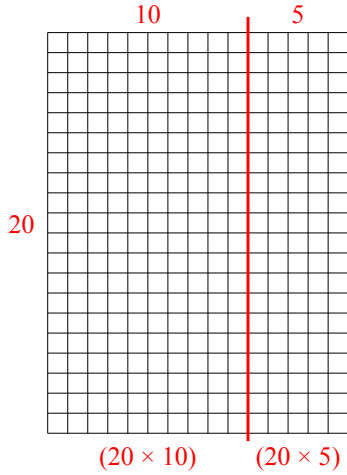
**Respuestas**

- 1. \_\_\_\_\_
- 2. \_\_\_\_\_
- 3. \_\_\_\_\_
- 4. \_\_\_\_\_
- 5. \_\_\_\_\_
- 6. \_\_\_\_\_

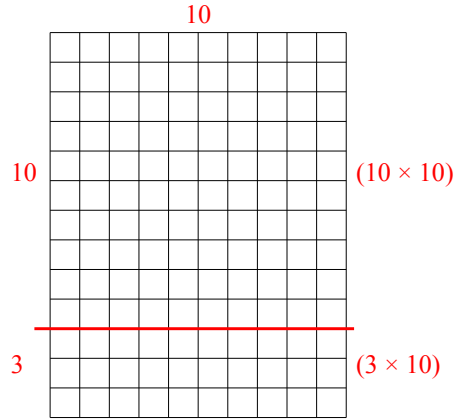


Usar las matrices proporcionadas para resolver cada problema.

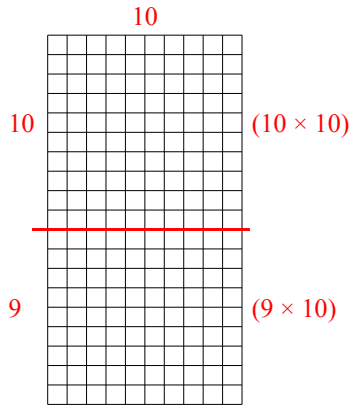
1)  $20 \times 15 =$



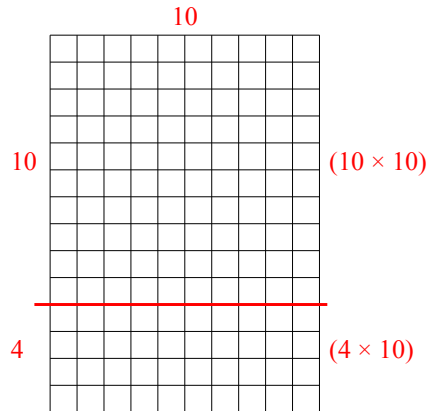
2)  $13 \times 10 =$



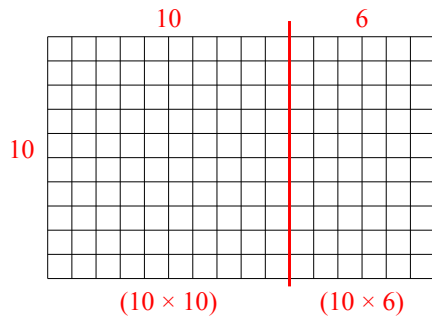
3)  $19 \times 10 =$



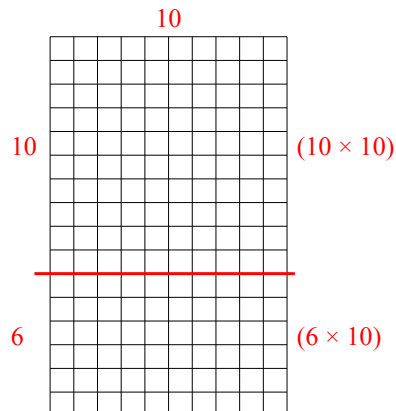
4)  $14 \times 10 =$



5)  $10 \times 16 =$



6)  $16 \times 10 =$



**Respuestas**

1. 300

2. 130

3. 190

4. 140

5. 160

6. 160