




Usar la matriz proporcionada para resolver cada problema.


1) $37 \times 30 =$




2) $35 \times 20 =$




3) $20 \times 22 =$




4) $28 \times 20 =$



5) $23 \times 20 =$



6) $22 \times 20 =$



Respuestas

1. _____

2. _____

3. _____

4. _____

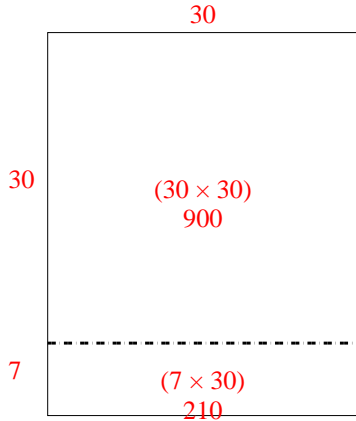
5. _____

6. _____

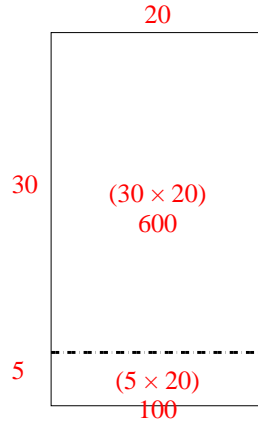


Usar la matriz proporcionada para resolver cada problema.

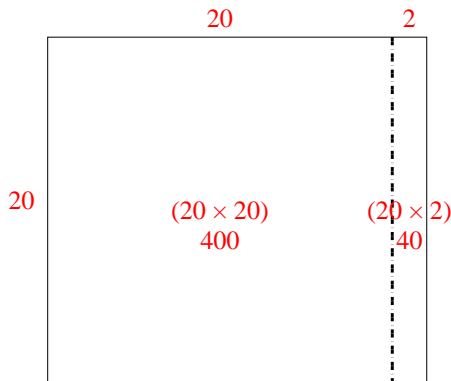
1) $37 \times 30 =$



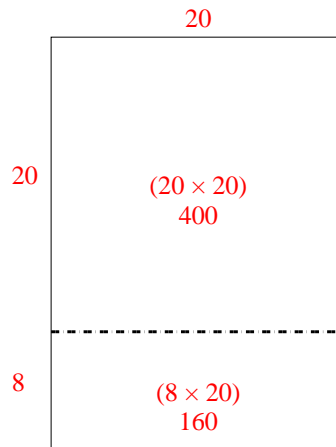
2) $35 \times 20 =$



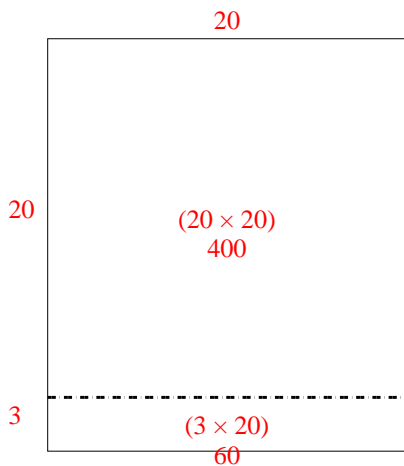
3) $20 \times 22 =$



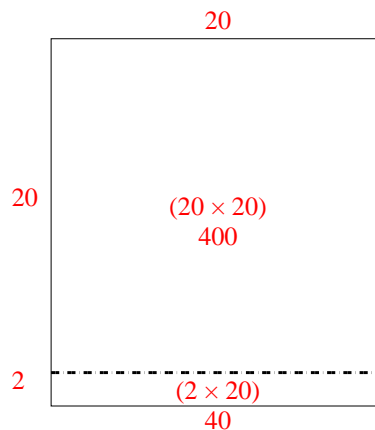
4) $28 \times 20 =$



5) $23 \times 20 =$



6) $22 \times 20 =$



Respuestas

1. 1,110

2. 700

3. 440

4. 560

5. 460

6. 440