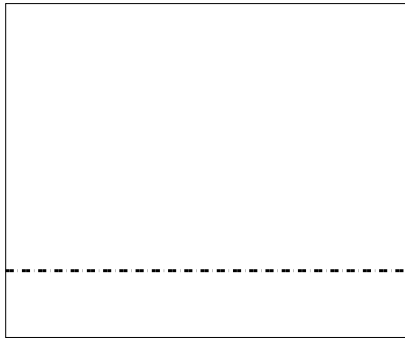





Usar la matriz proporcionada para resolver cada problema.


1) $25 \times 30 =$




2) $24 \times 20 =$




3) $22 \times 20 =$




4) $20 \times 27 =$



5) $20 \times 26 =$



6) $28 \times 20 =$



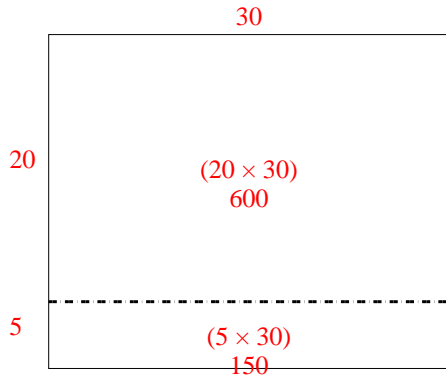
Respuestas

- 1. _____
- 2. _____
- 3. _____
- 4. _____
- 5. _____
- 6. _____

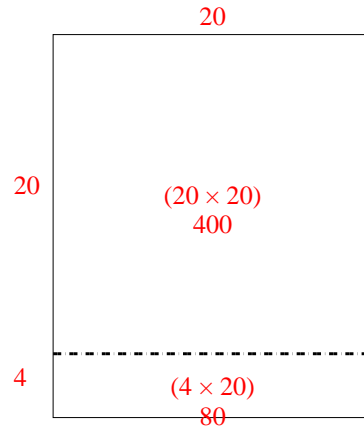


Usar la matriz proporcionada para resolver cada problema.

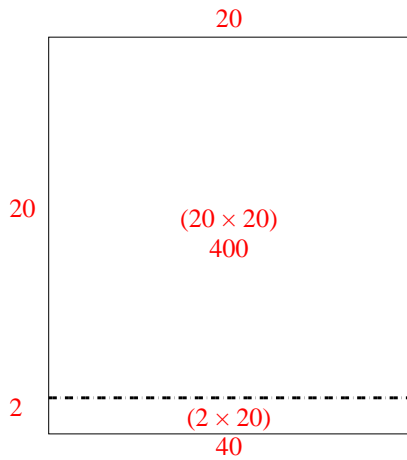
1) $25 \times 30 =$



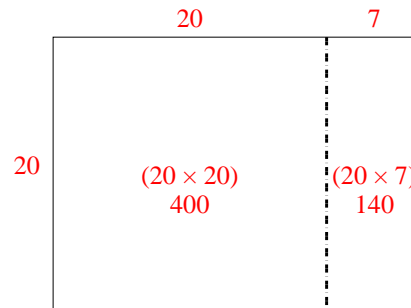
2) $24 \times 20 =$



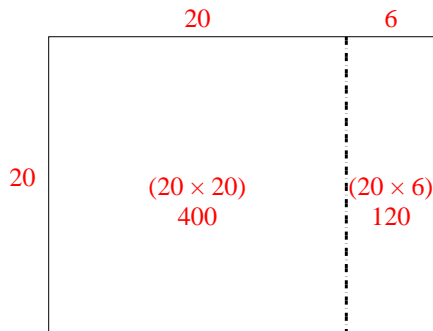
3) $22 \times 20 =$



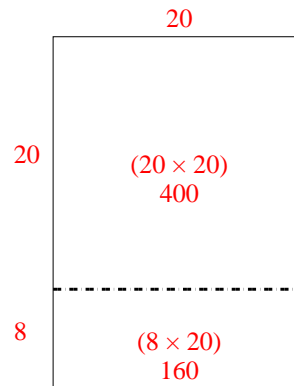
4) $20 \times 27 =$



5) $20 \times 26 =$



6) $28 \times 20 =$



Respuestas

1. 750
2. 480
3. 440
4. 540
5. 520
6. 560