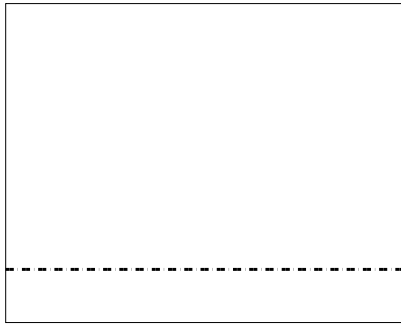





Usar la matriz proporcionada para resolver cada problema.


1)  $24 \times 30 =$




2)  $24 \times 20 =$




3)  $20 \times 26 =$




4)  $25 \times 20 =$



5)  $22 \times 20 =$



6)  $26 \times 20 =$



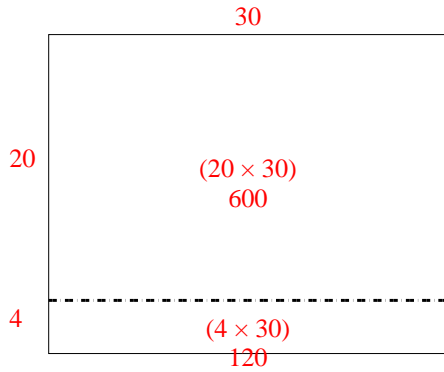
**Respuestas**

- 1. \_\_\_\_\_
- 2. \_\_\_\_\_
- 3. \_\_\_\_\_
- 4. \_\_\_\_\_
- 5. \_\_\_\_\_
- 6. \_\_\_\_\_

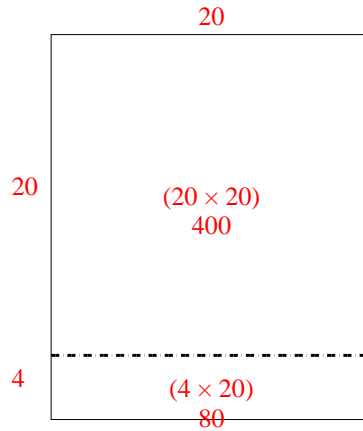


Usar la matriz proporcionada para resolver cada problema.

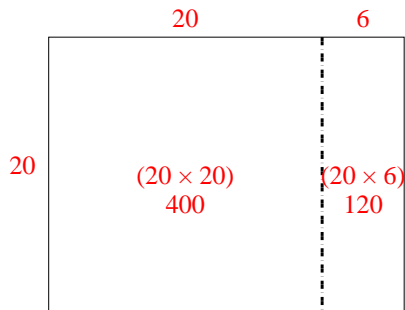
1)  $24 \times 30 =$



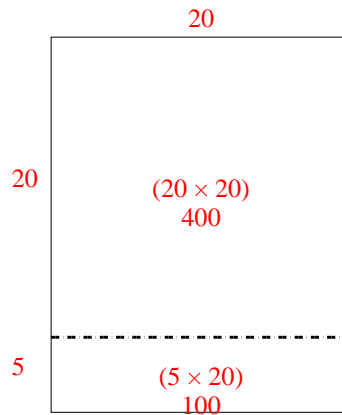
2)  $24 \times 20 =$



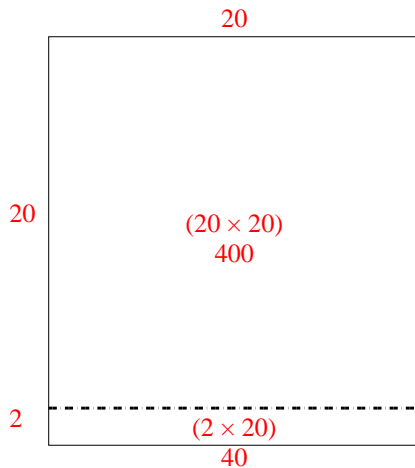
3)  $20 \times 26 =$



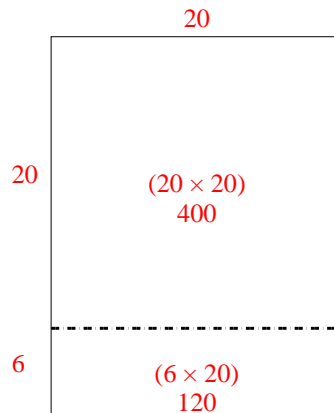
4)  $25 \times 20 =$



5)  $22 \times 20 =$



6)  $26 \times 20 =$



**Respuestas**

1. 720

2. 480

3. 520

4. 500

5. 440

6. 520