





Usar la matriz proporcionada para resolver cada problema.


1)  $26 \times 20 =$




2)  $22 \times 20 =$




3)  $20 \times 24 =$




4)  $20 \times 29 =$



5)  $28 \times 20 =$



6)  $25 \times 20 =$



**Respuestas**

1. \_\_\_\_\_

2. \_\_\_\_\_

3. \_\_\_\_\_

4. \_\_\_\_\_

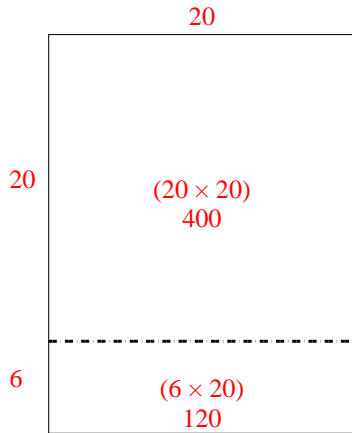
5. \_\_\_\_\_

6. \_\_\_\_\_

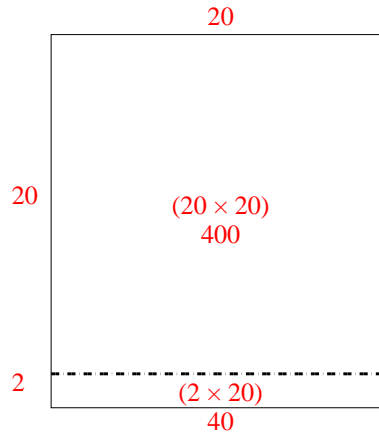


Usar la matriz proporcionada para resolver cada problema.

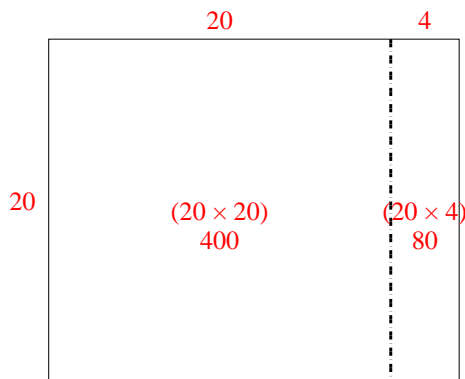
1)  $26 \times 20 =$



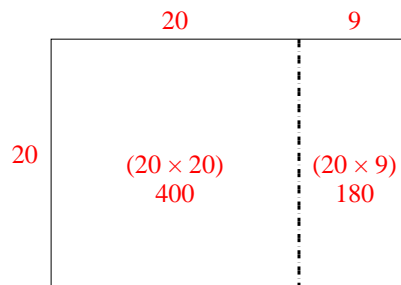
2)  $22 \times 20 =$



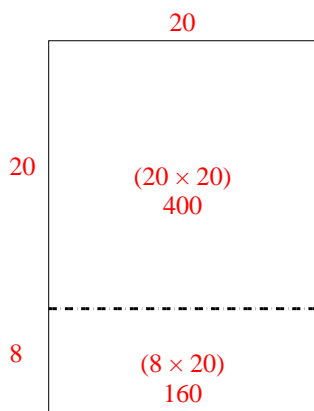
3)  $20 \times 24 =$



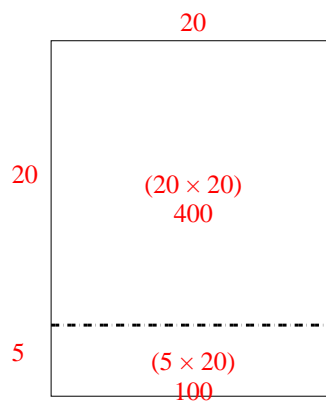
4)  $20 \times 29 =$



5)  $28 \times 20 =$



6)  $25 \times 20 =$



**Respuestas**

1. 520
2. 440
3. 480
4. 580
5. 560
6. 500