


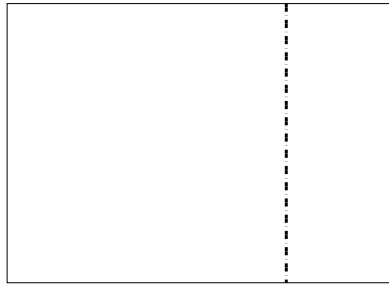


Usar la matriz proporcionada para resolver cada problema.


1) $28 \times 20 =$




2) $20 \times 28 =$




3) $20 \times 23 =$




4) $22 \times 20 =$



5) $29 \times 20 =$



6) $25 \times 20 =$



Respuestas

1. _____

2. _____

3. _____

4. _____

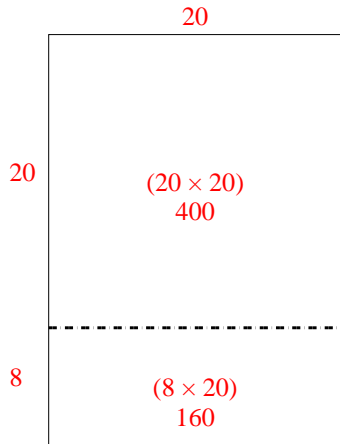
5. _____

6. _____

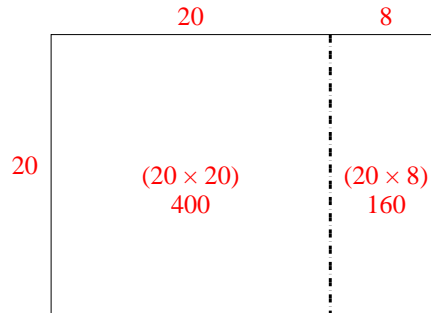


Usar la matriz proporcionada para resolver cada problema.

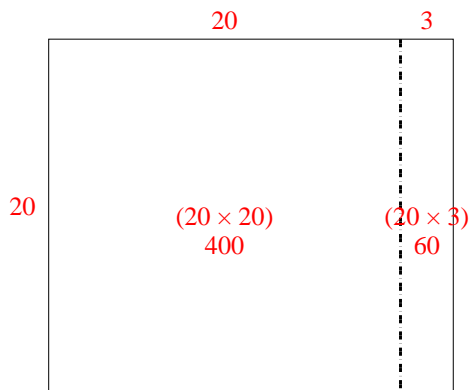
1) $28 \times 20 =$



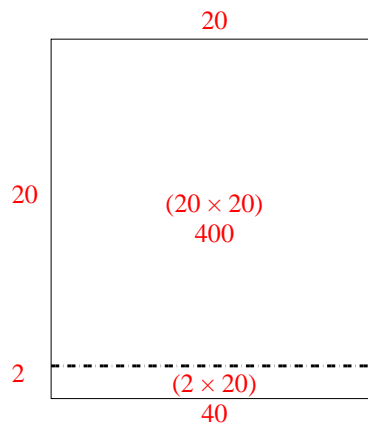
2) $20 \times 28 =$



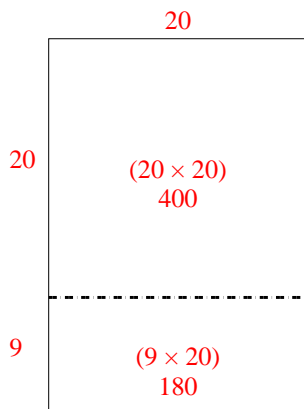
3) $20 \times 23 =$



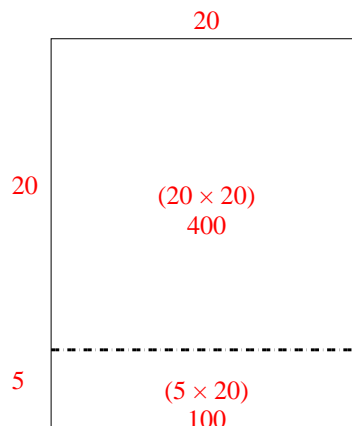
4) $22 \times 20 =$



5) $29 \times 20 =$



6) $25 \times 20 =$



Respuestas

1. 560
2. 560
3. 460
4. 440
5. 580
6. 500