





Usar la matriz proporcionada para resolver cada problema.


1) $20 \times 24 =$




2) $24 \times 20 =$




3) $20 \times 26 =$




4) $20 \times 28 =$



5) $29 \times 20 =$



6) $26 \times 20 =$



Respuestas

1. _____

2. _____

3. _____

4. _____

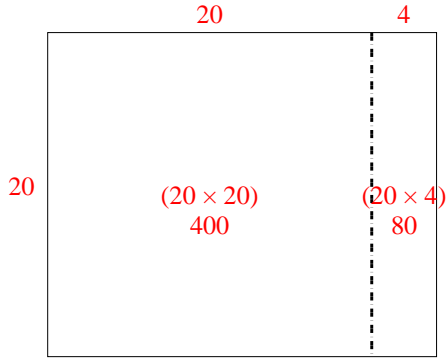
5. _____

6. _____

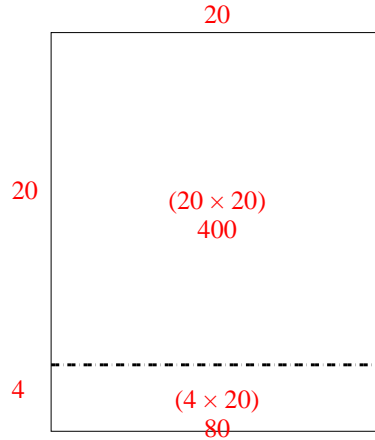


Usar la matriz proporcionada para resolver cada problema.

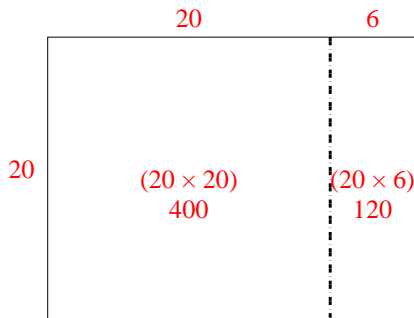
1) $20 \times 24 =$



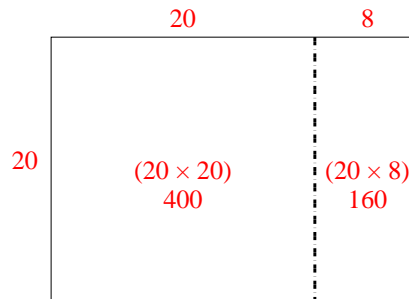
2) $24 \times 20 =$



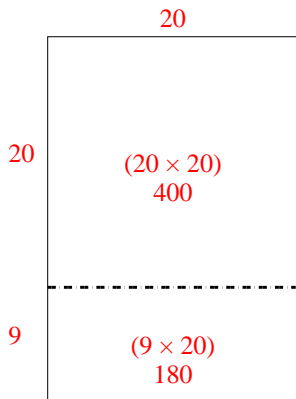
3) $20 \times 26 =$



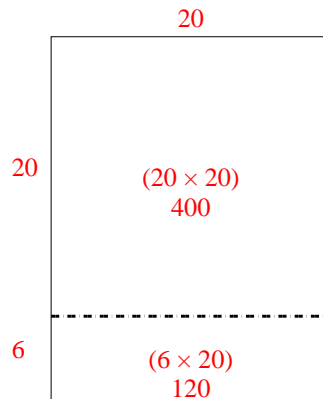
4) $20 \times 28 =$



5) $29 \times 20 =$



6) $26 \times 20 =$



Respuestas

1. 480
2. 480
3. 520
4. 560
5. 580
6. 520