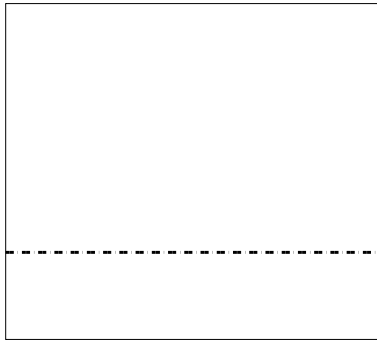





Usar la matriz proporcionada para resolver cada problema.


1) $27 \times 30 =$




2) $20 \times 26 =$




3) $20 \times 25 =$




4) $20 \times 27 =$



5) $20 \times 29 =$



6) $22 \times 20 =$



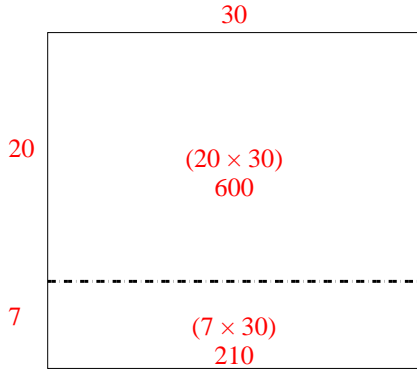
Respuestas

1. _____
2. _____
3. _____
4. _____
5. _____
6. _____

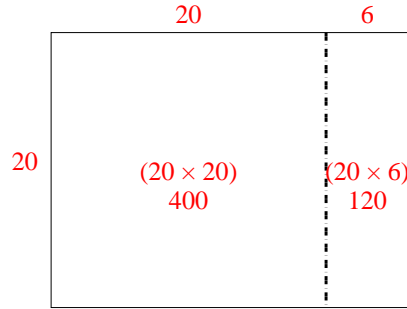


Usar la matriz proporcionada para resolver cada problema.

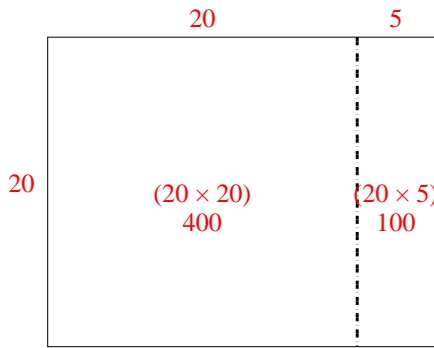
1) $27 \times 30 =$



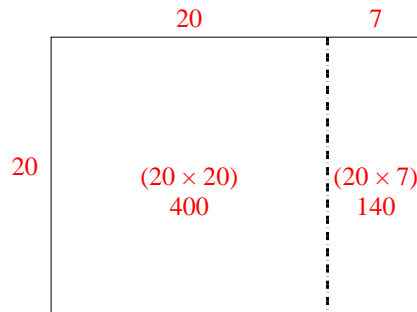
2) $20 \times 26 =$



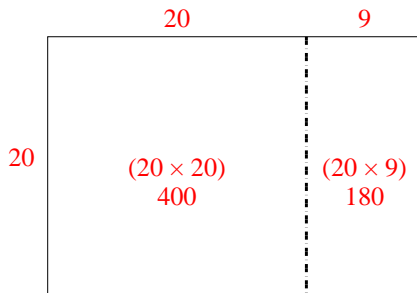
3) $20 \times 25 =$



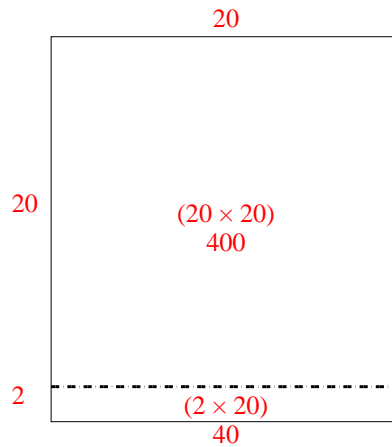
4) $20 \times 27 =$



5) $20 \times 29 =$



6) $22 \times 20 =$



Respuestas

1. 810
2. 520
3. 500
4. 540
5. 580
6. 440