




Usar la matriz proporcionada para resolver cada problema.

1) $37 \times 30 =$




2) $21 \times 30 =$




3) $20 \times 21 =$




4) $24 \times 20 =$



5) $20 \times 29 =$



6) $20 \times 27 =$



Respuestas

1. _____

2. _____

3. _____

4. _____

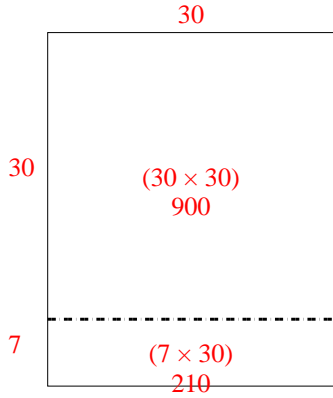
5. _____

6. _____

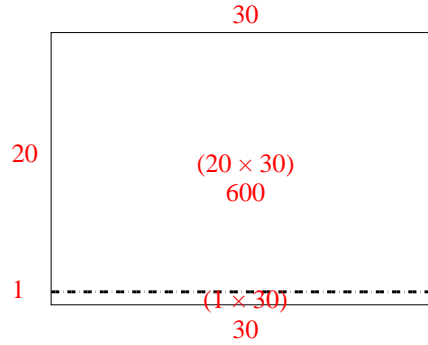


Usar la matriz proporcionada para resolver cada problema.

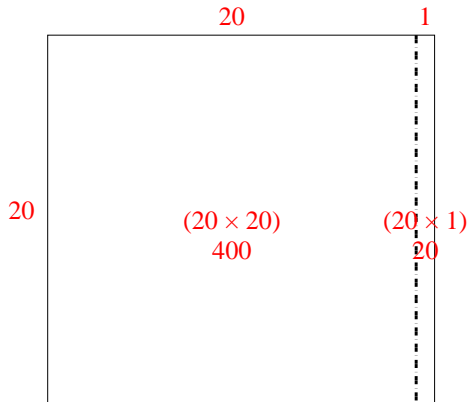
1) $37 \times 30 =$



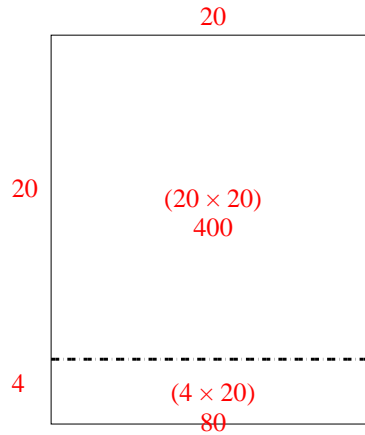
2) $21 \times 30 =$



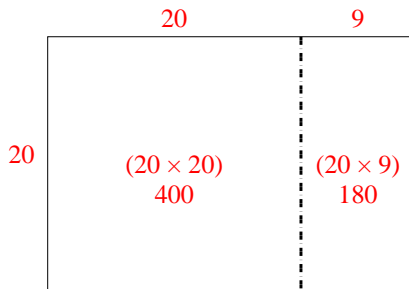
3) $20 \times 21 =$



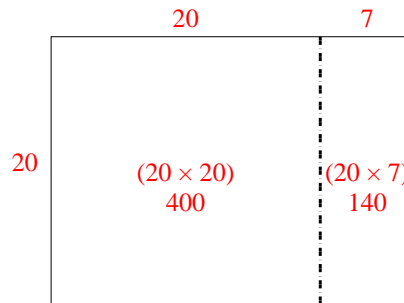
4) $24 \times 20 =$



5) $20 \times 29 =$



6) $20 \times 27 =$



Respuestas

1. 1,110
2. 630
3. 420
4. 480
5. 580
6. 540