



Usar la matriz proporcionada para resolver cada problema.


1) $30 \times 32 =$




2) $32 \times 20 =$




3) $20 \times 28 =$




4) $20 \times 27 =$



5) $20 \times 26 =$



6) $29 \times 20 =$



Respuestas

1. _____

2. _____

3. _____

4. _____

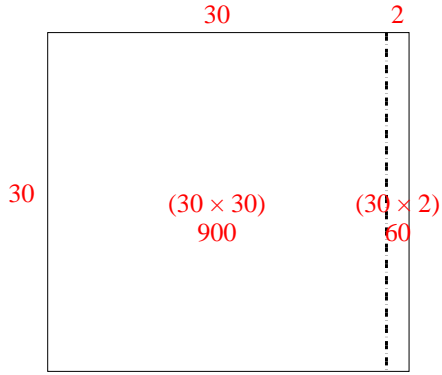
5. _____

6. _____

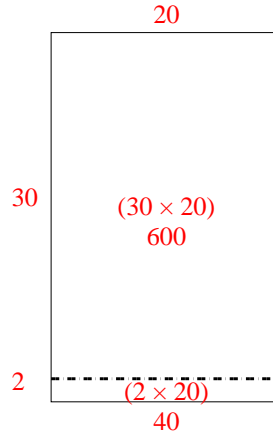


Usar la matriz proporcionada para resolver cada problema.

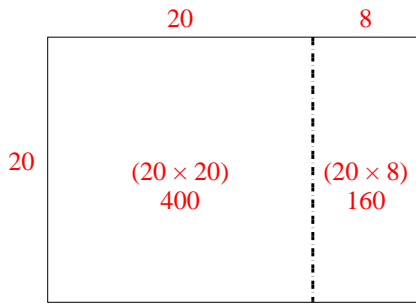
1) $30 \times 32 =$



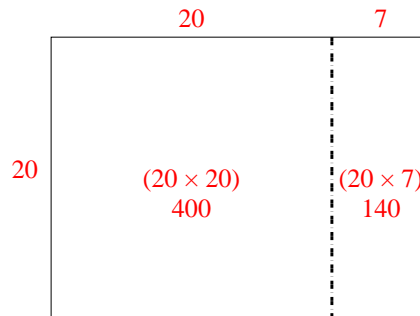
2) $32 \times 20 =$



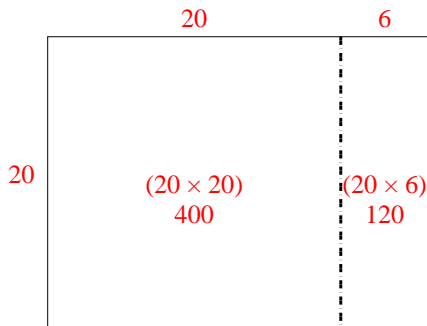
3) $20 \times 28 =$



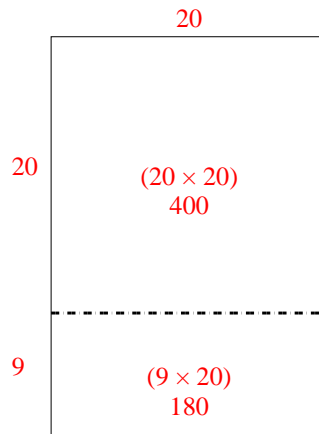
4) $20 \times 27 =$



5) $20 \times 26 =$



6) $29 \times 20 =$



Respuestas

1. 960
2. 640
3. 560
4. 540
5. 520
6. 580