





Usar la matriz proporcionada para resolver cada problema.


1) $20 \times 34 =$




2) $24 \times 20 =$




3) $26 \times 20 =$




4) $20 \times 21 =$



5) $27 \times 20 =$



6) $20 \times 23 =$



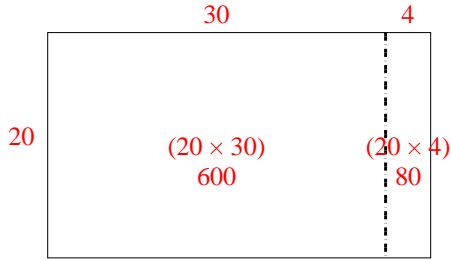
Respuestas

- 1. _____
- 2. _____
- 3. _____
- 4. _____
- 5. _____
- 6. _____

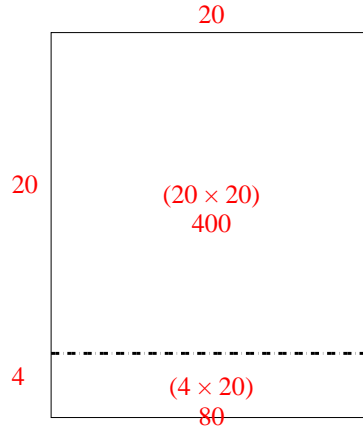


Usar la matriz proporcionada para resolver cada problema.

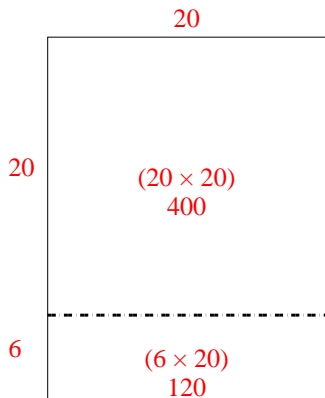
1) $20 \times 34 =$



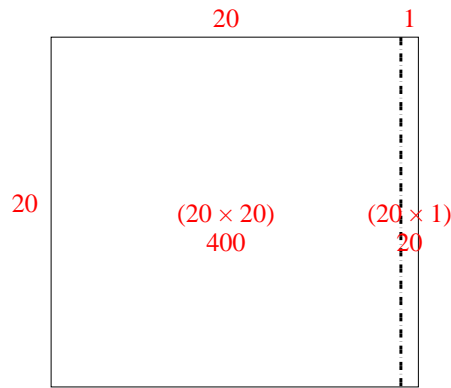
2) $24 \times 20 =$



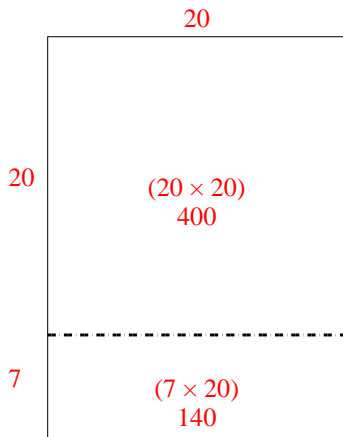
3) $26 \times 20 =$



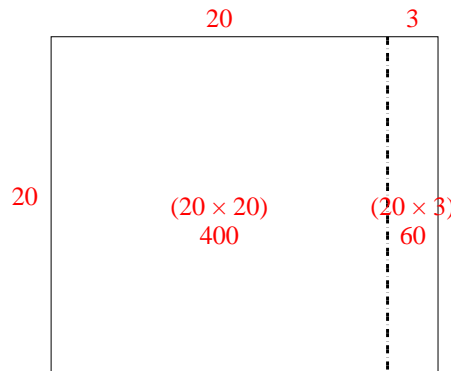
4) $20 \times 21 =$



5) $27 \times 20 =$



6) $20 \times 23 =$



Respuestas

1. 680
2. 480
3. 520
4. 420
5. 540
6. 460