





Usar la matriz proporcionada para resolver cada problema.


1)  $30 \times 21 =$




2)  $28 \times 20 =$




3)  $20 \times 25 =$




4)  $21 \times 20 =$



5)  $26 \times 20 =$



6)  $23 \times 20 =$



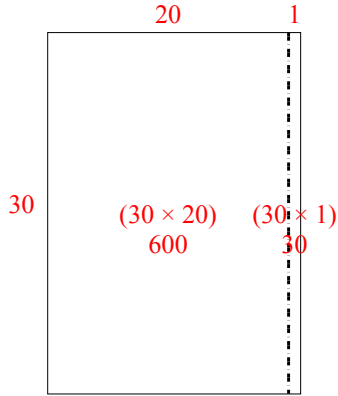
**Respuestas**

- 1. \_\_\_\_\_
- 2. \_\_\_\_\_
- 3. \_\_\_\_\_
- 4. \_\_\_\_\_
- 5. \_\_\_\_\_
- 6. \_\_\_\_\_

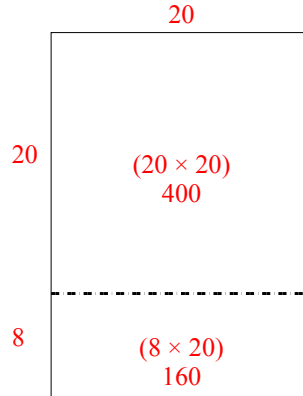


Usar la matriz proporcionada para resolver cada problema.

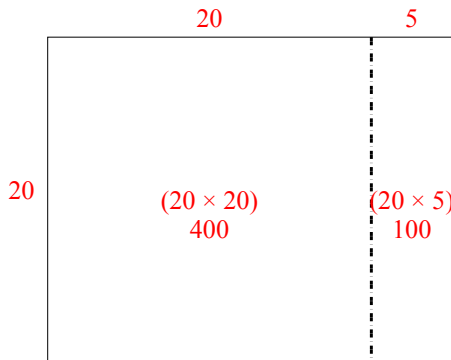
1)  $30 \times 21 =$



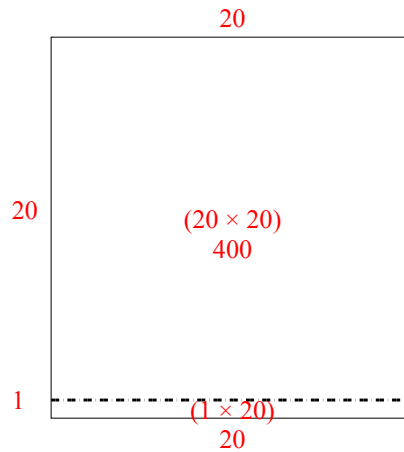
2)  $28 \times 20 =$



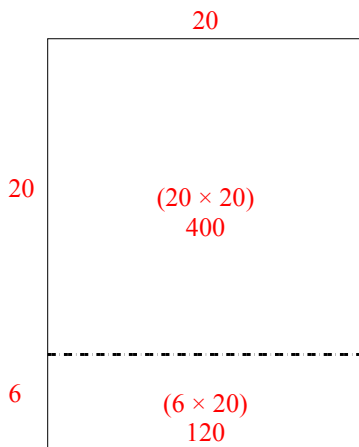
3)  $20 \times 25 =$



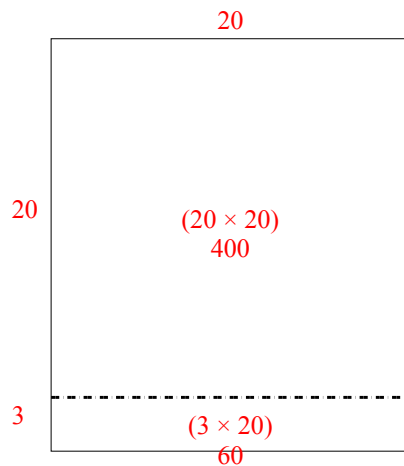
4)  $21 \times 20 =$



5)  $26 \times 20 =$



6)  $23 \times 20 =$



**Respuestas**

1. 630
2. 560
3. 500
4. 420
5. 520
6. 460