





Usar la matriz proporcionada para resolver cada problema.


1) $23 \times 20 =$




2) $28 \times 20 =$




3) $20 \times 27 =$




4) $20 \times 29 =$



5) $25 \times 20 =$



6) $27 \times 20 =$



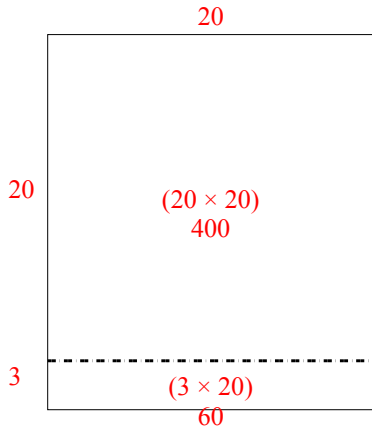
Respuestas

- 1. _____
- 2. _____
- 3. _____
- 4. _____
- 5. _____
- 6. _____

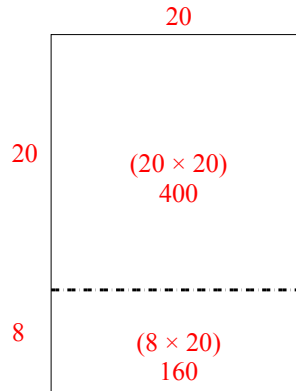


Usar la matriz proporcionada para resolver cada problema.

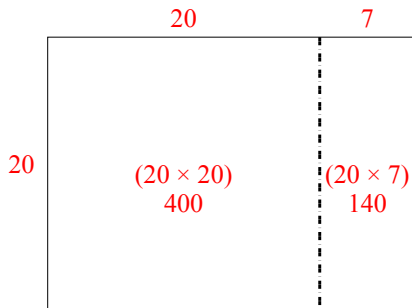
1) $23 \times 20 =$



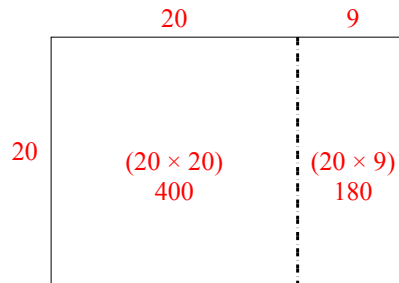
2) $28 \times 20 =$



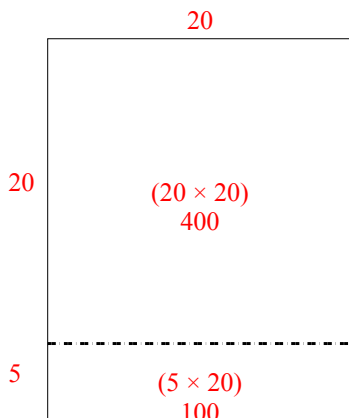
3) $20 \times 27 =$



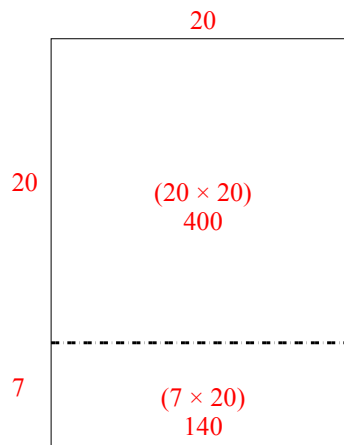
4) $20 \times 29 =$



5) $25 \times 20 =$



6) $27 \times 20 =$



Respuestas

1. 460
2. 560
3. 540
4. 580
5. 500
6. 540