





Usar la matriz proporcionada para resolver cada problema.


1)  $69 \times 63 =$




2)  $33 \times 44 =$



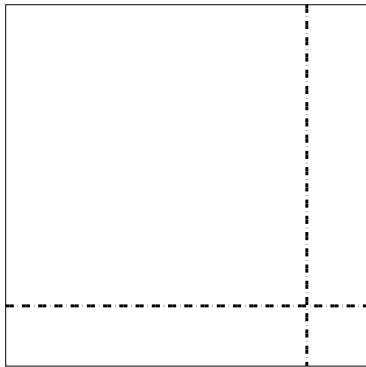
3)  $34 \times 14 =$




4)  $33 \times 26 =$



5)  $36 \times 36 =$



6)  $35 \times 42 =$



**Respuestas**

1. \_\_\_\_\_

2. \_\_\_\_\_

3. \_\_\_\_\_

4. \_\_\_\_\_

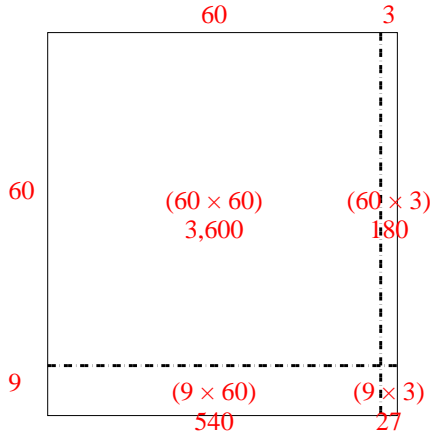
5. \_\_\_\_\_

6. \_\_\_\_\_

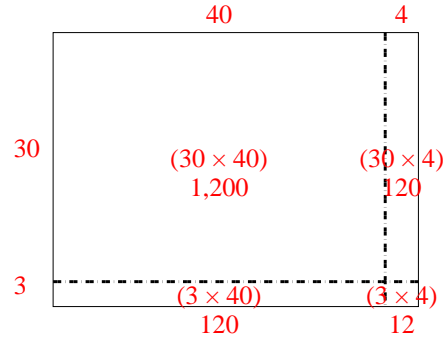


Usar la matriz proporcionada para resolver cada problema.

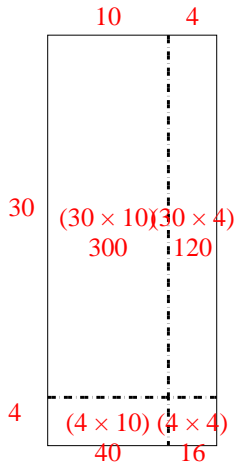
1)  $69 \times 63 =$



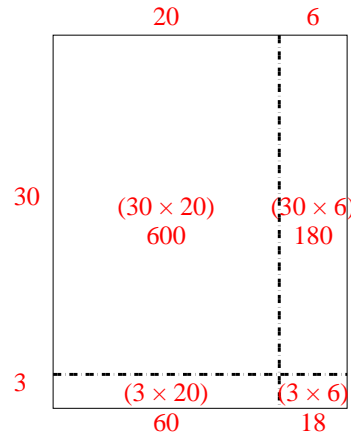
2)  $33 \times 44 =$



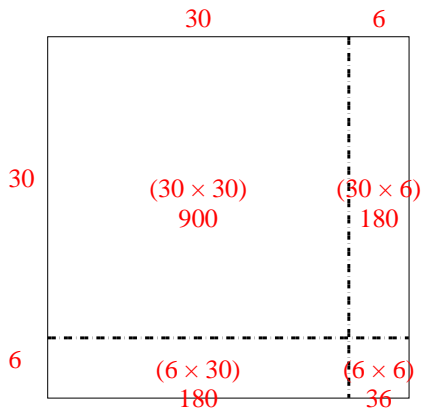
3)  $34 \times 14 =$



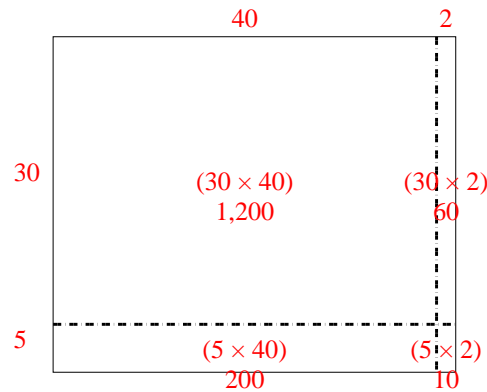
4)  $33 \times 26 =$



5)  $36 \times 36 =$



6)  $35 \times 42 =$



**Respuestas**

1. 4,347
2. 1,452
3. 476
4. 858
5. 1,296
6. 1,470