


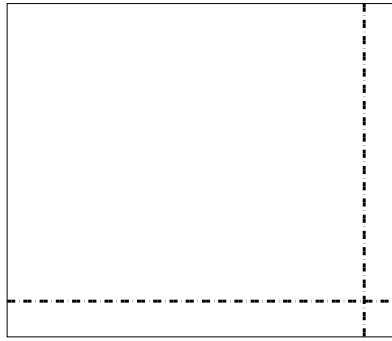


Usar la matriz proporcionada para resolver cada problema.


1)  $59 \times 35 =$




2)  $56 \times 66 =$




3)  $56 \times 53 =$




4)  $44 \times 24 =$



5)  $33 \times 29 =$



6)  $36 \times 27 =$



**Respuestas**

1. \_\_\_\_\_

2. \_\_\_\_\_

3. \_\_\_\_\_

4. \_\_\_\_\_

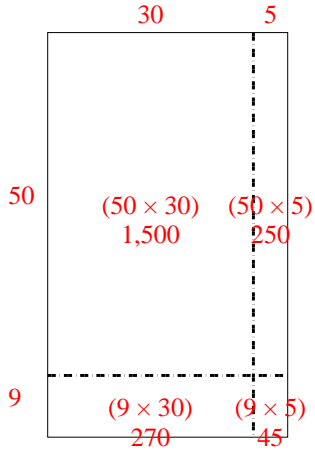
5. \_\_\_\_\_

6. \_\_\_\_\_

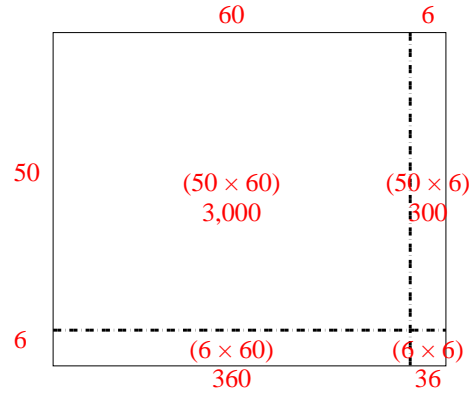


Usar la matriz proporcionada para resolver cada problema.

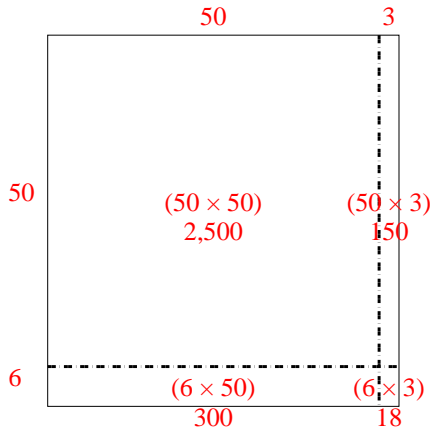
1)  $59 \times 35 =$



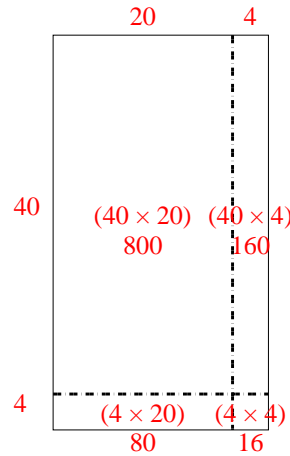
2)  $56 \times 66 =$



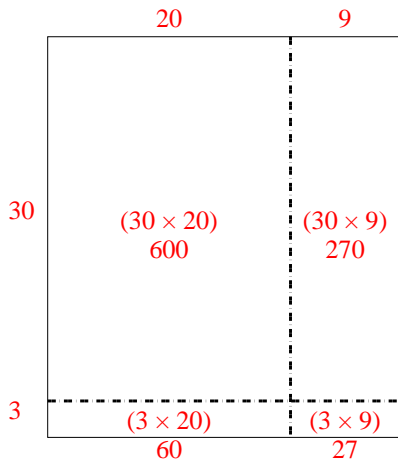
3)  $56 \times 53 =$



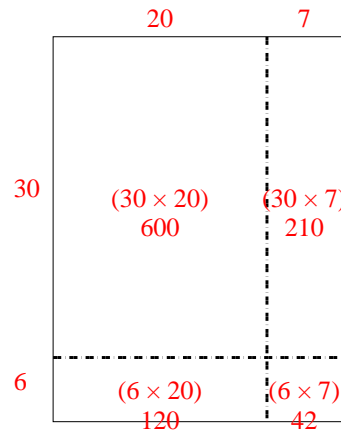
4)  $44 \times 24 =$



5)  $33 \times 29 =$



6)  $36 \times 27 =$



**Respuestas**

1. 2,065
2. 3,696
3. 2,968
4. 1,056
5. 957
6. 972