





Usar la matriz proporcionada para resolver cada problema.


1)  $64 \times 49 =$




2)  $48 \times 25 =$



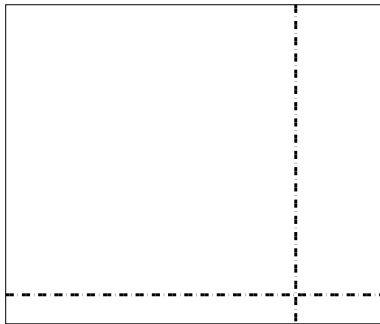
3)  $43 \times 24 =$




4)  $35 \times 42 =$



5)  $33 \times 39 =$



6)  $32 \times 43 =$



**Respuestas**

1. \_\_\_\_\_

2. \_\_\_\_\_

3. \_\_\_\_\_

4. \_\_\_\_\_

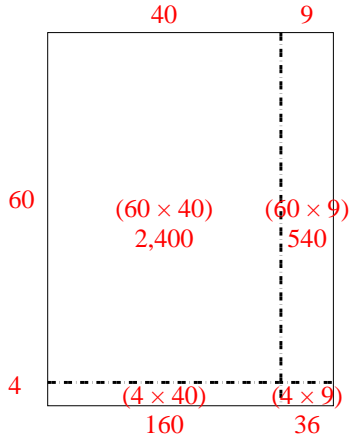
5. \_\_\_\_\_

6. \_\_\_\_\_

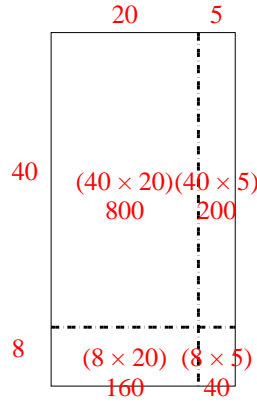


Usar la matriz proporcionada para resolver cada problema.

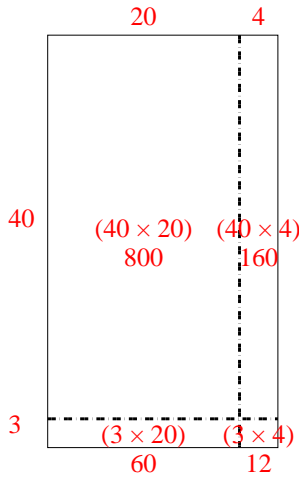
1)  $64 \times 49 =$



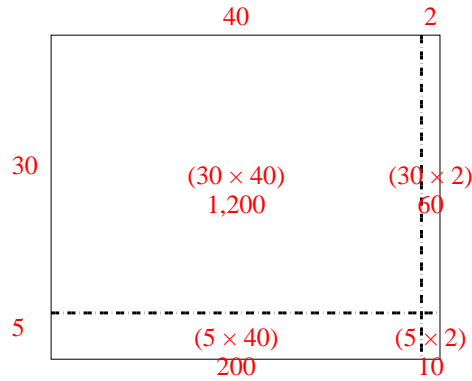
2)  $48 \times 25 =$



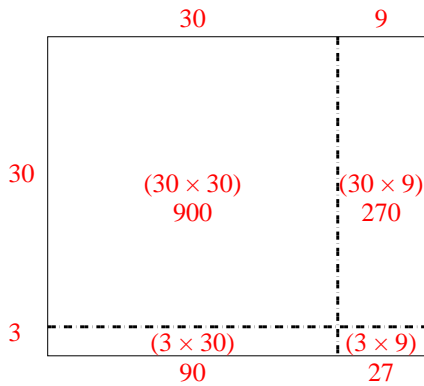
3)  $43 \times 24 =$



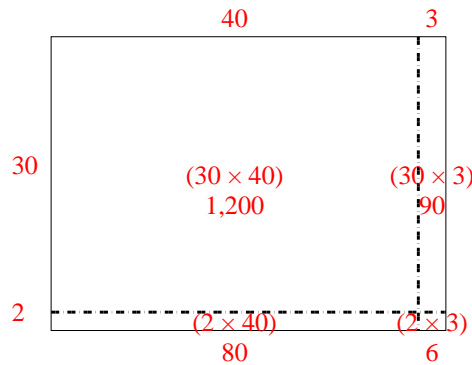
4)  $35 \times 42 =$



5)  $33 \times 39 =$



6)  $32 \times 43 =$



**Respuestas**

1. 3,136
2. 1,200
3. 1,032
4. 1,470
5. 1,287
6. 1,376