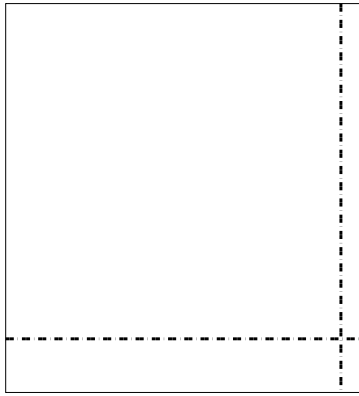





Usar la matriz proporcionada para resolver cada problema.


1) $58 \times 53 =$




2) $57 \times 47 =$




3) $48 \times 32 =$




4) $35 \times 15 =$



5) $33 \times 28 =$



6) $32 \times 46 =$



Respuestas

1. _____

2. _____

3. _____

4. _____

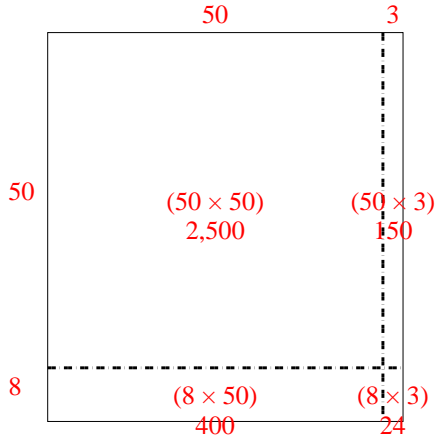
5. _____

6. _____

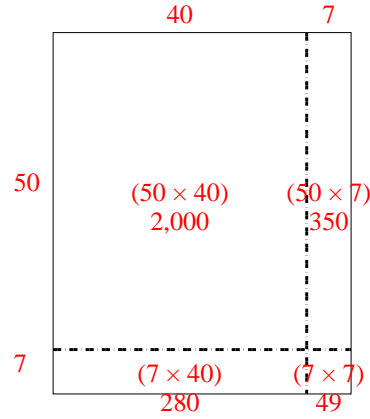


Usar la matriz proporcionada para resolver cada problema.

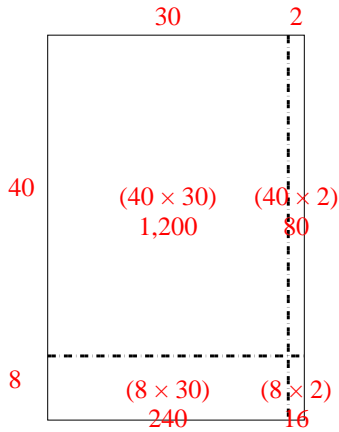
1) $58 \times 53 =$



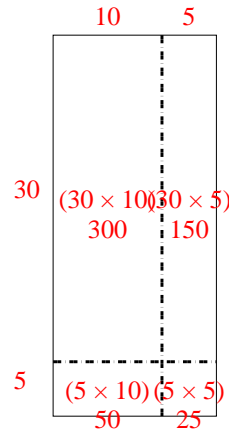
2) $57 \times 47 =$



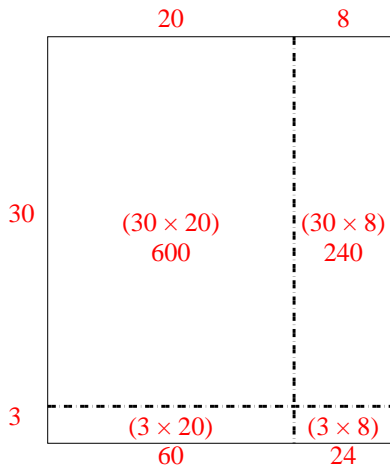
3) $48 \times 32 =$



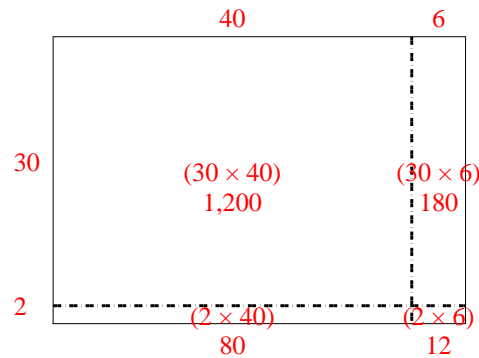
4) $35 \times 15 =$



5) $33 \times 28 =$



6) $32 \times 46 =$



Respuestas

1. 3,074
2. 2,679
3. 1,536
4. 525
5. 924
6. 1,472